

SORU: Aşağıdaki şekilleri köşe adlarına göre isimlendiriniz. (ABC üçgeni, KLMN karesi ... gibi)

U

M

I

Z

V

D

O

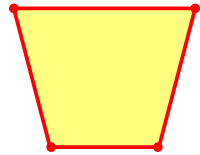
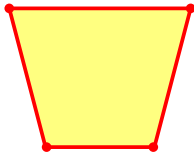
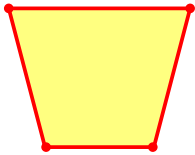
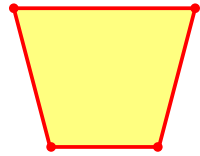
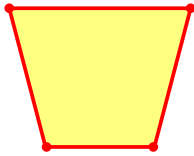
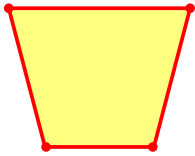
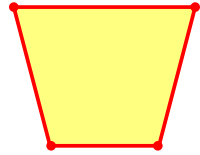
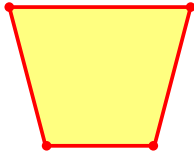
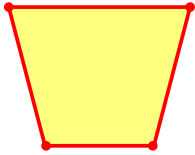
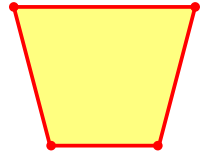
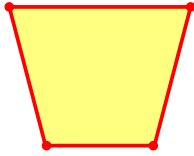
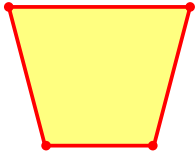
N

G

J

E

B



SORU: Aşağıdaki şekilleri köşe adlarına göre isimlendiriniz. (ABC üçgeni, KLMN karesi ... gibi)

Ü

A

İ

R

T

H

F

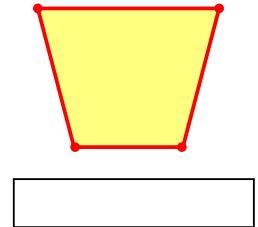
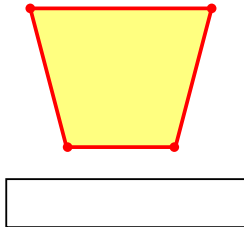
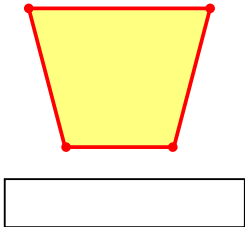
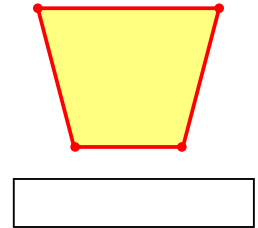
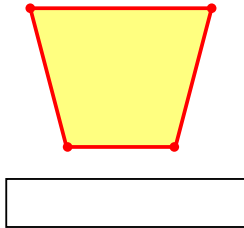
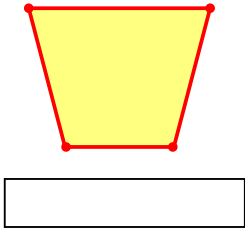
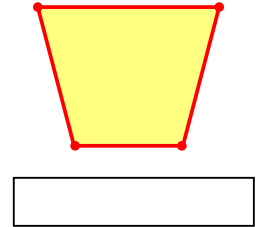
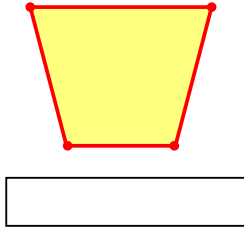
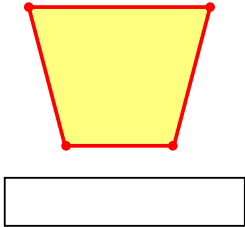
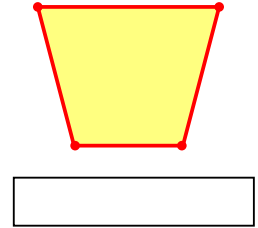
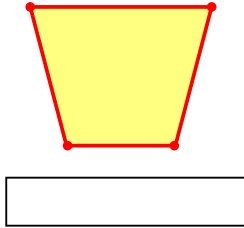
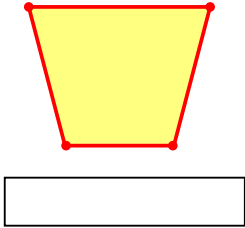
Ç

Ö

Y

Ğ

K



SÜREÇ ODAKLI DEĞERLENDİRME ÖLÇEĞİ

Doğru Sayısı: / 24

Öğretmen ilgili kutucuğu işaretler.

Geliştirilmeli (0-8)

İyi (9-14)

Çok İyi (15-20)

Mükemmel (21-24)



Hazırlayan:

Bu bölüme sınıfınızın ilgili kazanıma yönelik genel durumuna ilişkin gözlem ve izlenimlerinizi, öğrencilerinizin bu kazanımla ilgili öğrenme eksikliklerini ve bu eksikliklerin giderilmesi amacıyla yaptığınız/yapmayı planladığınız faaliyetleri not edebilirsiniz.

No	Adı - Soyadı	Toplam Puan	Değerlendirme
1			
2			
3			
4			
5			
6			
7			
8			
9			
10			
11			
12			
13			
14			
15			
16			
17			
18			
19			
20			
21			
22			
23			
24			
25			
26			
27			
28			
29			
30			
31			
32			
33			
34			
35			

Hazırlayan: