

**SORU:** Aşağıdaki şekilleri köşe adlarına göre isimlendiriniz. (ABC üçgeni, KLMN karesi ... gibi)

U

Ğ

Y

V

N

D

T

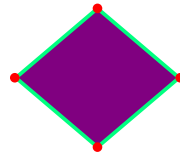
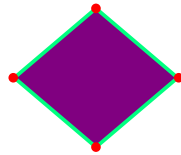
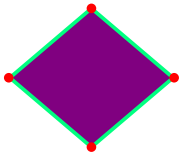
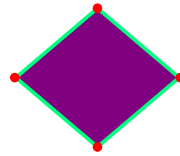
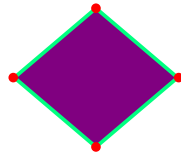
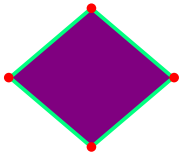
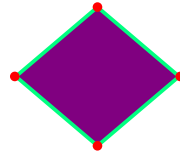
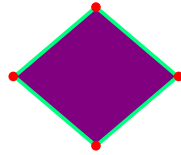
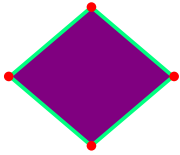
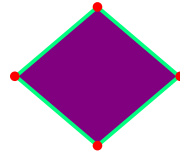
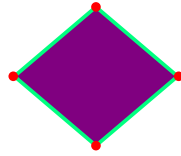
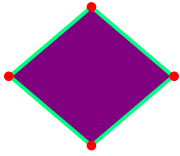
H

R

L

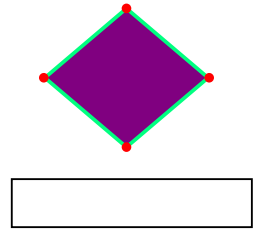
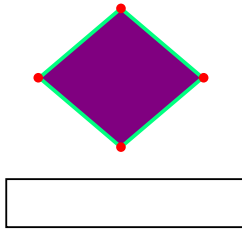
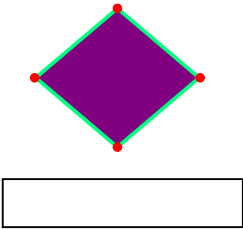
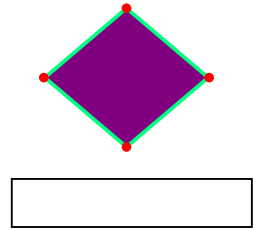
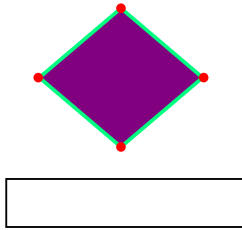
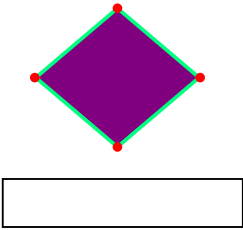
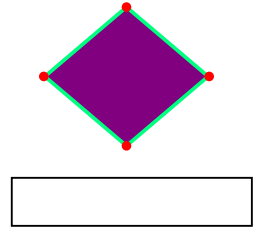
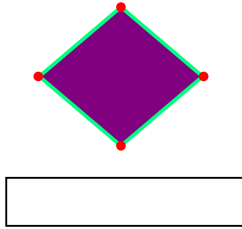
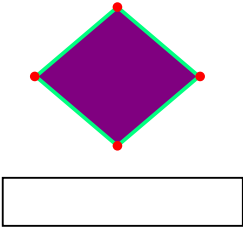
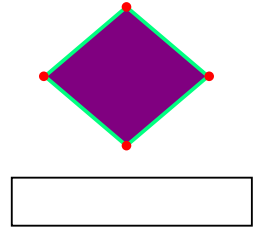
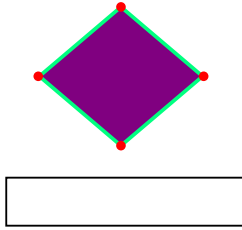
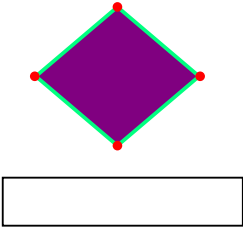
Ş

J



**SORU:** Aşağıdaki şekilleri köşe adlarına göre isimlendiriniz. (ABC üçgeni, KLMN karesi ... gibi)

P	Ö	G	O	A	Z
İ	K	I	S	C	E



SÜREÇ ODAKLI DEĞERLENDİRME ÖLÇEĞİ			
Doğru Sayısı: ..... / 24		Öğretmen ilgili kutucuğu işaretler.	
Geliştirilmeli (0-8)	İyi (9-14)	Çok İyi (15-20)	Mükemmel (21-24)
<input type="checkbox"/>	<input type="checkbox"/>	<input type="checkbox"/>	<input type="checkbox"/>

Hazırlayan: .....

Bu bölüme sınıfınızın ilgili kazanıma yönelik genel durumuna ilişkin gözlem ve izlenimlerinizi, öğrencilerinizin bu kazanımla ilgili öğrenme eksikliklerini ve bu eksikliklerin giderilmesi amacıyla yaptığınız/yapmayı planladığınız faaliyetleri not edebilirsiniz.

No	Adı - Soyadı	Toplam Puan	Değerlendirme
1			
2			
3			
4			
5			
6			
7			
8			
9			
10			
11			
12			
13			
14			
15			
16			
17			
18			
19			
20			
21			
22			
23			
24			
25			
26			
27			
28			
29			
30			
31			
32			
33			
34			
35			

Hazırlayan: ..... ..