

SORU: Aşağıdaki şekilleri köşe adlarına göre isimlendiriniz. (ABC üçgeni, KLMN karesi ... gibi)

D

J

N

S

P

L

Z













B

I

G

R

E



SORU: Aşağıdaki şekilleri köşe adlarına göre isimlendiriniz. (ABC üçgeni, KLMN karesi ... gibi)

O

Ş

T

U

K

F

Ü


Ç


M


Y


İ


A

































## SÜREÇ ODAKLI DEĞERLENDİRME ÖLÇEĞİ

Doğru Sayısı: ..... / 24

Öğretmen ilgili kutucuğu işaretler.

Geliştirilmeli (0-8)

İyi (9-14)

Çok İyi (15-20)

Mükemmel (21-24)

☐
☐
☐
☐

Hazırlayan: .....

Bu bölüme sınıfınızın ilgili kazanıma yönelik genel durumuna ilişkin gözlem ve izlenimlerinizi, öğrencilerinizin bu kazanımla ilgili öğrenme eksikliklerini ve bu eksikliklerin giderilmesi amacıyla yaptığınız/yapmayı planladığınız faaliyetleri not edebilirsiniz.

| No | Adı - Soyadı | Toplam Puan | Değerlendirme |
|----|--------------|-------------|---------------|
| 1  |              |             |               |
| 2  |              |             |               |
| 3  |              |             |               |
| 4  |              |             |               |
| 5  |              |             |               |
| 6  |              |             |               |
| 7  |              |             |               |
| 8  |              |             |               |
| 9  |              |             |               |
| 10 |              |             |               |
| 11 |              |             |               |
| 12 |              |             |               |
| 13 |              |             |               |
| 14 |              |             |               |
| 15 |              |             |               |
| 16 |              |             |               |
| 17 |              |             |               |
| 18 |              |             |               |
| 19 |              |             |               |
| 20 |              |             |               |
| 21 |              |             |               |
| 22 |              |             |               |
| 23 |              |             |               |
| 24 |              |             |               |
| 25 |              |             |               |
| 26 |              |             |               |
| 27 |              |             |               |
| 28 |              |             |               |
| 29 |              |             |               |
| 30 |              |             |               |
| 31 |              |             |               |
| 32 |              |             |               |
| 33 |              |             |               |
| 34 |              |             |               |
| 35 |              |             |               |

Hazırlayan: .....