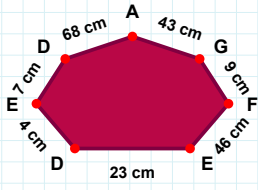
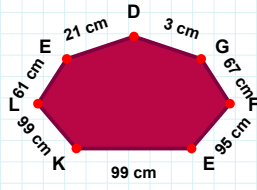


SORU: Aşağıdaki şekillerde istenen kenarın kaç birim veya santimetre olduğunu bulunuz.



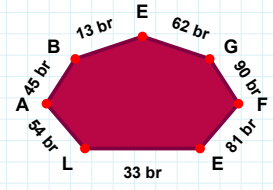
|GD| kaç cmdir?

- ☐ 3 cm
☐ 8 cm
☐ 6 cm



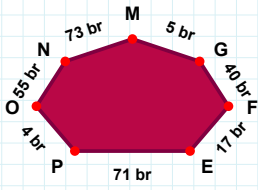
|FG| kaç cmdir?

- ☐ 11 cm
☐ 9 cm
☐ 10 cm



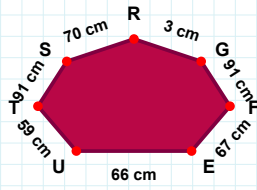
|LE| kaç brdir?

- ☐ 31 br
☐ 33 br
☐ 38 br



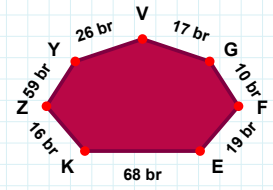
|MN| kaç brdir?

- ☐ 72 br
☐ 73 br
☐ 63 br



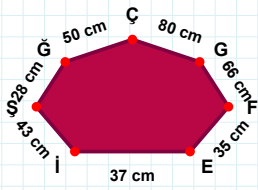
|YZ| kaç brdir?

- ☐ 60 br
☐ 59 br
☐ 69 br



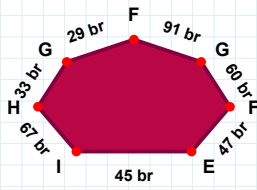
|TU| kaç cmdir?

- ☐ 64 cm
☐ 59 cm
☐ 62 cm



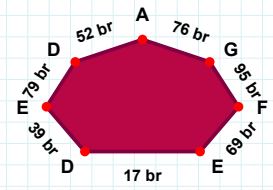
|GF| kaç brdir?

- ☐ 94 br
☐ 86 br
☐ 91 br



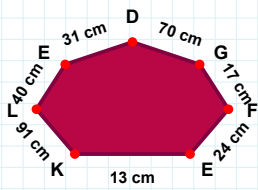
|GA| kaç brdir?

- ☐ 75 br
☐ 76 br
☐ 71 br



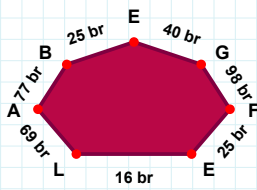
|IE| kaç cmdir?

- ☐ 34 cm
☐ 37 cm
☐ 36 cm



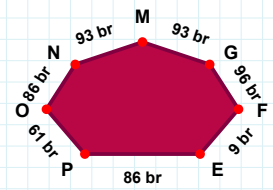
|EB| kaç brdir?

- ☐ 22 br
☐ 25 br
☐ 28 br



|EL| kaç cmdir?

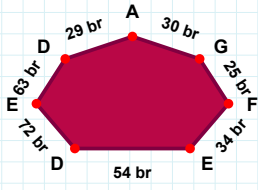
- ☐ 39 cm
☐ 43 cm
☐ 40 cm



|EF| kaç brdir?

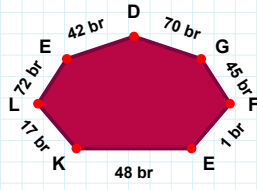
- ☐ 10 br
☐ 8 br
☐ 9 br

SORU: Aşağıdaki şekillerde istenen kenarın kaç birim veya santimetre olduğunu bulunuz.



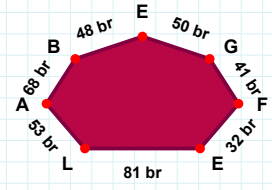
|LE| kaç brdir?

- ☐ 76 br
☐ 81 br
☐ 78 br



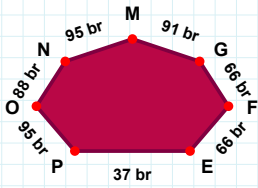
|EF| kaç brdir?

- ☐ 33 br
☐ 34 br
☐ 31 br



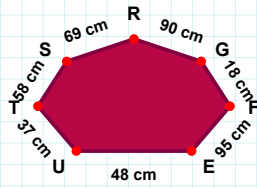
|FG| kaç brdir?

- ☐ 50 br
☐ 44 br
☐ 45 br



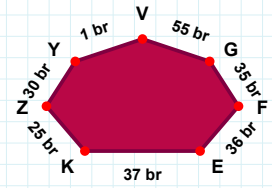
|YZ| kaç brdir?

- ☐ 25 br
☐ 31 br
☐ 30 br



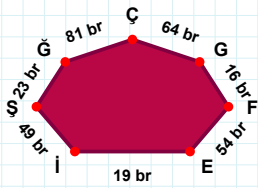
|RS| kaç cmdir?

- ☐ 59 cm
☐ 64 cm
☐ 69 cm



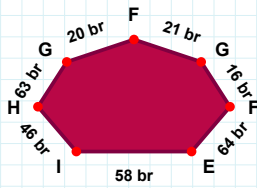
|OP| kaç brdir?

- ☐ 95 br
☐ 85 br
☐ 94 br



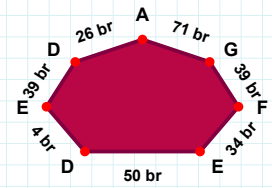
|AD| kaç brdir?

- ☐ 24 br
☐ 26 br
☐ 29 br



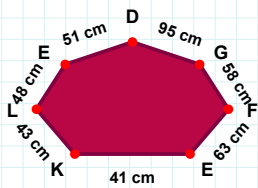
|EF| kaç brdir?

- ☐ 57 br
☐ 53 br
☐ 54 br



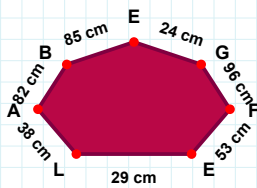
|IE| kaç brdir?

- ☐ 58 br
☐ 57 br
☐ 56 br



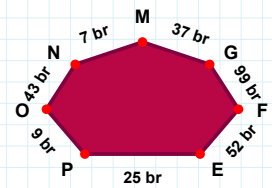
|LK| kaç cmdir?

- ☐ 42 cm
☐ 33 cm
☐ 43 cm



|EF| kaç cmdir?

- ☐ 55 cm
☐ 54 cm
☐ 53 cm



|MN| kaç brdir?

- ☐ 6 br
☐ 10 br
☐ 7 br

SÜREÇ ODAKLI DEĞERLENDİRME ÖLÇEĞİ

Doğru Sayısı: / 24

Öğretmen ilgili kutucuğu işaretler.

Geliştirilmeli (0-8)

İyi (9-14)

Çok İyi (15-20)

Mükemmel (21-24)

☐
☐
☐
☐

Hazırlayan:

Bu bölüme sınıfınızın ilgili kazanıma yönelik genel durumuna ilişkin gözlem ve izlenimlerinizi, öğrencilerinizin bu kazanımla ilgili öğrenme eksikliklerini ve bu eksikliklerin giderilmesi amacıyla yaptığınız/yapmayı planladığınız faaliyetleri not edebilirsiniz.

No	Adı - Soyadı	Toplam Puan	Değerlendirme
1			
2			
3			
4			
5			
6			
7			
8			
9			
10			
11			
12			
13			
14			
15			
16			
17			
18			
19			
20			
21			
22			
23			
24			
25			
26			
27			
28			
29			
30			
31			
32			
33			
34			
35			

Hazırlayan: