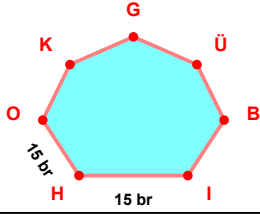
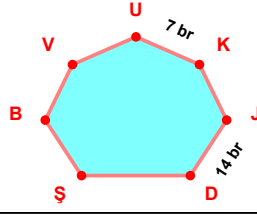


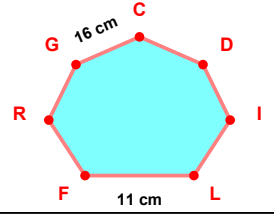
SORU: Aşağıdaki şekillerde verilen, kenar uzunlukları farklarını bulunuz.



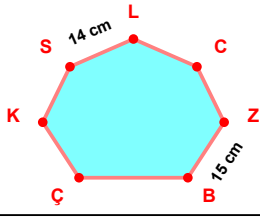
$$|OH| - |HI| = \dots\dots\dots$$



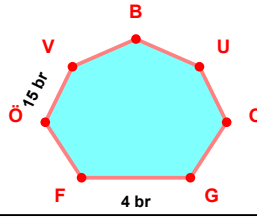
$$|DJ| - |KU| = \dots\dots\dots$$



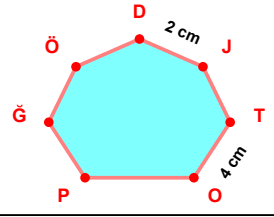
$$|CG| - |FL| = \dots\dots\dots$$



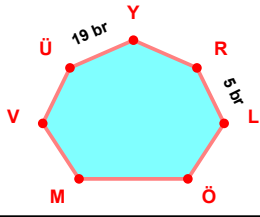
$$|BZ| - |LS| = \dots\dots\dots$$



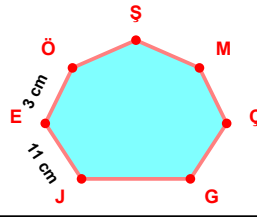
$$|VÖ| - |FG| = \dots\dots\dots$$



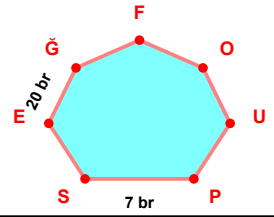
$$|OT| - |JD| = \dots\dots\dots$$



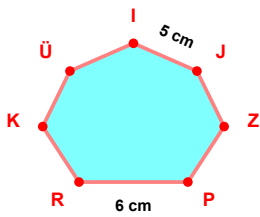
$$|YÜ| - |LR| = \dots\dots\dots$$



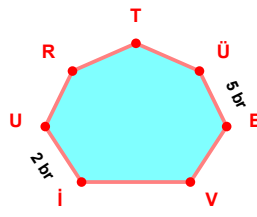
$$|EJ| - |ÖE| = \dots\dots\dots$$



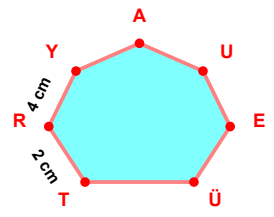
$$|GE| - |SP| = \dots\dots\dots$$



$$|RP| - |JI| = \dots\dots\dots$$

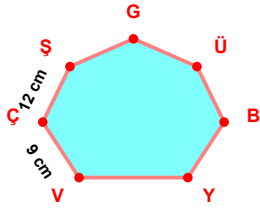


$$|BÜ| - |Üİ| = \dots\dots\dots$$

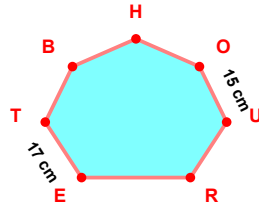


$$|YR| - |RT| = \dots\dots\dots$$

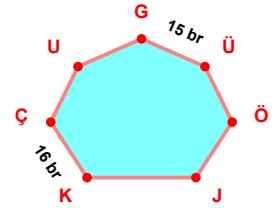
SORU: Aşağıdaki şekillerde verilen, kenar uzunlukları farklarını bulunuz.



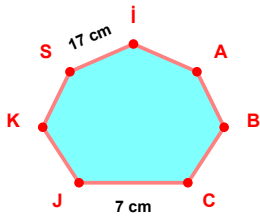
$$|ŞÇ| - |ÇV| = \dots\dots\dots$$



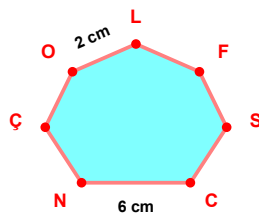
$$|TE| - |OU| = \dots\dots\dots$$



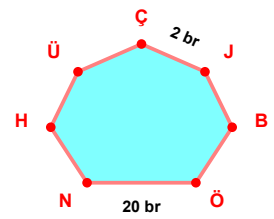
$$|ÇK| - |ÜG| = \dots\dots\dots$$



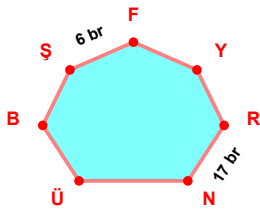
$$|İS| - |JC| = \dots\dots\dots$$



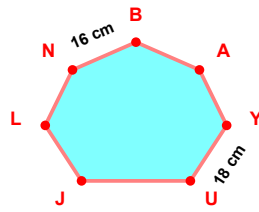
$$|NC| - |LO| = \dots\dots\dots$$



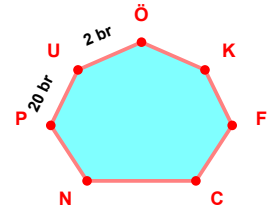
$$|NÖ| - |ÇJ| = \dots\dots\dots$$



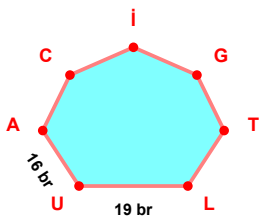
$$|NR| - |FS| = \dots\dots\dots$$



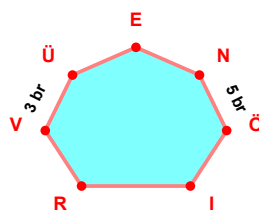
$$|UY| - |BN| = \dots\dots\dots$$



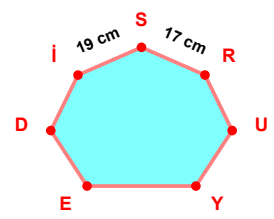
$$|UP| - |ÖU| = \dots\dots\dots$$



$$|UL| - |AU| = \dots\dots\dots$$



$$|ÖN| - |ÜV| = \dots\dots\dots$$



$$|İİ| - |RS| = \dots\dots\dots$$

SÜREÇ ODAKLI DEĞERLENDİRME ÖLÇEĞİ

Doğru Sayısı: / 24

Öğretmen ilgili kutucuğu işaretler.

Geliştirilmeli (0-8)

İyi (9-14)

Çok İyi (15-20)

Mükemmel (21-24)

☐
☐
☐
☐

Hazırlayan:

Bu bölüme sınıfınızın ilgili kazanıma yönelik genel durumuna ilişkin gözlem ve izlenimlerinizi, öğrencilerinizin bu kazanımla ilgili öğrenme eksikliklerini ve bu eksikliklerin giderilmesi amacıyla yaptığınız/yapmayı planladığınız faaliyetleri not edebilirsiniz.

No	Adı - Soyadı	Toplam Puan	Değerlendirme
1			
2			
3			
4			
5			
6			
7			
8			
9			
10			
11			
12			
13			
14			
15			
16			
17			
18			
19			
20			
21			
22			
23			
24			
25			
26			
27			
28			
29			
30			
31			
32			
33			
34			
35			

Hazırlayan: