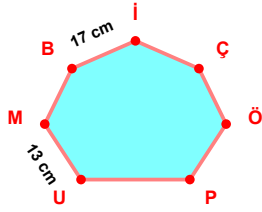
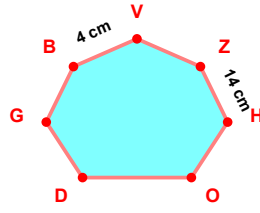


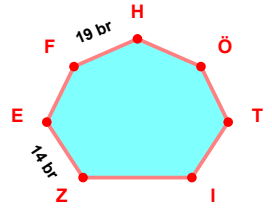
SORU: Aşağıdaki şekillerde verilen, kenar uzunlukları farklarını bulunuz.



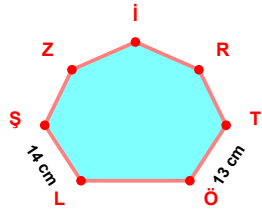
$$|İB| - |MU| = \dots\dots$$



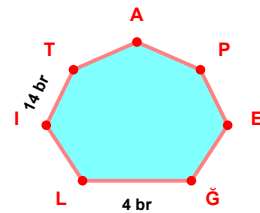
$$|HZ| - |VB| = \dots\dots$$



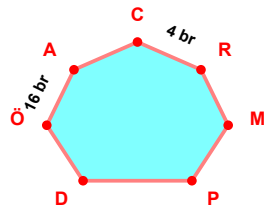
$$|HF| - |EZ| = \dots\dots$$



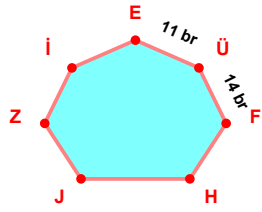
$$|ŞL| - |ÖT| = \dots\dots$$



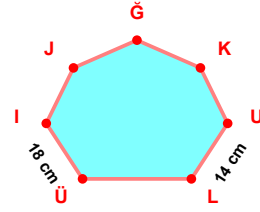
$$|TI| - |LĞ| = \dots\dots$$



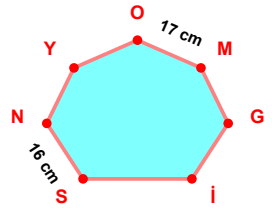
$$|AÖ| - |RC| = \dots\dots$$



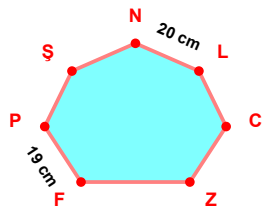
$$|FÜ| - |ÜE| = \dots\dots$$



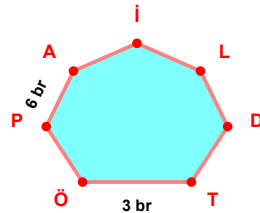
$$|İÜ| - |LU| = \dots\dots$$



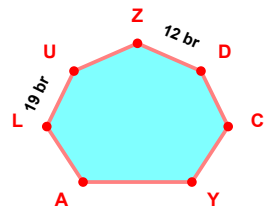
$$|MO| - |NS| = \dots\dots$$



$$|LN| - |PF| = \dots\dots$$

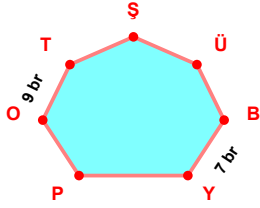


$$|AP| - |ÖT| = \dots\dots$$

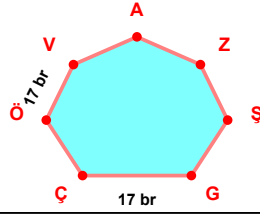


$$|UL| - |DZ| = \dots\dots$$

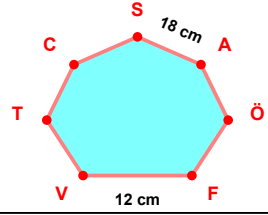
SORU: Aşağıdaki şekillerde verilen, kenar uzunlukları farklarını bulunuz.



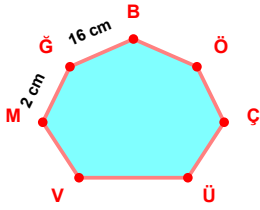
$$|TO| - |YB| = \dots\dots\dots$$



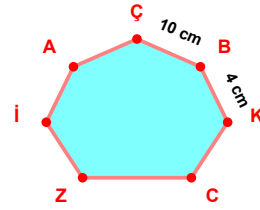
$$|VÖ| - |ÇG| = \dots\dots\dots$$



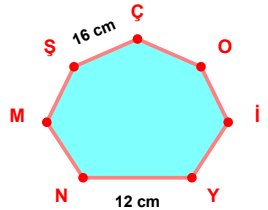
$$|AS| - |VF| = \dots\dots\dots$$



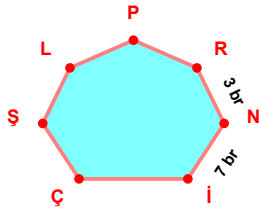
$$|BÖ| - |MĞ| = \dots\dots\dots$$



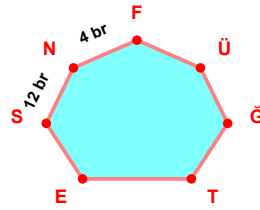
$$|ÇB| - |KB| = \dots\dots\dots$$



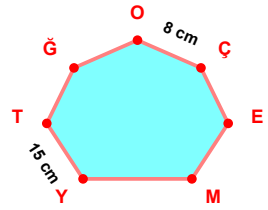
$$|ÇŞ| - |NY| = \dots\dots\dots$$



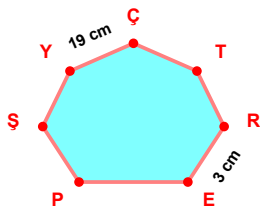
$$|İN| - |NR| = \dots\dots\dots$$



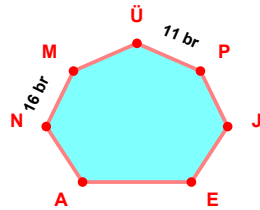
$$|NS| - |FN| = \dots\dots\dots$$



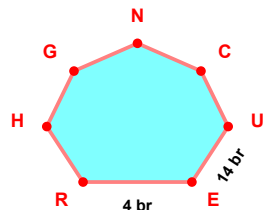
$$|TY| - |ÇO| = \dots\dots\dots$$



$$|CY| - |ER| = \dots\dots\dots$$



$$|MN| - |PÜ| = \dots\dots\dots$$



$$|EU| - |RE| = \dots\dots\dots$$

SÜREÇ ODAKLI DEĞERLENDİRME ÖLÇEĞİ

Doğru Sayısı: / 24

Öğretmen ilgili kutucuğu işaretler.

Geliştirilmeli (0-8)

İyi (9-14)

Çok İyi (15-20)

Mükemmel (21-24)

☐
☐
☐
☐

Hazırlayan:

Bu bölüme sınıfınızın ilgili kazanıma yönelik genel durumuna ilişkin gözlem ve izlenimlerinizi, öğrencilerinizin bu kazanımla ilgili öğrenme eksikliklerini ve bu eksikliklerin giderilmesi amacıyla yaptığınız/yapmayı planladığınız faaliyetleri not edebilirsiniz.

No	Adı - Soyadı	Toplam Puan	Değerlendirme
1			
2			
3			
4			
5			
6			
7			
8			
9			
10			
11			
12			
13			
14			
15			
16			
17			
18			
19			
20			
21			
22			
23			
24			
25			
26			
27			
28			
29			
30			
31			
32			
33			
34			
35			

Hazırlayan: