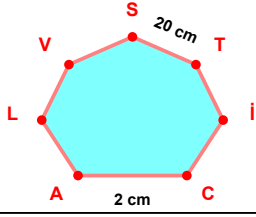
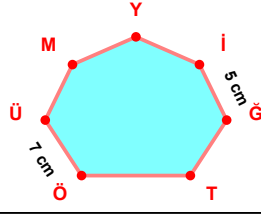


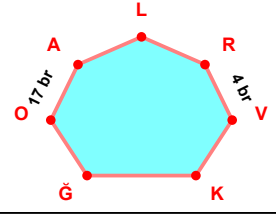
SORU: Aşağıdaki şekillerde verilen, kenar uzunlukları farklarını bulunuz.



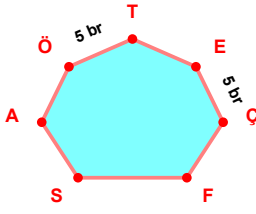
$$|TS| - |AC| = \dots\dots$$



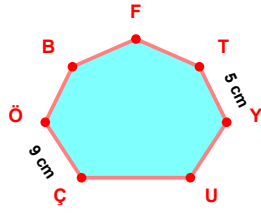
$$|ÜÖ| - |Ğİ| = \dots\dots$$



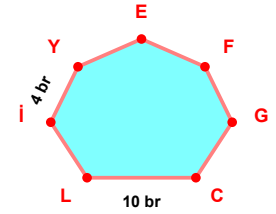
$$|AO| - |VR| = \dots\dots$$



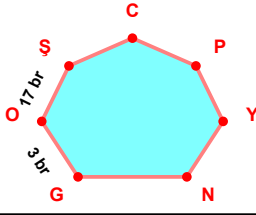
$$|ÇE| - |TÖ| = \dots\dots$$



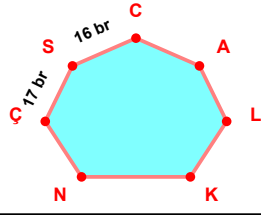
$$|ÖÇ| - |YT| = \dots\dots$$



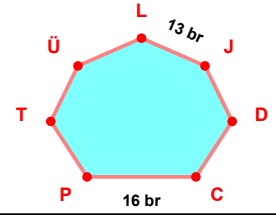
$$|LC| - |Yİ| = \dots\dots$$



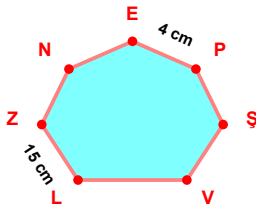
$$|SO| - |OG| = \dots\dots$$



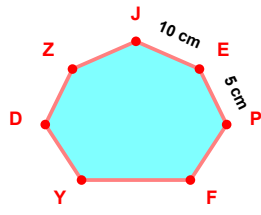
$$|SÇ| - |CS| = \dots\dots$$



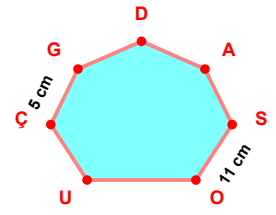
$$|PC| - |JL| = \dots\dots$$



$$|ZL| - |PE| = \dots\dots$$

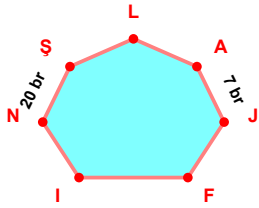


$$|EJ| - |PE| = \dots\dots$$

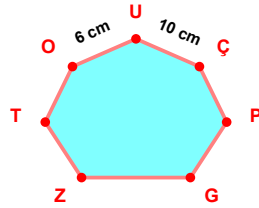


$$|OS| - |GÇ| = \dots\dots$$

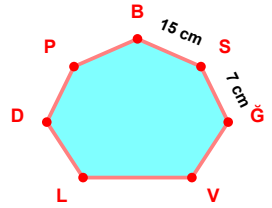
SORU: Aşağıdaki şekillerde verilen, kenar uzunlukları farklarını bulunuz.



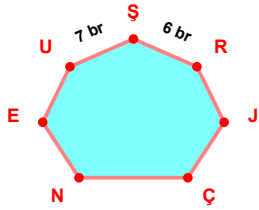
$$|SN| - |JA| = \dots\dots\dots$$



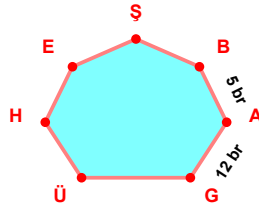
$$|ÇU| - |UO| = \dots\dots\dots$$



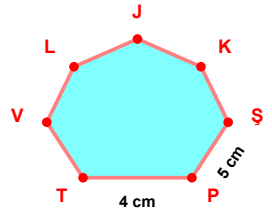
$$|SB| - |GS| = \dots\dots\dots$$



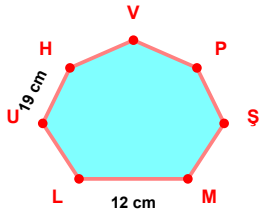
$$|SU| - |RS| = \dots\dots\dots$$



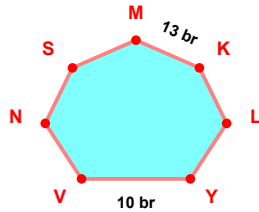
$$|GA| - |AB| = \dots\dots\dots$$



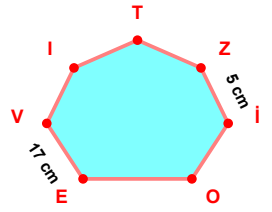
$$|ŞP| - |TP| = \dots\dots\dots$$



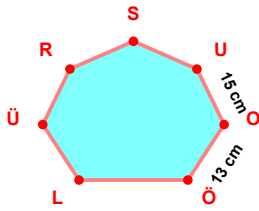
$$|HU| - |LM| = \dots\dots\dots$$



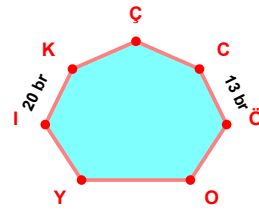
$$|KM| - |VY| = \dots\dots\dots$$



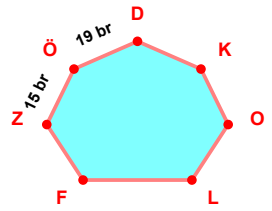
$$|VE| - |İZ| = \dots\dots\dots$$



$$|OU| - |ÖO| = \dots\dots\dots$$



$$|KI| - |ÖC| = \dots\dots\dots$$



$$|DÖ| - |ÖZ| = \dots\dots\dots$$

SÜREÇ ODAKLI DEĞERLENDİRME ÖLÇEĞİ

Doğru Sayısı: / 24

Öğretmen ilgili kutucuğu işaretler.

Geliştirilmeli (0-8)

İyi (9-14)

Çok İyi (15-20)

Mükemmel (21-24)

☐
☐
☐
☐

Hazırlayan:

Bu bölüme sınıfınızın ilgili kazanıma yönelik genel durumuna ilişkin gözlem ve izlenimlerinizi, öğrencilerinizin bu kazanımla ilgili öğrenme eksikliklerini ve bu eksikliklerin giderilmesi amacıyla yaptığınız/yapmayı planladığınız faaliyetleri not edebilirsiniz.

No	Adı - Soyadı	Toplam Puan	Değerlendirme
1			
2			
3			
4			
5			
6			
7			
8			
9			
10			
11			
12			
13			
14			
15			
16			
17			
18			
19			
20			
21			
22			
23			
24			
25			
26			
27			
28			
29			
30			
31			
32			
33			
34			
35			

Hazırlayan: