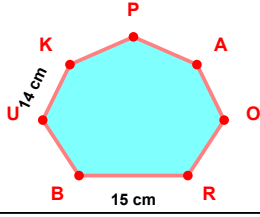
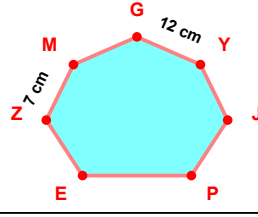


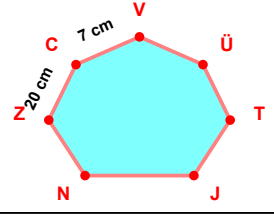
SORU: Aşağıdaki şekillerde verilen, kenar uzunlukları farklarını bulunuz.



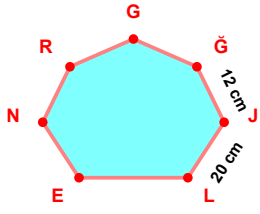
$$|BR| - |KU| = \dots\dots\dots$$



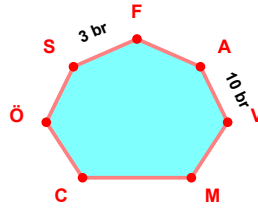
$$|YG| - |MZ| = \dots\dots\dots$$



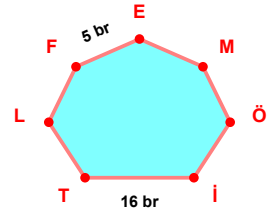
$$|CZ| - |VC| = \dots\dots\dots$$



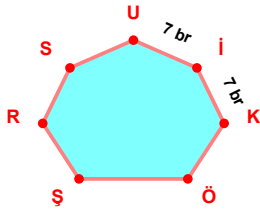
$$|LJ| - |JĞ| = \dots\dots\dots$$



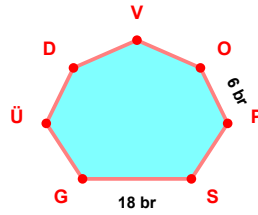
$$|VA| - |FS| = \dots\dots\dots$$



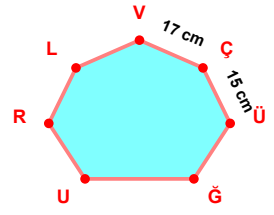
$$|İİ| - |EF| = \dots\dots\dots$$



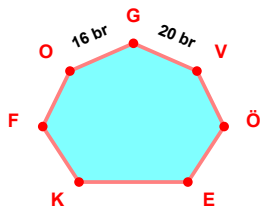
$$|Kİ| - |İU| = \dots\dots\dots$$



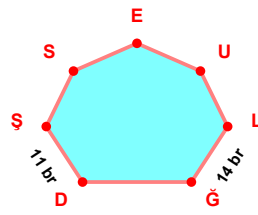
$$|GS| - |PO| = \dots\dots\dots$$



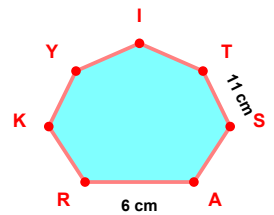
$$|ÇV| - |ÜÇ| = \dots\dots\dots$$



$$|VG| - |GO| = \dots\dots\dots$$

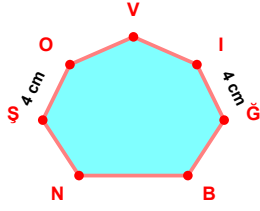


$$|ĞL| - |ŞD| = \dots\dots\dots$$

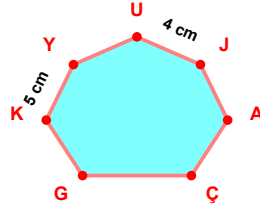


$$|ST| - |RA| = \dots\dots\dots$$

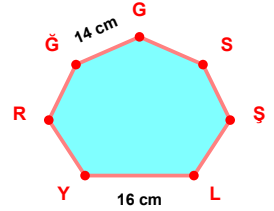
SORU: Aşağıdaki şekillerde verilen, kenar uzunlukları farklarını bulunuz.



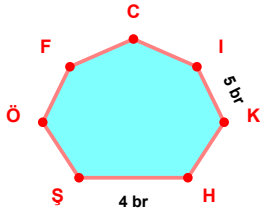
$$|OS| - |GI| = \dots\dots$$



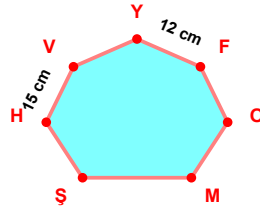
$$|YK| - |JU| = \dots\dots$$



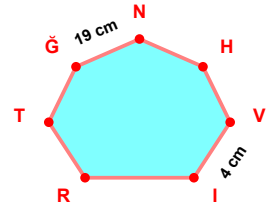
$$|YL| - |GŞ| = \dots\dots$$



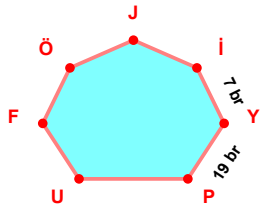
$$|KI| - |SH| = \dots\dots$$



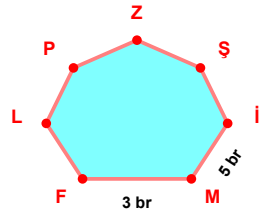
$$|VH| - |FY| = \dots\dots$$



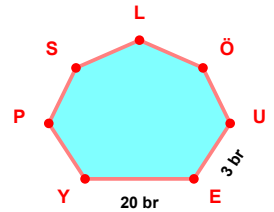
$$|NĞ| - |IV| = \dots\dots$$



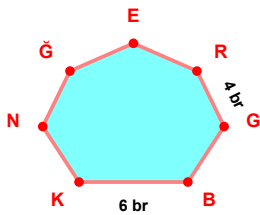
$$|PY| - |Yİ| = \dots\dots$$



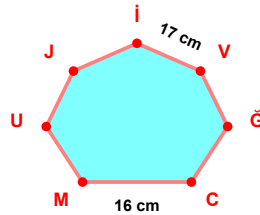
$$|MI| - |FM| = \dots\dots$$



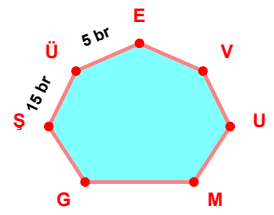
$$|YE| - |EU| = \dots\dots$$



$$|KB| - |GR| = \dots\dots$$



$$|Vİ| - |MC| = \dots\dots$$



$$|ÜŞ| - |EÜ| = \dots\dots$$

SÜREÇ ODAKLI DEĞERLENDİRME ÖLÇEĞİ

Doğru Sayısı: / 24

Öğretmen ilgili kutucuğu işaretler.

Geliştirilmeli (0-8)

İyi (9-14)

Çok İyi (15-20)

Mükemmel (21-24)

☐
☐
☐
☐

Hazırlayan:

Bu bölüme sınıfınızın ilgili kazanıma yönelik genel durumuna ilişkin gözlem ve izlenimlerinizi, öğrencilerinizin bu kazanımla ilgili öğrenme eksikliklerini ve bu eksikliklerin giderilmesi amacıyla yaptığınız/yapmayı planladığınız faaliyetleri not edebilirsiniz.

No	Adı - Soyadı	Toplam Puan	Değerlendirme
1			
2			
3			
4			
5			
6			
7			
8			
9			
10			
11			
12			
13			
14			
15			
16			
17			
18			
19			
20			
21			
22			
23			
24			
25			
26			
27			
28			
29			
30			
31			
32			
33			
34			
35			

Hazırlayan: