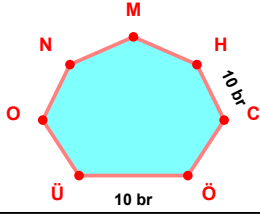
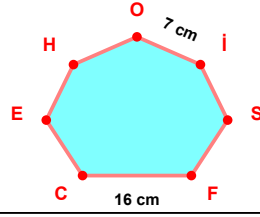


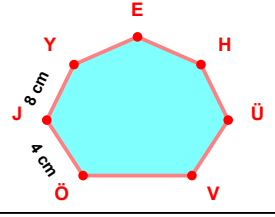
SORU: Aşağıdaki şekillerde verilen, kenar uzunlukları farklarını bulunuz.



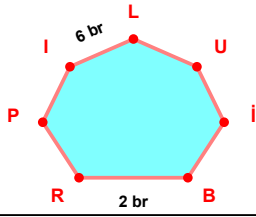
$$|CH| - |ÜÖ| = \dots\dots\dots$$



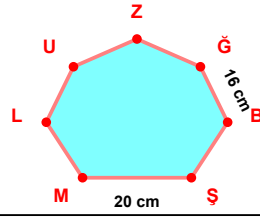
$$|CF| - |İÖ| = \dots\dots\dots$$



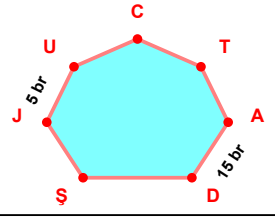
$$|YJ| - |JÖ| = \dots\dots\dots$$



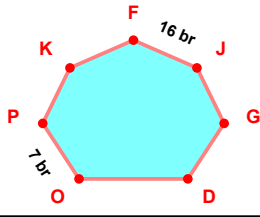
$$|LI| - |RB| = \dots\dots\dots$$



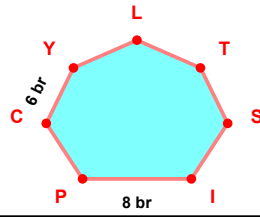
$$|MŞ| - |BĞ| = \dots\dots\dots$$



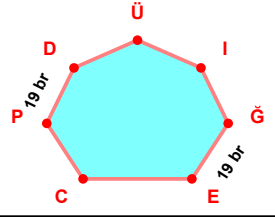
$$|DA| - |JU| = \dots\dots\dots$$



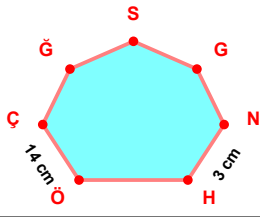
$$|JF| - |PO| = \dots\dots\dots$$



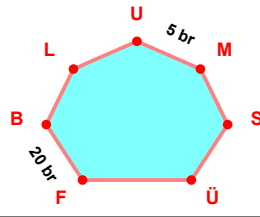
$$|PI| - |YC| = \dots\dots\dots$$



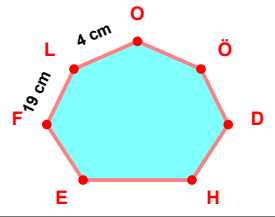
$$|DP| - |İĞ| = \dots\dots\dots$$



$$|ÇÖ| - |HN| = \dots\dots\dots$$

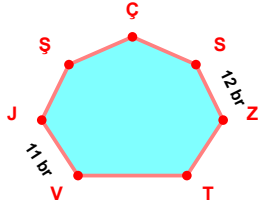


$$|BF| - |MU| = \dots\dots\dots$$

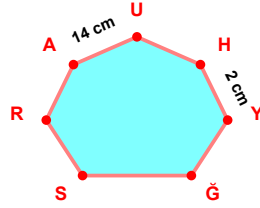


$$|LF| - |OL| = \dots\dots\dots$$

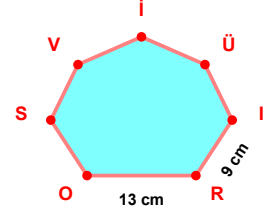
SORU: Aşağıdaki şekillerde verilen, kenar uzunlukları farklarını bulunuz.



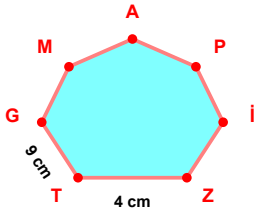
$$|ZS| - |JV| = \dots\dots\dots$$



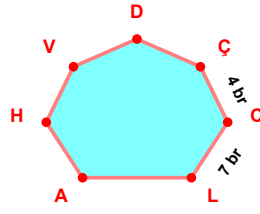
$$|UA| - |YH| = \dots\dots\dots$$



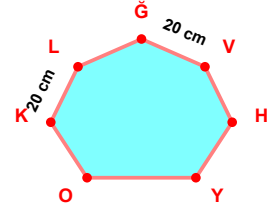
$$|OR| - |RI| = \dots\dots\dots$$



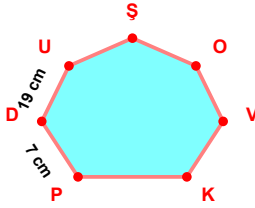
$$|GT| - |TZ| = \dots\dots\dots$$



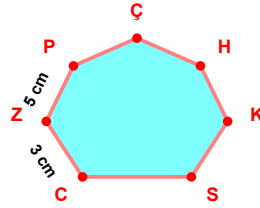
$$|LC| - |CÇ| = \dots\dots\dots$$



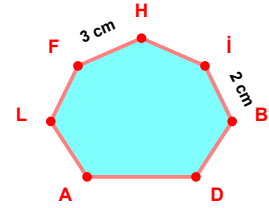
$$|VĞ| - |LK| = \dots\dots\dots$$



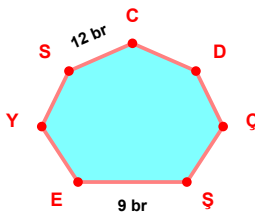
$$|UD| - |DP| = \dots\dots\dots$$



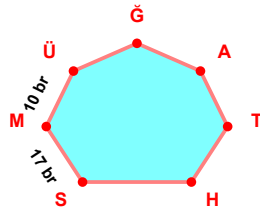
$$|PZ| - |ZC| = \dots\dots\dots$$



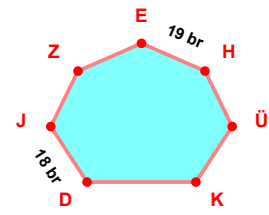
$$|HF| - |BI| = \dots\dots\dots$$



$$|CS| - |ES| = \dots\dots\dots$$



$$|MS| - |ÜM| = \dots\dots\dots$$



$$|HE| - |JD| = \dots\dots\dots$$

SÜREÇ ODAKLI DEĞERLENDİRME ÖLÇEĞİ

Doğru Sayısı: / 24

Öğretmen ilgili kutucuğu işaretler.

Geliştirilmeli (0-8)

İyi (9-14)

Çok İyi (15-20)

Mükemmel (21-24)

☐
☐
☐
☐

Hazırlayan:

Bu bölüme sınıfınızın ilgili kazanıma yönelik genel durumuna ilişkin gözlem ve izlenimlerinizi, öğrencilerinizin bu kazanımla ilgili öğrenme eksikliklerini ve bu eksikliklerin giderilmesi amacıyla yaptığınız/yapmayı planladığınız faaliyetleri not edebilirsiniz.

No	Adı - Soyadı	Toplam Puan	Değerlendirme
1			
2			
3			
4			
5			
6			
7			
8			
9			
10			
11			
12			
13			
14			
15			
16			
17			
18			
19			
20			
21			
22			
23			
24			
25			
26			
27			
28			
29			
30			
31			
32			
33			
34			
35			

Hazırlayan: