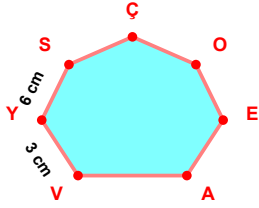
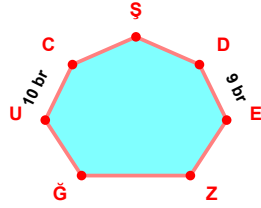


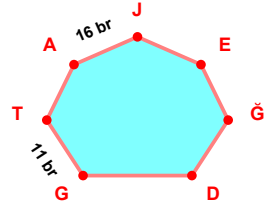
SORU: Aşağıdaki şekillerde verilen, kenar uzunlukları farklarını bulunuz.



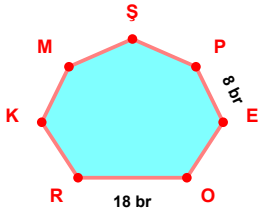
$$|SY| - |YV| = \dots\dots\dots$$



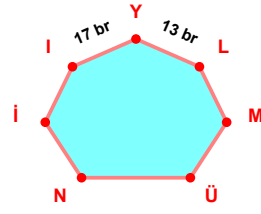
$$|CU| - |ED| = \dots\dots\dots$$



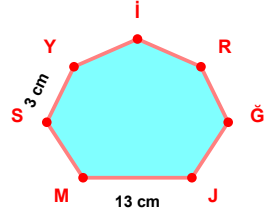
$$|JA| - |TG| = \dots\dots\dots$$



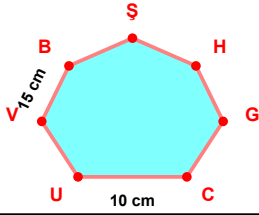
$$|RO| - |EP| = \dots\dots\dots$$



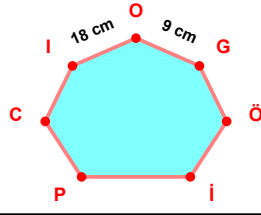
$$|Yİ| - |LY| = \dots\dots\dots$$



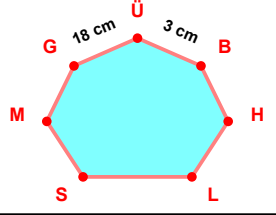
$$|MJ| - |YS| = \dots\dots\dots$$



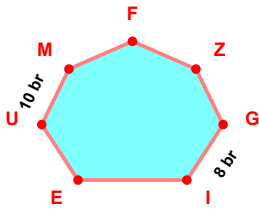
$$|BV| - |UC| = \dots\dots\dots$$



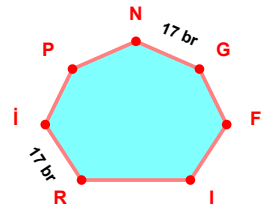
$$|OI| - |GO| = \dots\dots\dots$$



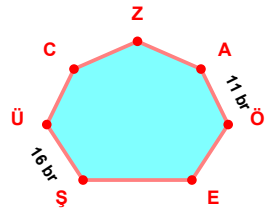
$$|ÜG| - |BÜ| = \dots\dots\dots$$



$$|MU| - |IG| = \dots\dots\dots$$

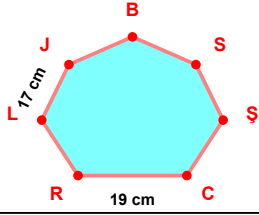


$$|İR| - |GN| = \dots\dots\dots$$

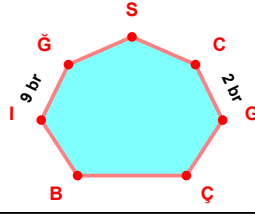


$$|ÜŞ| - |ÖA| = \dots\dots\dots$$

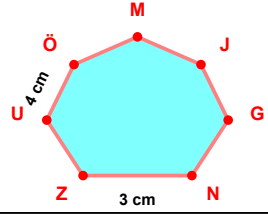
SORU: Aşağıdaki şekillerde verilen, kenar uzunlukları farklarını bulunuz.



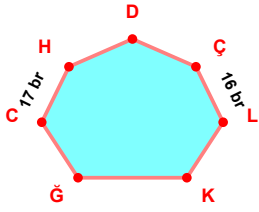
$$|RC| - |JL| = \dots\dots$$



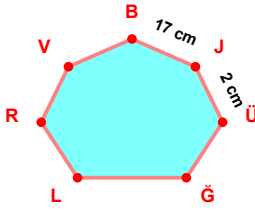
$$|Ğİ| - |GC| = \dots\dots$$



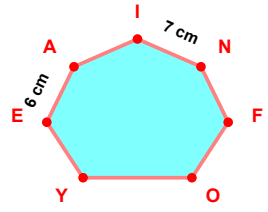
$$|ÖU| - |ZN| = \dots\dots$$



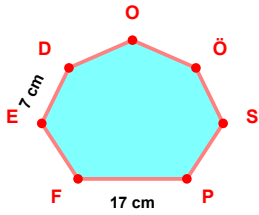
$$|HC| - |LC| = \dots\dots$$



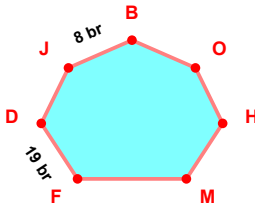
$$|JB| - |ÜJ| = \dots\dots$$



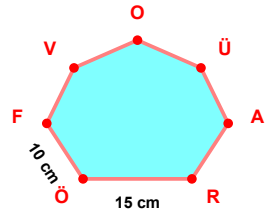
$$|NI| - |AE| = \dots\dots$$



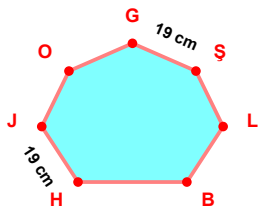
$$|FP| - |DE| = \dots\dots$$



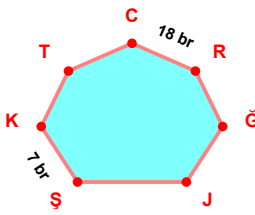
$$|DF| - |BJ| = \dots\dots$$



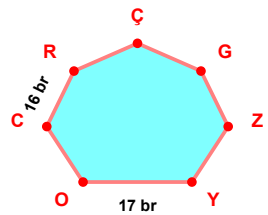
$$|ÖR| - |FÖ| = \dots\dots$$



$$|JH| - |ŞG| = \dots\dots$$



$$|RC| - |KŞ| = \dots\dots$$



$$|OY| - |RC| = \dots\dots$$

## SÜREÇ ODAKLI DEĞERLENDİRME ÖLÇEĞİ

Doğru Sayısı: ..... / 24

Öğretmen ilgili kutucuğu işaretler.

Geliştirilmeli (0-8)

İyi (9-14)

Çok İyi (15-20)

Mükemmel (21-24)

☐
☐
☐
☐

Hazırlayan: .....

Bu bölüme sınıfınızın ilgili kazanıma yönelik genel durumuna ilişkin gözlem ve izlenimlerinizi, öğrencilerinizin bu kazanımla ilgili öğrenme eksikliklerini ve bu eksikliklerin giderilmesi amacıyla yaptığınız/yapmayı planladığınız faaliyetleri not edebilirsiniz.

No	Adı - Soyadı	Toplam Puan	Değerlendirme
1			
2			
3			
4			
5			
6			
7			
8			
9			
10			
11			
12			
13			
14			
15			
16			
17			
18			
19			
20			
21			
22			
23			
24			
25			
26			
27			
28			
29			
30			
31			
32			
33			
34			
35			

Hazırlayan: .....