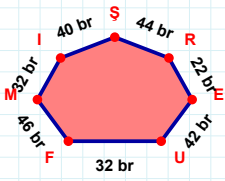
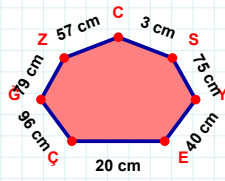


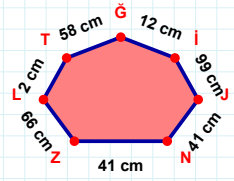
**SORU:** Aşağıdaki geometrik şekillerle ilgili soruları cevaplayınız.

44 br hangi kenara aittir?

- ☐ ER kenarı  
☐ FU kenarı  
☐ FR kenarı

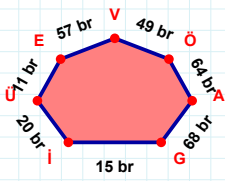
 $|SC| + |EY| = \dots$ 

Cevap: ..... cm

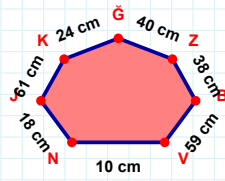


99 cm hangi kenara aittir?

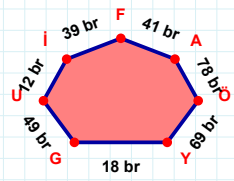
Kenar: .....

 $|EÜ|$  kaç brdir?

- ☐ 10 br  
☐ 11 br  
☐ 12 br

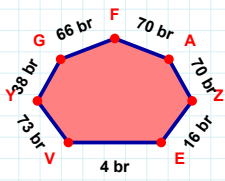
 $|JN| + |NV| = \dots$ 

Cevap: ..... cm

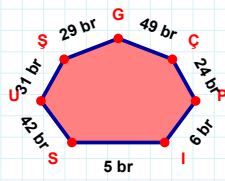


41 br hangi kenara aittir?

- ☐ GY kenarı  
☐ YÖ kenarı  
☐ YF kenarı

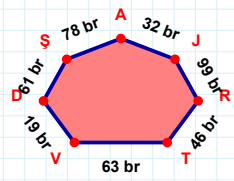
 $|EZ|$  kaç brdir?

- ☐ 15 br  
☐ 16 br  
☐ 17 br

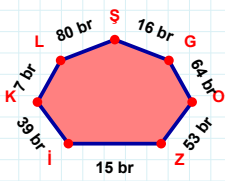


49 br hangi kenara aittir?

- ☐ US kenarı  
☐ PÇ kenarı  
☐ PG kenarı

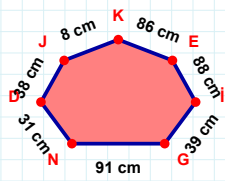
 $|AŞ|$  kaç brdir?

- ☐ 77 br  
☐ 78 br  
☐ 79 br

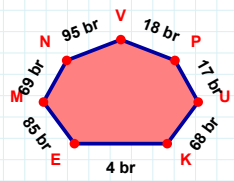


53 br hangi kenara aittir?

Kenar: .....

 $|JD|$  kaç cmdir?

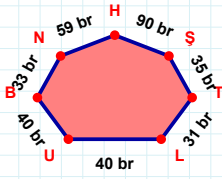
- ☐ 37 cm  
☐ 38 cm  
☐ 39 cm



68 br hangi kenara aittir?

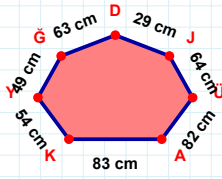
Kenar: .....

**SORU:** Aşağıdaki geometrik şekillerle ilgili soruları cevaplayınız.



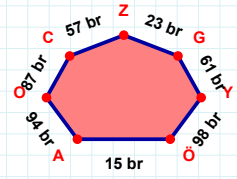
$$|TS| + |BU| = \dots$$

Cevap: ..... br



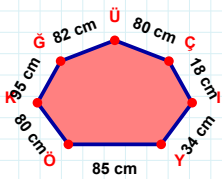
49 cm hangi kenara aittir?

Kenar: .....



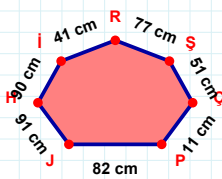
|GZ| kaç brdir?

- ☐ 22 br  
☐ 23 br  
☐ 24 br



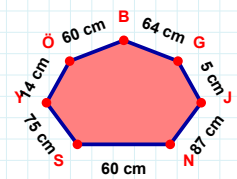
|İÇ| kaç cmdir?

- ☐ 17 cm  
☐ 18 cm  
☐ 19 cm



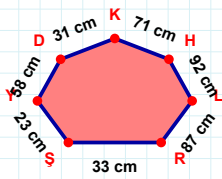
82 cm hangi kenara aittir?

Kenar: .....



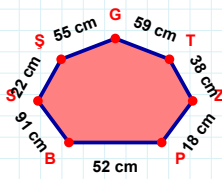
|YS| kaç cmdir?

- ☐ 74 cm  
☐ 75 cm  
☐ 76 cm



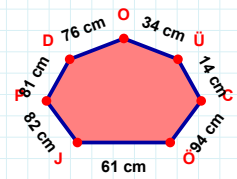
71 cm hangi kenara aittir?

- ☐ LH kenarı  
☐ HK kenarı  
☐ YR kenarı



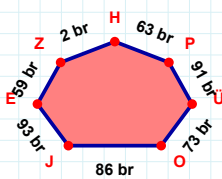
55 cm hangi kenara aittir?

Kenar: .....



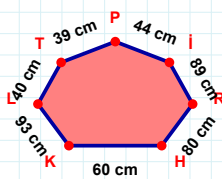
76 cm hangi kenara aittir?

Kenar: .....



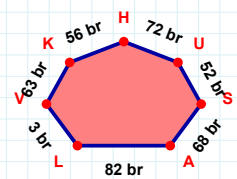
$$|ZE| + |OÜ| = \dots$$

Cevap: ..... br



$$|PT| + |HR| = \dots$$

Cevap: ..... cm



$$|UH| + |LA| = \dots$$

Cevap: ..... br

### SÜREÇ ODAKLI DEĞERLENDİRME ÖLÇEĞİ

Doğru Sayısı: ..... / 24

Öğretmen ilgili kutucuğu işaretler.

Geliştirilmeli (0-8)

İyi (9-14)

Çok İyi (15-20)

Mükemmel (21-24)

☐
☐
☐
☐

Hazırlayan: .....

Bu bölüme sınıfınızın ilgili kazanıma yönelik genel durumuna ilişkin gözlem ve izlenimlerinizi, öğrencilerinizin bu kazanımla ilgili öğrenme eksikliklerini ve bu eksikliklerin giderilmesi amacıyla yaptığınız/yapmayı planladığınız faaliyetleri not edebilirsiniz.

No	Adı - Soyadı	Toplam Puan	Değerlendirme
1			
2			
3			
4			
5			
6			
7			
8			
9			
10			
11			
12			
13			
14			
15			
16			
17			
18			
19			
20			
21			
22			
23			
24			
25			
26			
27			
28			
29			
30			
31			
32			
33			
34			
35			

Hazırlayan: .....