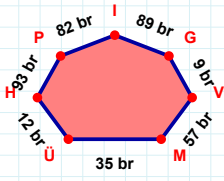
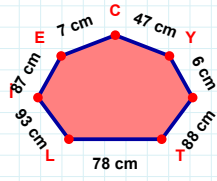


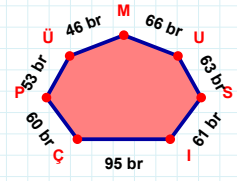
SORU: Aşağıdaki geometrik şekillerle ilgili soruları cevaplayınız.

9 br hangi kenara aittir?

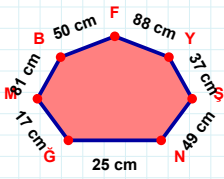
Kenar:

 $|TI| + |CE| = \dots$

Cevap: cm

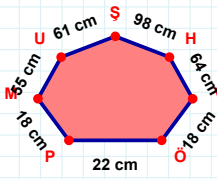
 $|ÇI|$ kaç brdir?

- ☐ 94 br
☐ 95 br
☐ 96 br



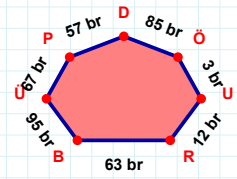
49 cm hangi kenara aittir?

Kenar:

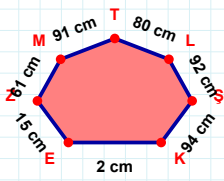


64 cm hangi kenara aittir?

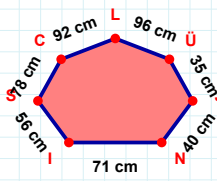
Kenar:

 $|ÖD|$ kaç brdir?

- ☐ 84 br
☐ 85 br
☐ 86 br

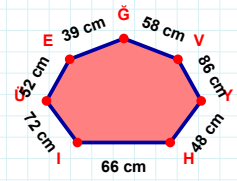
 $|TM|$ kaç cmdir?

- ☐ 90 cm
☐ 91 cm
☐ 92 cm



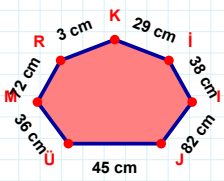
96 cm hangi kenara aittir?

Kenar:

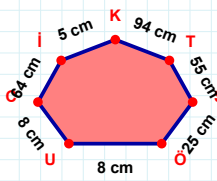


58 cm hangi kenara aittir?

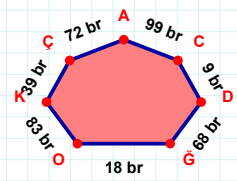
- ☐ EÜ kenarı
☐ HE kenarı
☐ YV kenarı

 $|MÜ|$ kaç cmdir?

- ☐ 35 cm
☐ 36 cm
☐ 37 cm

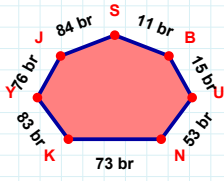
 $|KI| + |TK| = \dots$

Cevap: cm

 $|OĞ|$ kaç brdir?

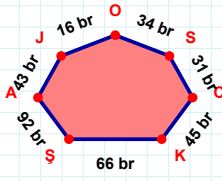
- ☐ 17 br
☐ 18 br
☐ 19 br

SORU: Aşağıdaki geometrik şekillerle ilgili soruları cevaplayınız.



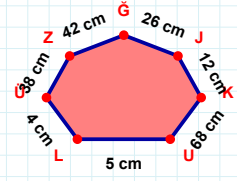
|NU| kaç brdir?

- ☐ 52 br
☐ 53 br
☐ 54 br



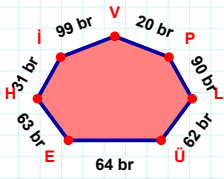
66 br hangi kenara aittir?

Kenar:



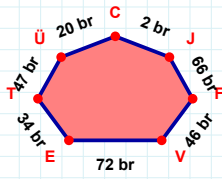
26 cm hangi kenara aittir?

Kenar:



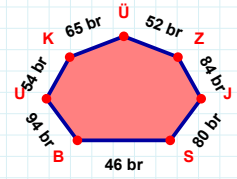
20 br hangi kenara aittir?

Kenar:



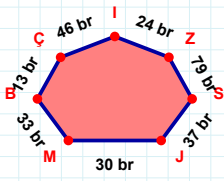
|FJ| + |VF| =

Cevap: br



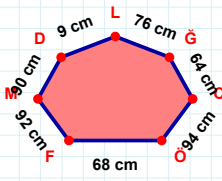
|ÜK| kaç brdir?

- ☐ 64 br
☐ 65 br
☐ 66 br



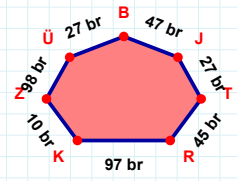
|ÇB| kaç brdir?

- ☐ 12 br
☐ 13 br
☐ 14 br



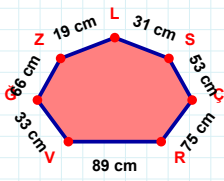
9 cm hangi kenara aittir?

Kenar:



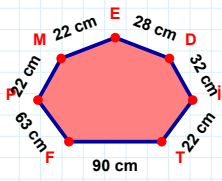
|JB| + |TJ| =

Cevap: br



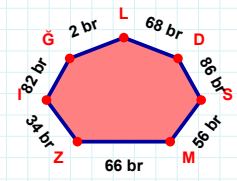
31 cm hangi kenara aittir?

- ☐ ÇS kenarı
☐ ÇĞ kenarı
☐ LZ kenarı



22 cm hangi kenara aittir?

Kenar:



|ĞL| kaç brdir?

- ☐ 81 br
☐ 82 br
☐ 83 br

SÜREÇ ODAKLI DEĞERLENDİRME ÖLÇEĞİ

Doğru Sayısı: / 24

Öğretmen ilgili kutucuğu işaretler.

Geliştirilmeli (0-8)

İyi (9-14)

Çok İyi (15-20)

Mükemmel (21-24)

☐
☐
☐
☐

Hazırlayan:

Bu bölüme sınıfınızın ilgili kazanıma yönelik genel durumuna ilişkin gözlem ve izlenimlerinizi, öğrencilerinizin bu kazanımla ilgili öğrenme eksikliklerini ve bu eksikliklerin giderilmesi amacıyla yaptığınız/yapmayı planladığınız faaliyetleri not edebilirsiniz.

No	Adı - Soyadı	Toplam Puan	Değerlendirme
1			
2			
3			
4			
5			
6			
7			
8			
9			
10			
11			
12			
13			
14			
15			
16			
17			
18			
19			
20			
21			
22			
23			
24			
25			
26			
27			
28			
29			
30			
31			
32			
33			
34			
35			

Hazırlayan: