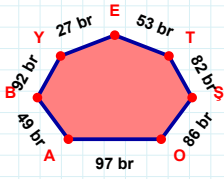
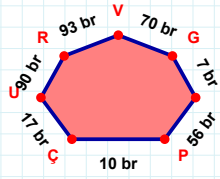


SORU: Aşağıdaki geometrik şekillerle ilgili soruları cevaplayınız.

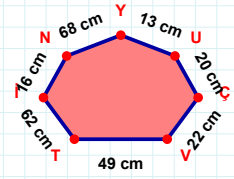
53 br hangi kenara aittir?

- ☐ ŞY kenarı
☐ BA kenarı
☐ TE kenarı



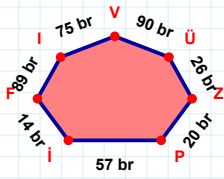
56 br hangi kenara aittir?

Kenar:



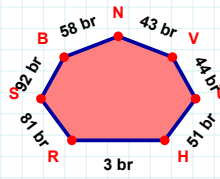
|VÇ| kaç cmdir?

- ☐ 21 cm
☐ 22 cm
☐ 23 cm



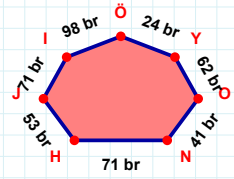
|İP| + |PZ| =

Cevap: br



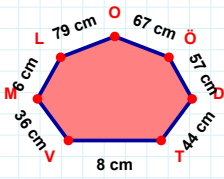
|RH| + |VN| =

Cevap: br



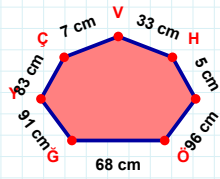
|HN| kaç brdir?

- ☐ 70 br
☐ 71 br
☐ 72 br



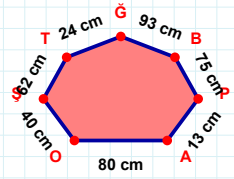
8 cm hangi kenara aittir?

Kenar:



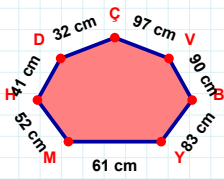
33 cm hangi kenara aittir?

- ☐ GÖ kenarı
☐ HV kenarı
☐ VY kenarı



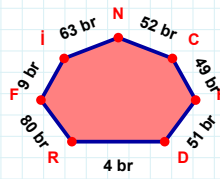
|BĞ| kaç cmdir?

- ☐ 92 cm
☐ 93 cm
☐ 94 cm



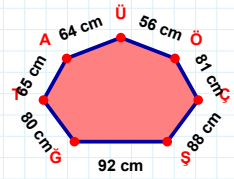
|DH| kaç cmdir?

- ☐ 40 cm
☐ 41 cm
☐ 42 cm



52 br hangi kenara aittir?

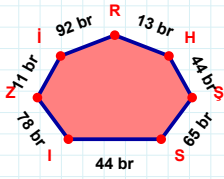
- ☐ NR kenarı
☐ Nİ kenarı
☐ FR kenarı



64 cm hangi kenara aittir?

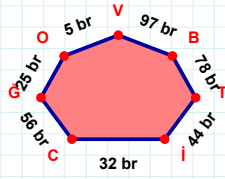
Kenar:

SORU: Aşağıdaki geometrik şekillerle ilgili soruları cevaplayınız.



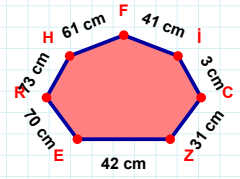
13 br hangi kenara aittir?

- ☐ ŞH kenarı
☐ IS kenarı
☐ İI kenarı



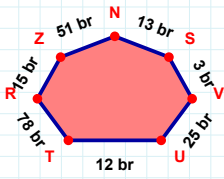
44 br hangi kenara aittir?

Kenar:



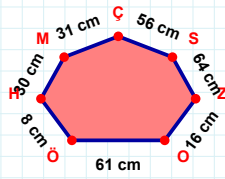
|HRI| kaç cmdir?

- ☐ 72 cm
☐ 73 cm
☐ 74 cm



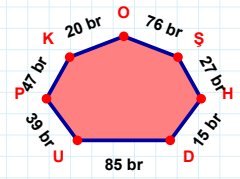
51 br hangi kenara aittir?

Kenar:



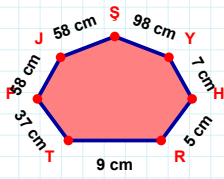
56 cm hangi kenara aittir?

Kenar:



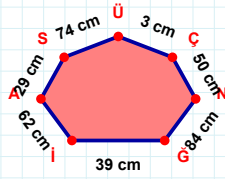
76 br hangi kenara aittir?

- ☐ KP kenarı
☐ HŞ kenarı
☐ DO kenarı



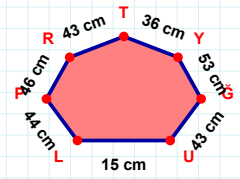
|ŞJ| + |YS| =

Cevap: cm



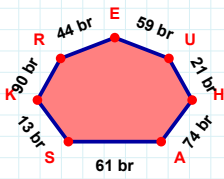
|ÇÜ| kaç cmdir?

- ☐ 2 cm
☐ 3 cm
☐ 4 cm



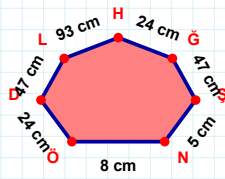
44 cm hangi kenara aittir?

Kenar:



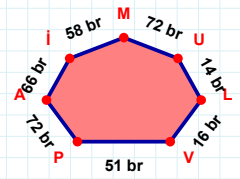
|HU| + |ER| =

Cevap: br



|LD| kaç cmdir?

- ☐ 46 cm
☐ 47 cm
☐ 48 cm



51 br hangi kenara aittir?

Kenar:

SÜREÇ ODAKLI DEĞERLENDİRME ÖLÇEĞİ

Doğru Sayısı: / 24

Öğretmen ilgili kutucuğu işaretler.

Geliştirilmeli (0-8)

İyi (9-14)

Çok İyi (15-20)

Mükemmel (21-24)

☐
☐
☐
☐

Hazırlayan:

Bu bölüme sınıfınızın ilgili kazanıma yönelik genel durumuna ilişkin gözlem ve izlenimlerinizi, öğrencilerinizin bu kazanımla ilgili öğrenme eksikliklerini ve bu eksikliklerin giderilmesi amacıyla yaptığınız/yapmayı planladığınız faaliyetleri not edebilirsiniz.

No	Adı - Soyadı	Toplam Puan	Değerlendirme
1			
2			
3			
4			
5			
6			
7			
8			
9			
10			
11			
12			
13			
14			
15			
16			
17			
18			
19			
20			
21			
22			
23			
24			
25			
26			
27			
28			
29			
30			
31			
32			
33			
34			
35			

Hazırlayan: