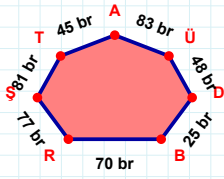
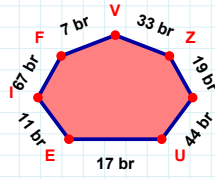


SORU: Aşağıdaki geometrik şekillerle ilgili soruları cevaplayınız.

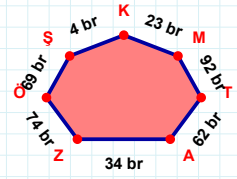
83 br hangi kenara aittir?

- ☐ AR kenarı
☐ AT kenarı
☐ ŞR kenarı



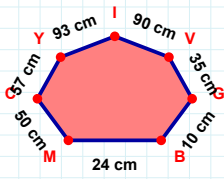
17 br hangi kenara aittir?

Kenar:



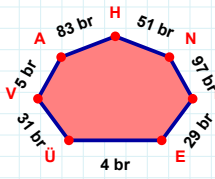
74 br hangi kenara aittir?

Kenar:



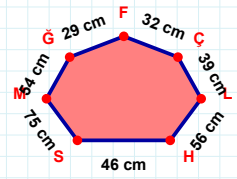
93 cm hangi kenara aittir?

Kenar:



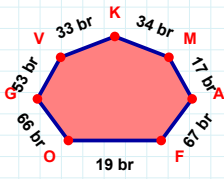
51 br hangi kenara aittir?

- ☐ NH kenarı
☐ NÜ kenarı
☐ HA kenarı

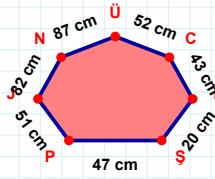


32 cm hangi kenara aittir?

- ☐ MS kenarı
☐ ÇF kenarı
☐ HÇ kenarı

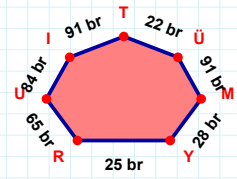
 $|OF| + |MK| = \dots$

Cevap: br



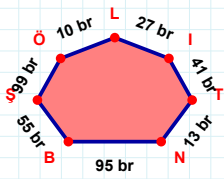
52 cm hangi kenara aittir?

- ☐ ÜN kenarı
☐ PD kenarı
☐ PŞ kenarı



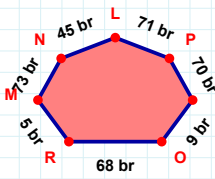
84 br hangi kenara aittir?

Kenar:

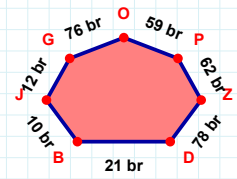


99 br hangi kenara aittir?

Kenar:

 $|MR|$ kaç brdir?

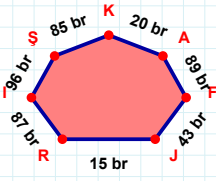
- ☐ 4 br
☐ 5 br
☐ 6 br



10 br hangi kenara aittir?

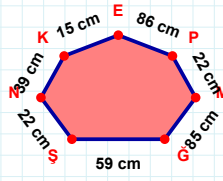
Kenar:

SORU: Aşağıdaki geometrik şekillerle ilgili soruları cevaplayınız.



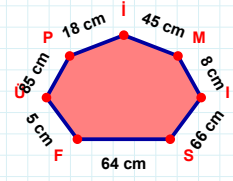
|RJ| kaç brdir?

- ☐ 14 br
☐ 15 br
☐ 16 br



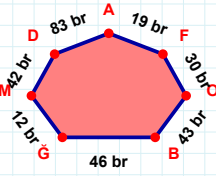
|GM| kaç cmdir?

- ☐ 84 cm
☐ 85 cm
☐ 86 cm



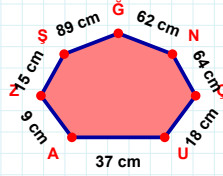
66 cm hangi kenara aittir?

Kenar:



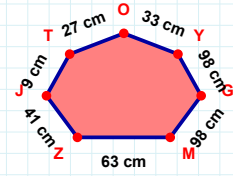
19 br hangi kenara aittir?

- ☐ FA kenarı
☐ BO kenarı
☐ DO kenarı



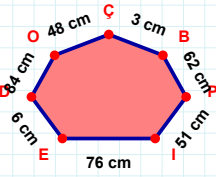
37 cm hangi kenara aittir?

Kenar:



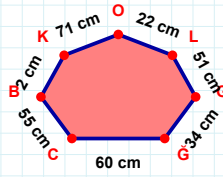
|MG| + |ZM| =

Cevap: cm



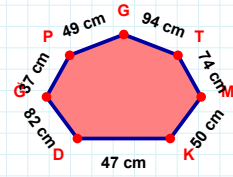
48 cm hangi kenara aittir?

Kenar:



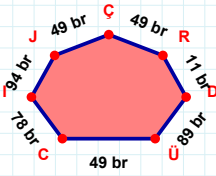
|KB| kaç cmdir?

- ☐ 1 cm
☐ 2 cm
☐ 3 cm



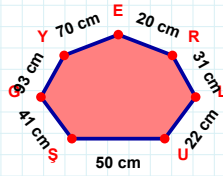
|KM| + |GP| =

Cevap: cm



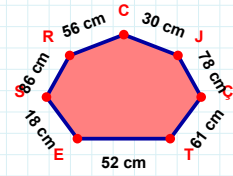
|JI| kaç brdir?

- ☐ 93 br
☐ 94 br
☐ 95 br



|RE| + |EY| =

Cevap: cm



|JC| kaç cmdir?

- ☐ 29 cm
☐ 30 cm
☐ 31 cm

SÜREÇ ODAKLI DEĞERLENDİRME ÖLÇEĞİ

Doğru Sayısı: / 24

Öğretmen ilgili kutucuğu işaretler.

Geliştirilmeli (0-8)

İyi (9-14)

Çok İyi (15-20)

Mükemmel (21-24)

☐
☐
☐
☐

Hazırlayan:

Bu bölüme sınıfınızın ilgili kazanıma yönelik genel durumuna ilişkin gözlem ve izlenimlerinizi, öğrencilerinizin bu kazanımla ilgili öğrenme eksikliklerini ve bu eksikliklerin giderilmesi amacıyla yaptığınız/yapmayı planladığınız faaliyetleri not edebilirsiniz.

No	Adı - Soyadı	Toplam Puan	Değerlendirme
1			
2			
3			
4			
5			
6			
7			
8			
9			
10			
11			
12			
13			
14			
15			
16			
17			
18			
19			
20			
21			
22			
23			
24			
25			
26			
27			
28			
29			
30			
31			
32			
33			
34			
35			

Hazırlayan: