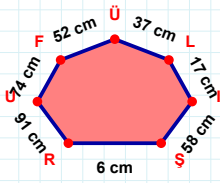
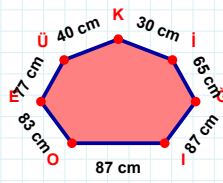


SORU: Aşağıdaki geometrik şekillerle ilgili soruları cevaplayınız.

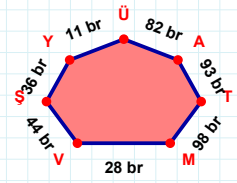
$$|UR| + |IL| = \dots$$

Cevap: cm



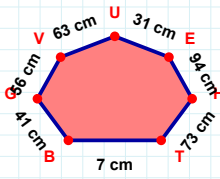
40 cm hangi kenara aittir?

Kenar:



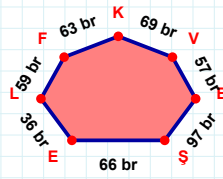
|YŞ| kaç brdir?

- ☐ 35 br
☐ 36 br
☐ 37 br



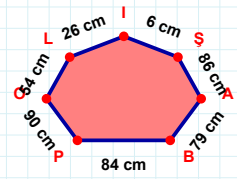
31 cm hangi kenara aittir?

- ☐ GH kenarı
☐ VG kenarı
☐ GB kenarı



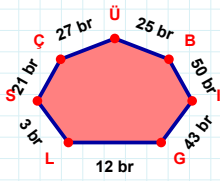
|KF| kaç brdir?

- ☐ 62 br
☐ 63 br
☐ 64 br



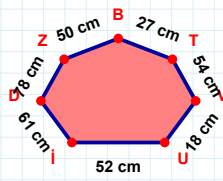
|BA| kaç cmdir?

- ☐ 78 cm
☐ 79 cm
☐ 80 cm



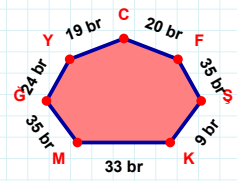
25 br hangi kenara aittir?

- ☐ IB kenarı
☐ SL kenarı
☐ ÇL kenarı



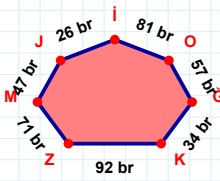
|TB| kaç cmdir?

- ☐ 26 cm
☐ 27 cm
☐ 28 cm



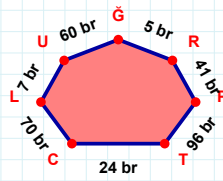
|KS| kaç brdir?

- ☐ 8 br
☐ 9 br
☐ 10 br



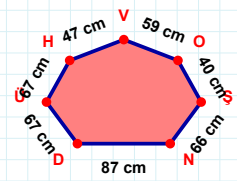
81 br hangi kenara aittir?

- ☐ İJ kenarı
☐ JM kenarı
☐ JZ kenarı



5 br hangi kenara aittir?

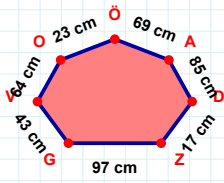
- ☐ ÇU kenarı
☐ RĞ kenarı
☐ RU kenarı



59 cm hangi kenara aittir?

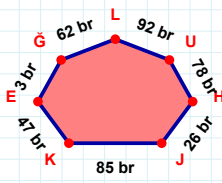
- ☐ DH kenarı
☐ NŞ kenarı
☐ ÜD kenarı

SORU: Aşağıdaki geometrik şekillerle ilgili soruları cevaplayınız.



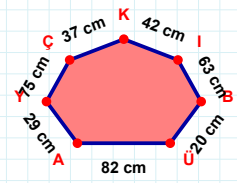
|AÖ| kaç cm'dir?

- ☐ 68 cm
☐ 69 cm
☐ 70 cm



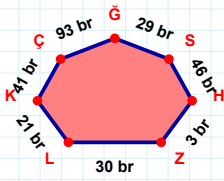
78 br hangi kenara aittir?

Kenar:



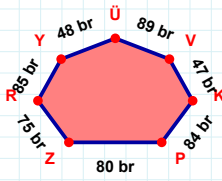
75 cm hangi kenara aittir?

Kenar:



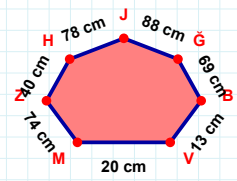
|ZH| + |ĞÇ| =

Cevap: br



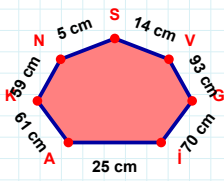
|VÜ| kaç br'dir?

- ☐ 88 br
☐ 89 br
☐ 90 br



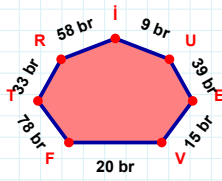
74 cm hangi kenara aittir?

Kenar:



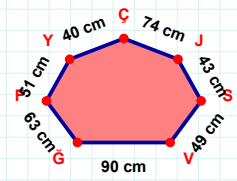
|SN| kaç cm'dir?

- ☐ 4 cm
☐ 5 cm
☐ 6 cm



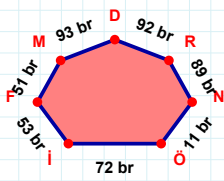
|RT| kaç br'dir?

- ☐ 32 br
☐ 33 br
☐ 34 br



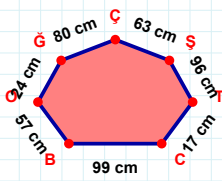
63 cm hangi kenara aittir?

Kenar:



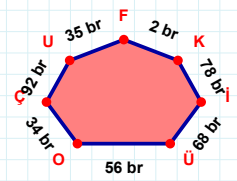
|İÖ| + |RD| =

Cevap: br



|ÇĞ| + |ŞÇ| =

Cevap: cm



78 br hangi kenara aittir?

Kenar:

SÜREÇ ODAKLI DEĞERLENDİRME ÖLÇEĞİ

Doğru Sayısı: / 24

Öğretmen ilgili kutucuğu işaretler.

Geliştirilmeli (0-8)

İyi (9-14)

Çok İyi (15-20)

Mükemmel (21-24)

☐
☐
☐
☐

Hazırlayan:

Bu bölüme sınıfınızın ilgili kazanıma yönelik genel durumuna ilişkin gözlem ve izlenimlerinizi, öğrencilerinizin bu kazanımla ilgili öğrenme eksikliklerini ve bu eksikliklerin giderilmesi amacıyla yaptığınız/yapmayı planladığınız faaliyetleri not edebilirsiniz.

No	Adı - Soyadı	Toplam Puan	Değerlendirme
1			
2			
3			
4			
5			
6			
7			
8			
9			
10			
11			
12			
13			
14			
15			
16			
17			
18			
19			
20			
21			
22			
23			
24			
25			
26			
27			
28			
29			
30			
31			
32			
33			
34			
35			

Hazırlayan: