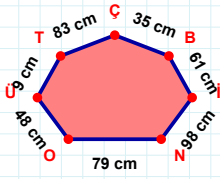
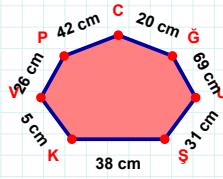


SORU: Aşağıdaki geometrik şekillerle ilgili soruları cevaplayınız.



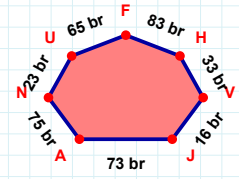
35 cm hangi kenara aittir?

Kenar:



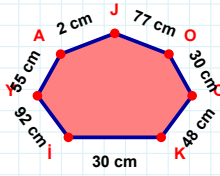
5 cm hangi kenara aittir?

Kenar:



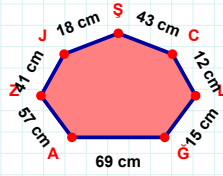
33 br hangi kenara aittir?

Kenar:



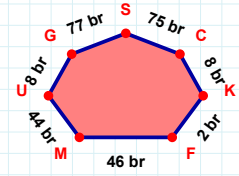
|AY| kaç cm'dir?

- ☐ 54 cm
☐ 55 cm
☐ 56 cm



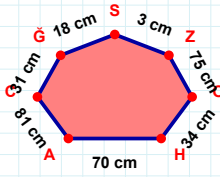
43 cm hangi kenara aittir?

- ☐ JZ kenarı
☐ GL kenarı
☐ ZL kenarı



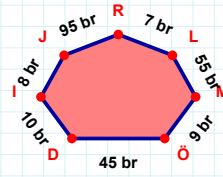
75 br hangi kenara aittir?

- ☐ KC kenarı
☐ UM kenarı
☐ MG kenarı



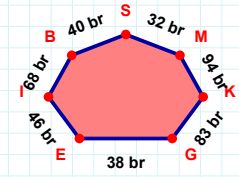
|ZS| kaç cm'dir?

- ☐ 2 cm
☐ 3 cm
☐ 4 cm



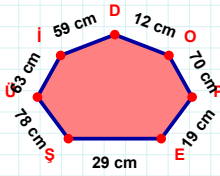
|ML| + |RJ| =

Cevap: br



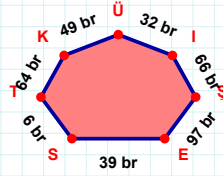
68 br hangi kenara aittir?

Kenar:



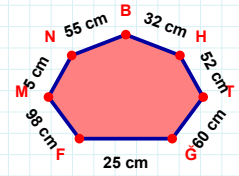
12 cm hangi kenara aittir?

- ☐ ÜŞ kenarı
☐ ED kenarı
☐ OD kenarı



|Şİ| kaç br'dir?

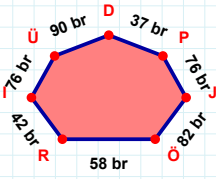
- ☐ 65 br
☐ 66 br
☐ 67 br



60 cm hangi kenara aittir?

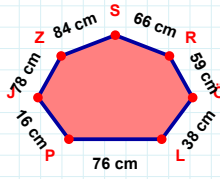
Kenar:

SORU: Aşağıdaki geometrik şekillerle ilgili soruları cevaplayınız.



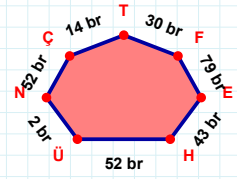
$$|RÖ| + |PD| = \dots$$

Cevap: br



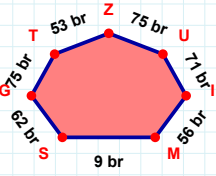
66 cm hangi kenara aittir?

- ☐ SZ kenarı
☐ RS kenarı
☐ SL kenarı



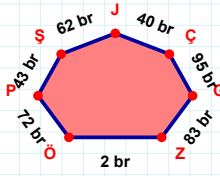
52 br hangi kenara aittir?

Kenar:



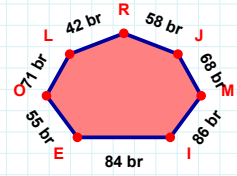
$$|IU| + |UZ| = \dots$$

Cevap: br



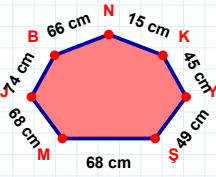
40 br hangi kenara aittir?

- ☐ ÇJ kenarı
☐ JP kenarı
☐ ÖZ kenarı



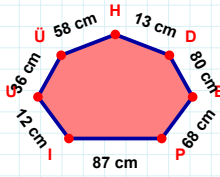
42 br hangi kenara aittir?

Kenar:



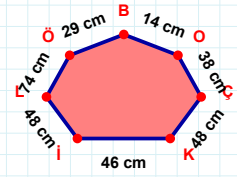
$$|KN| + |JM| = \dots$$

Cevap: cm



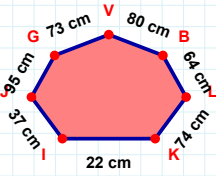
13 cm hangi kenara aittir?

- ☐ ED kenarı
☐ HI kenarı
☐ PE kenarı



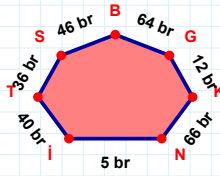
74 cm hangi kenara aittir?

Kenar:



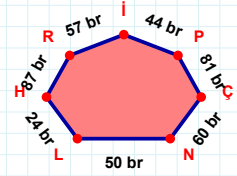
22 cm hangi kenara aittir?

Kenar:



$$|BS| + |NK| = \dots$$

Cevap: br



50 br hangi kenara aittir?

Kenar:

SÜREÇ ODAKLI DEĞERLENDİRME ÖLÇEĞİ

Doğru Sayısı: / 24

Öğretmen ilgili kutucuğu işaretler.

Geliştirilmeli (0-8)

İyi (9-14)

Çok İyi (15-20)

Mükemmel (21-24)

☐
☐
☐
☐

Hazırlayan:

Bu bölüme sınıfınızın ilgili kazanıma yönelik genel durumuna ilişkin gözlem ve izlenimlerinizi, öğrencilerinizin bu kazanımla ilgili öğrenme eksikliklerini ve bu eksikliklerin giderilmesi amacıyla yaptığınız/yapmayı planladığınız faaliyetleri not edebilirsiniz.

No	Adı - Soyadı	Toplam Puan	Değerlendirme
1			
2			
3			
4			
5			
6			
7			
8			
9			
10			
11			
12			
13			
14			
15			
16			
17			
18			
19			
20			
21			
22			
23			
24			
25			
26			
27			
28			
29			
30			
31			
32			
33			
34			
35			

Hazırlayan: