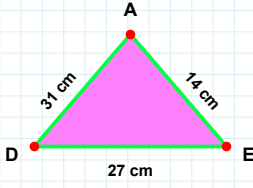
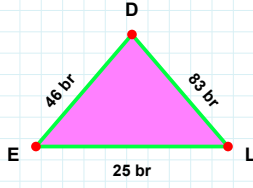


SORU: Aşağıdaki şekillerde istenen kenarın kaç birim veya santimetre olduğunu bulunuz.



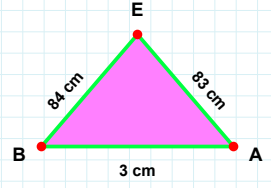
|AE| kaç cmdir?

- ☐ 82 cm
☐ 83 cm
☐ 88 cm



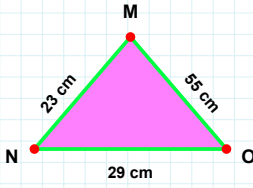
|LD| kaç brdir?

- ☐ 86 br
☐ 81 br
☐ 83 br



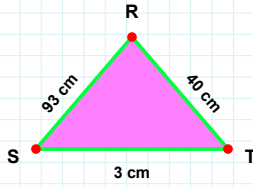
|DE| kaç cmdir?

- ☐ 27 cm
☐ 32 cm
☐ 30 cm



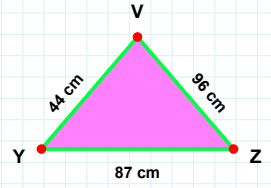
|OM| kaç cmdir?

- ☐ 60 cm
☐ 50 cm
☐ 55 cm



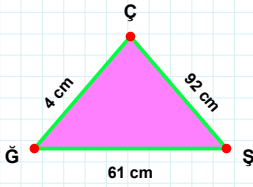
|ST| kaç cmdir?

- ☐ 1 cm
☐ 3 cm
☐ 4 cm



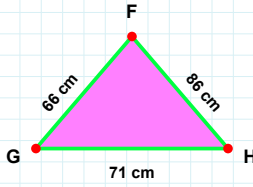
|ZV| kaç cmdir?

- ☐ 99 cm
☐ 94 cm
☐ 96 cm



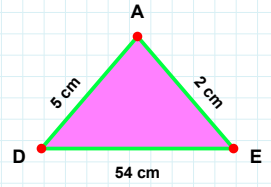
|AD| kaç cmdir?

- ☐ 5 cm
☐ 10 cm
☐ 2 cm



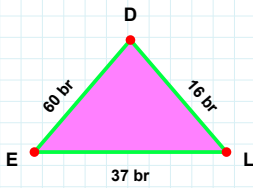
|ŞÇ| kaç cmdir?

- ☐ 93 cm
☐ 87 cm
☐ 92 cm



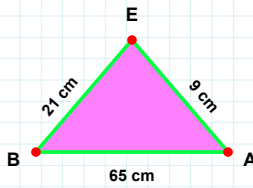
|GH| kaç cmdir?

- ☐ 61 cm
☐ 71 cm
☐ 66 cm



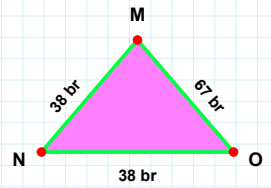
|EB| kaç cmdir?

- ☐ 24 cm
☐ 21 cm
☐ 22 cm



|NO| kaç brdir?

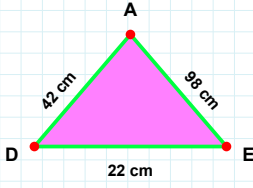
- ☐ 33 br
☐ 28 br
☐ 38 br



|EL| kaç brdir?

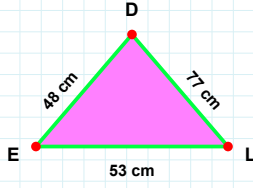
- ☐ 47 br
☐ 37 br
☐ 27 br

SORU: Aşağıdaki şekillerde istenen kenarın kaç birim veya santimetre olduğunu bulunuz.



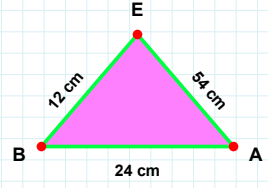
|AE| kaç cmdir?

- ☐ 44 cm
☐ 54 cm
☐ 64 cm



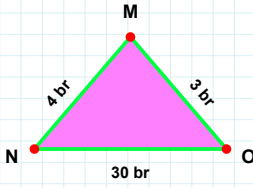
|AD| kaç cmdir?

- ☐ 42 cm
☐ 32 cm
☐ 40 cm



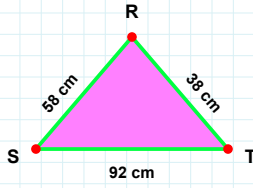
|LD| kaç cmdir?

- ☐ 75 cm
☐ 87 cm
☐ 77 cm



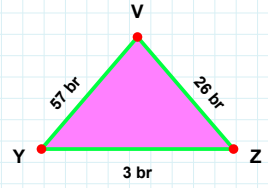
|RS| kaç cmdir?

- ☐ 58 cm
☐ 55 cm
☐ 60 cm



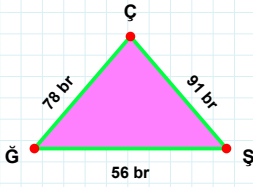
|ZV| kaç brdir?

- ☐ 25 br
☐ 29 br
☐ 26 br



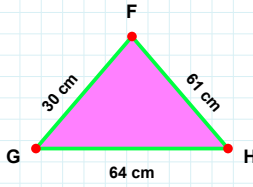
|OM| kaç brdir?

- ☐ 1 br
☐ 3 br
☐ 5 br



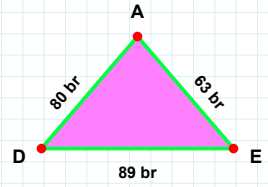
|EA| kaç brdir?

- ☐ 63 br
☐ 64 br
☐ 66 br



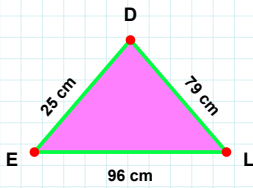
|FG| kaç cmdir?

- ☐ 31 cm
☐ 30 cm
☐ 35 cm



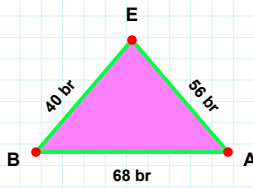
|ÇĞ| kaç brdir?

- ☐ 79 br
☐ 78 br
☐ 88 br



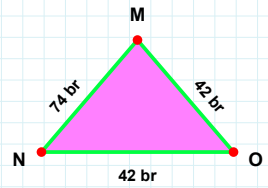
|EL| kaç cmdir?

- ☐ 91 cm
☐ 97 cm
☐ 96 cm



|EB| kaç brdir?

- ☐ 45 br
☐ 42 br
☐ 40 br



|OM| kaç brdir?

- ☐ 37 br
☐ 42 br
☐ 47 br

SÜREÇ ODAKLI DEĞERLENDİRME ÖLÇEĞİ

Doğru Sayısı: / 24

Öğretmen ilgili kutucuğu işaretler.

Geliştirilmeli (0-8)

İyi (9-14)

Çok İyi (15-20)

Mükemmel (21-24)

☐☐☐☐

Hazırlayan:

Bu bölüme sınıfınızın ilgili kazanıma yönelik genel durumuna ilişkin gözlem ve izlenimlerinizi, öğrencilerinizin bu kazanımla ilgili öğrenme eksikliklerini ve bu eksikliklerin giderilmesi amacıyla yaptığınız/yapmayı planladığınız faaliyetleri not edebilirsiniz.

No	Adı - Soyadı	Toplam Puan	Değerlendirme
1			
2			
3			
4			
5			
6			
7			
8			
9			
10			
11			
12			
13			
14			
15			
16			
17			
18			
19			
20			
21			
22			
23			
24			
25			
26			
27			
28			
29			
30			
31			
32			
33			
34			
35			

Hazırlayan: