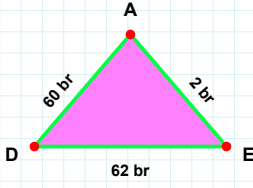
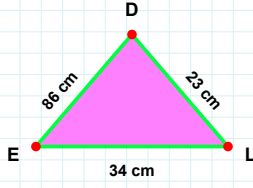


SORU: Aşağıdaki şekillerde istenen kenarın kaç birim veya santimetre olduğunu bulunuz.



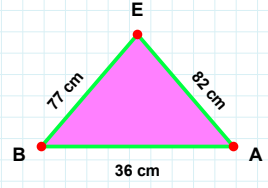
|DE| kaç brdir?

- ☐ 65 br
☐ 59 br
☐ 62 br



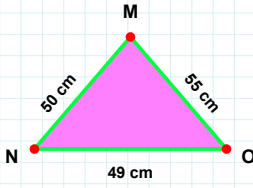
|AE| kaç cmdir?

- ☐ 81 cm
☐ 82 cm
☐ 92 cm



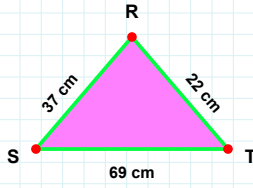
|LD| kaç cmdir?

- ☐ 23 cm
☐ 22 cm
☐ 13 cm



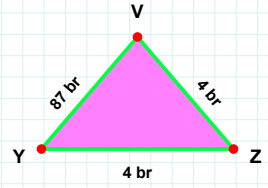
|TR| kaç cmdir?

- ☐ 24 cm
☐ 22 cm
☐ 32 cm



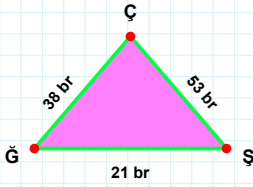
|MN| kaç cmdir?

- ☐ 50 cm
☐ 45 cm
☐ 60 cm



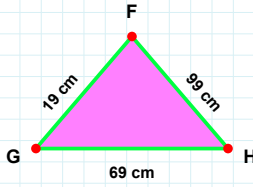
|YZ| kaç brdir?

- ☐ 4 br
☐ 6 br
☐ 9 br



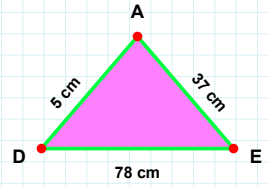
|GŞ| kaç brdir?

- ☐ 22 br
☐ 11 br
☐ 21 br



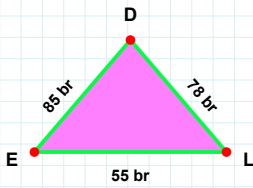
|HF| kaç cmdir?

- ☐ 96 cm
☐ 89 cm
☐ 99 cm



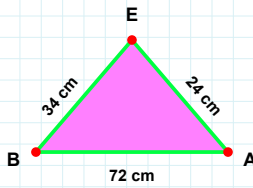
|EA| kaç cmdir?

- ☐ 39 cm
☐ 37 cm
☐ 36 cm



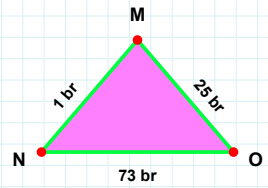
|DE| kaç brdir?

- ☐ 85 br
☐ 88 br
☐ 95 br



|MN| kaç brdir?

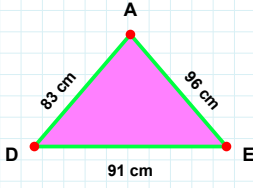
- ☐ 1 br
☐ 4 br
☐ 3 br



|AE| kaç cmdir?

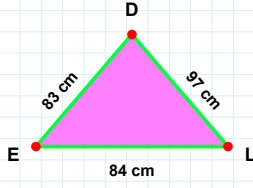
- ☐ 29 cm
☐ 25 cm
☐ 24 cm

SORU: Aşağıdaki şekillerde istenen kenarın kaç birim veya santimetre olduğunu bulunuz.



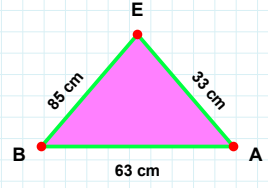
|EA| kaç cmdir?

- ☐ 94 cm
☐ 96 cm
☐ 95 cm



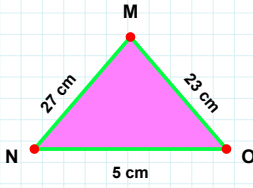
|BA| kaç cmdir?

- ☐ 66 cm
☐ 63 cm
☐ 64 cm



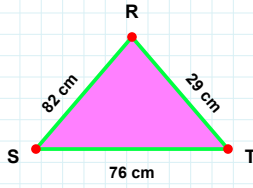
|LD| kaç cmdir?

- ☐ 97 cm
☐ 96 cm
☐ 92 cm



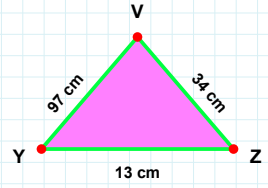
|ZV| kaç cmdir?

- ☐ 24 cm
☐ 34 cm
☐ 35 cm



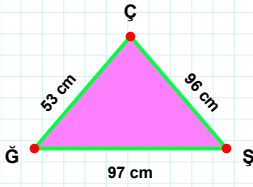
|OM| kaç cmdir?

- ☐ 28 cm
☐ 20 cm
☐ 23 cm



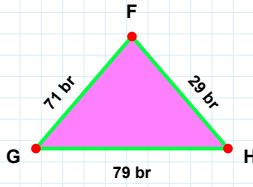
|TR| kaç cmdir?

- ☐ 29 cm
☐ 32 cm
☐ 24 cm



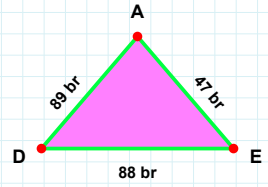
|DE| kaç brdir?

- ☐ 90 br
☐ 87 br
☐ 88 br



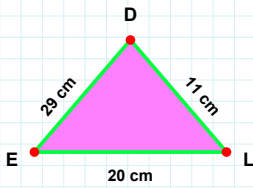
|ÇĞ| kaç cmdir?

- ☐ 53 cm
☐ 50 cm
☐ 63 cm



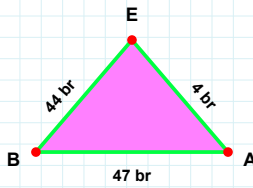
|HF| kaç brdir?

- ☐ 34 br
☐ 39 br
☐ 29 br



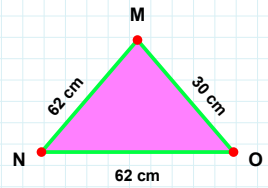
|MN| kaç cmdir?

- ☐ 61 cm
☐ 62 cm
☐ 52 cm



|AE| kaç brdir?

- ☐ 9 br
☐ 4 br
☐ 14 br



|DE| kaç cmdir?

- ☐ 27 cm
☐ 30 cm
☐ 29 cm

SÜREÇ ODAKLI DEĞERLENDİRME ÖLÇEĞİ

Doğru Sayısı: / 24

Öğretmen ilgili kutucuğu işaretler.

Geliştirilmeli (0-8)

İyi (9-14)

Çok İyi (15-20)

Mükemmel (21-24)



Hazırlayan:

Bu bölüme sınıfınızın ilgili kazanıma yönelik genel durumuna ilişkin gözlem ve izlenimlerinizi, öğrencilerinizin bu kazanımla ilgili öğrenme eksikliklerini ve bu eksikliklerin giderilmesi amacıyla yaptığınız/yapmayı planladığınız faaliyetleri not edebilirsiniz.

No	Adı - Soyadı	Toplam Puan	Değerlendirme
1			
2			
3			
4			
5			
6			
7			
8			
9			
10			
11			
12			
13			
14			
15			
16			
17			
18			
19			
20			
21			
22			
23			
24			
25			
26			
27			
28			
29			
30			
31			
32			
33			
34			
35			

Hazırlayan: