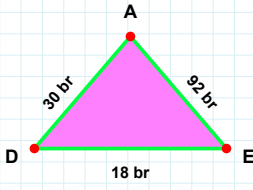
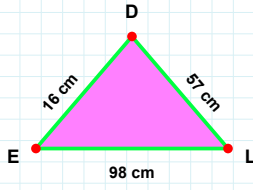


SORU: Aşağıdaki şekillerde istenen kenarın kaç birim veya santimetre olduğunu bulunuz.



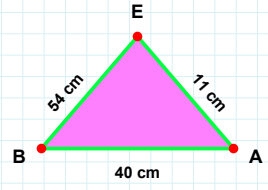
|LD| kaç cmdir?

- ☐ 62 cm
☐ 57 cm
☐ 54 cm



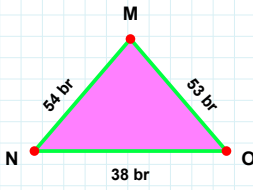
|BA| kaç cmdir?

- ☐ 40 cm
☐ 39 cm
☐ 42 cm



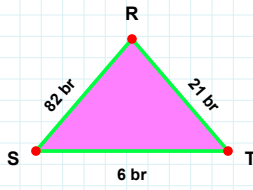
|DE| kaç brdir?

- ☐ 17 br
☐ 21 br
☐ 18 br



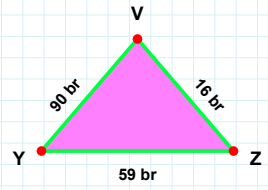
|MN| kaç brdir?

- ☐ 54 br
☐ 52 br
☐ 51 br



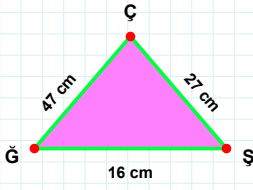
|TR| kaç brdir?

- ☐ 21 br
☐ 20 br
☐ 19 br



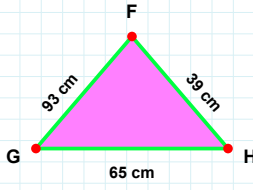
|VY| kaç brdir?

- ☐ 91 br
☐ 90 br
☐ 80 br



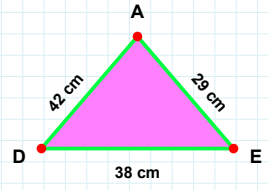
|EA| kaç cmdir?

- ☐ 32 cm
☐ 30 cm
☐ 29 cm



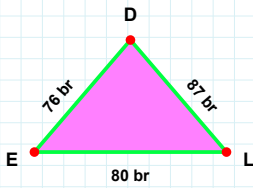
|GH| kaç cmdir?

- ☐ 62 cm
☐ 65 cm
☐ 75 cm



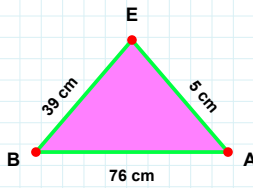
|ÇĞ| kaç cmdir?

- ☐ 47 cm
☐ 57 cm
☐ 42 cm



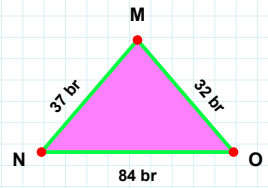
|MN| kaç brdir?

- ☐ 37 br
☐ 42 br
☐ 47 br



|EB| kaç cmdir?

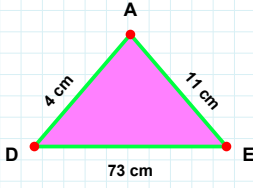
- ☐ 36 cm
☐ 39 cm
☐ 41 cm



|EL| kaç brdir?

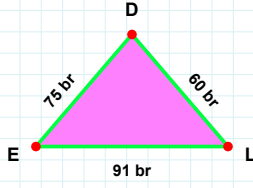
- ☐ 80 br
☐ 83 br
☐ 79 br

SORU: Aşağıdaki şekillerde istenen kenarın kaç birim veya santimetre olduğunu bulunuz.



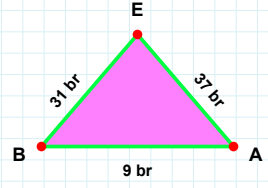
|AE| kaç brdir?

- ☐ 38 br
☐ 37 br
☐ 34 br



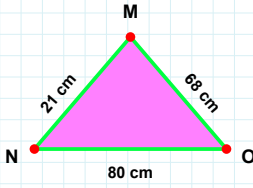
|EA| kaç cmdir?

- ☐ 11 cm
☐ 6 cm
☐ 9 cm



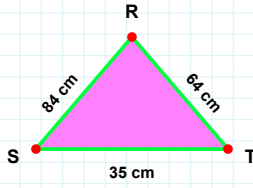
|DE| kaç brdir?

- ☐ 75 br
☐ 65 br
☐ 73 br



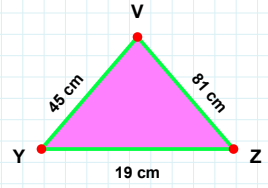
|VY| kaç cmdir?

- ☐ 55 cm
☐ 35 cm
☐ 45 cm



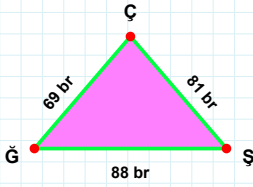
|RS| kaç cmdir?

- ☐ 89 cm
☐ 84 cm
☐ 81 cm



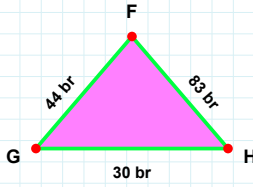
|MN| kaç cmdir?

- ☐ 22 cm
☐ 16 cm
☐ 21 cm



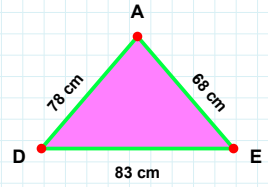
|ŞÇ| kaç brdir?

- ☐ 86 br
☐ 81 br
☐ 71 br



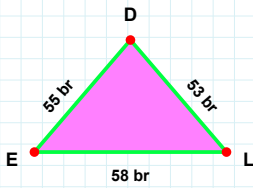
|EA| kaç cmdir?

- ☐ 68 cm
☐ 65 cm
☐ 67 cm



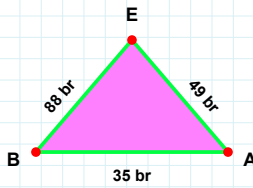
|GH| kaç brdir?

- ☐ 27 br
☐ 20 br
☐ 30 br



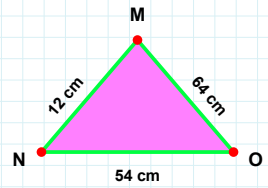
|DE| kaç brdir?

- ☐ 55 br
☐ 53 br
☐ 60 br



|EB| kaç brdir?

- ☐ 78 br
☐ 88 br
☐ 91 br



|NO| kaç cmdir?

- ☐ 54 cm
☐ 49 cm
☐ 59 cm

SÜREÇ ODAKLI DEĞERLENDİRME ÖLÇEĞİ

Doğru Sayısı: / 24

Öğretmen ilgili kutucuğu işaretler.

Geliştirilmeli (0-8)

İyi (9-14)

Çok İyi (15-20)

Mükemmel (21-24)



Hazırlayan:

Bu bölüme sınıfınızın ilgili kazanıma yönelik genel durumuna ilişkin gözlem ve izlenimlerinizi, öğrencilerinizin bu kazanımla ilgili öğrenme eksikliklerini ve bu eksikliklerin giderilmesi amacıyla yaptığınız/yapmayı planladığınız faaliyetleri not edebilirsiniz.

No	Adı - Soyadı	Toplam Puan	Değerlendirme
1			
2			
3			
4			
5			
6			
7			
8			
9			
10			
11			
12			
13			
14			
15			
16			
17			
18			
19			
20			
21			
22			
23			
24			
25			
26			
27			
28			
29			
30			
31			
32			
33			
34			
35			

Hazırlayan: