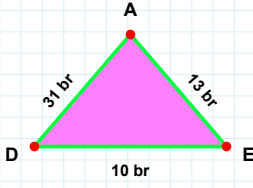
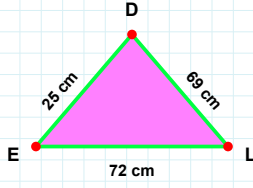


SORU: Aşağıdaki şekillerde istenen kenarın kaç birim veya santimetre olduğunu bulunuz.



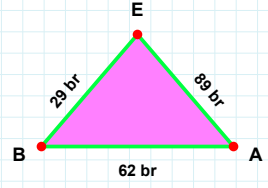
|LD| kaç cmdir?

- ☐ 59 cm
☐ 68 cm
☐ 69 cm



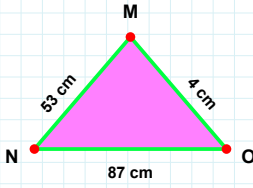
|EB| kaç brdir?

- ☐ 32 br
☐ 26 br
☐ 29 br



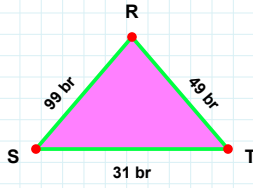
|AD| kaç brdir?

- ☐ 32 br
☐ 31 br
☐ 29 br



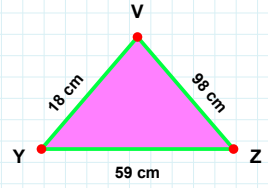
|YZ| kaç cmdir?

- ☐ 59 cm
☐ 58 cm
☐ 64 cm



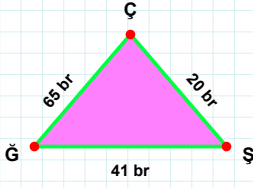
|MN| kaç cmdir?

- ☐ 52 cm
☐ 53 cm
☐ 56 cm



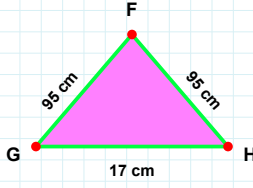
|TR| kaç brdir?

- ☐ 49 br
☐ 50 br
☐ 59 br



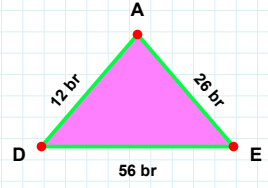
|FG| kaç cmdir?

- ☐ 95 cm
☐ 90 cm
☐ 92 cm



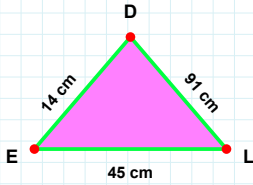
|AD| kaç brdir?

- ☐ 22 br
☐ 10 br
☐ 12 br



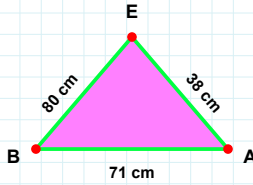
|ŞÇ| kaç brdir?

- ☐ 22 br
☐ 20 br
☐ 30 br



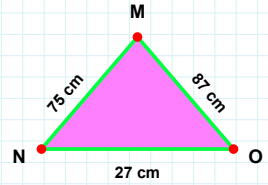
|NO| kaç cmdir?

- ☐ 17 cm
☐ 27 cm
☐ 28 cm



|DE| kaç cmdir?

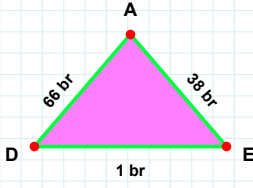
- ☐ 14 cm
☐ 12 cm
☐ 4 cm



|AE| kaç cmdir?

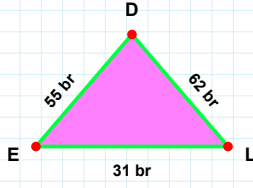
- ☐ 33 cm
☐ 37 cm
☐ 38 cm

SORU: Aşağıdaki şekillerde istenen kenarın kaç birim veya santimetre olduğunu bulunuz.



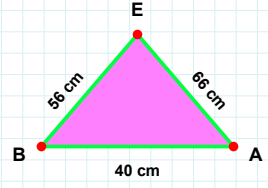
|DE| kaç brdir?

- ☐ 2 br
☐ 11 br
☐ 1 br



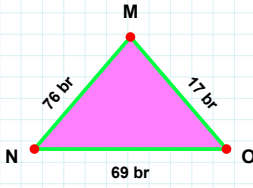
|EB| kaç cmdir?

- ☐ 66 cm
☐ 61 cm
☐ 56 cm



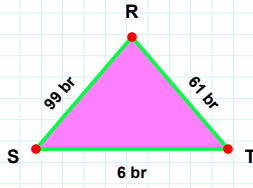
|EL| kaç brdir?

- ☐ 31 br
☐ 34 br
☐ 36 br



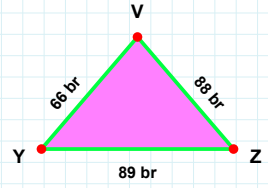
|MN| kaç brdir?

- ☐ 76 br
☐ 77 br
☐ 73 br



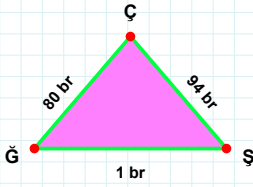
|RS| kaç brdir?

- ☐ 89 br
☐ 99 br
☐ 98 br



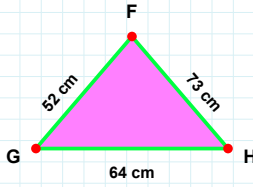
|ZV| kaç brdir?

- ☐ 88 br
☐ 89 br
☐ 78 br



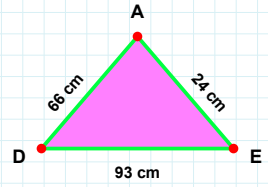
|AD| kaç cmdir?

- ☐ 66 cm
☐ 64 cm
☐ 61 cm



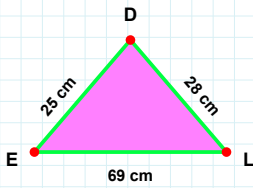
|FG| kaç cmdir?

- ☐ 52 cm
☐ 47 cm
☐ 49 cm



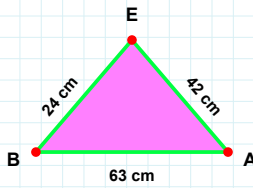
|ÇĞ| kaç brdir?

- ☐ 82 br
☐ 80 br
☐ 90 br



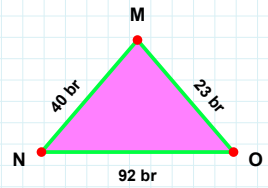
|EB| kaç cmdir?

- ☐ 24 cm
☐ 23 cm
☐ 34 cm



|OM| kaç brdir?

- ☐ 23 br
☐ 24 br
☐ 20 br



|EL| kaç cmdir?

- ☐ 69 cm
☐ 66 cm
☐ 74 cm

SÜREÇ ODAKLI DEĞERLENDİRME ÖLÇEĞİ

Doğru Sayısı: / 24

Öğretmen ilgili kutucuğu işaretler.

Geliştirilmeli (0-8)

İyi (9-14)

Çok İyi (15-20)

Mükemmel (21-24)



Hazırlayan:

Bu bölüme sınıfınızın ilgili kazanıma yönelik genel durumuna ilişkin gözlem ve izlenimlerinizi, öğrencilerinizin bu kazanımla ilgili öğrenme eksikliklerini ve bu eksikliklerin giderilmesi amacıyla yaptığınız/yapmayı planladığınız faaliyetleri not edebilirsiniz.

No	Adı - Soyadı	Toplam Puan	Değerlendirme
1			
2			
3			
4			
5			
6			
7			
8			
9			
10			
11			
12			
13			
14			
15			
16			
17			
18			
19			
20			
21			
22			
23			
24			
25			
26			
27			
28			
29			
30			
31			
32			
33			
34			
35			

Hazırlayan: