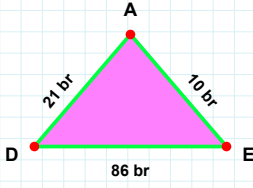
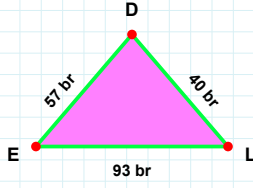


SORU: Aşağıdaki şekillerde istenen kenarın kaç birim veya santimetre olduğunu bulunuz.



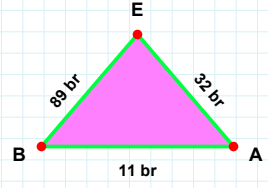
|DE| kaç brdir?

- ☐ 81 br
☐ 76 br
☐ 86 br



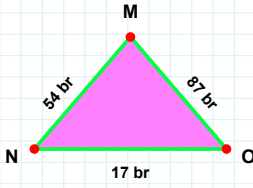
|EB| kaç brdir?

- ☐ 99 br
☐ 89 br
☐ 87 br



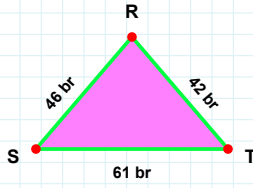
|EL| kaç brdir?

- ☐ 98 br
☐ 83 br
☐ 93 br



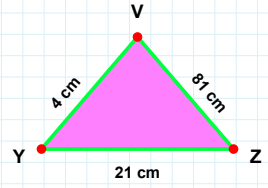
|TR| kaç brdir?

- ☐ 40 br
☐ 42 br
☐ 52 br



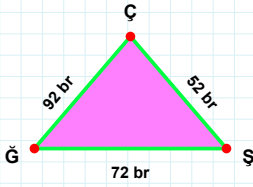
|YZ| kaç cmdir?

- ☐ 24 cm
☐ 21 cm
☐ 18 cm



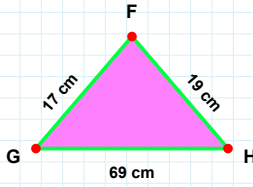
|OM| kaç brdir?

- ☐ 77 br
☐ 87 br
☐ 86 br



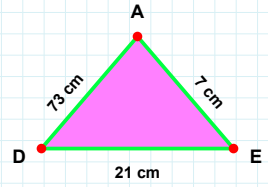
|AD| kaç cmdir?

- ☐ 73 cm
☐ 78 cm
☐ 68 cm



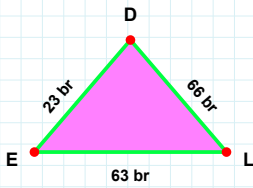
|GH| kaç cmdir?

- ☐ 79 cm
☐ 69 cm
☐ 59 cm



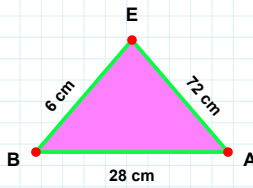
|ŞÇ| kaç brdir?

- ☐ 53 br
☐ 52 br
☐ 54 br



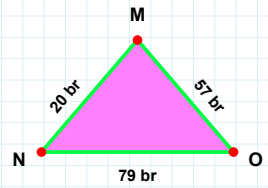
|LD| kaç brdir?

- ☐ 65 br
☐ 66 br
☐ 61 br



|EB| kaç cmdir?

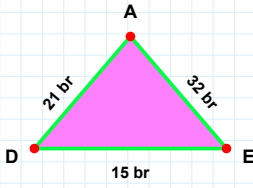
- ☐ 11 cm
☐ 5 cm
☐ 6 cm



|OM| kaç brdir?

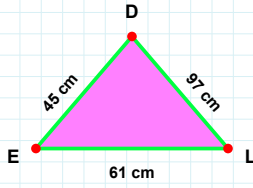
- ☐ 57 br
☐ 62 br
☐ 47 br

SORU: Aşağıdaki şekillerde istenen kenarın kaç birim veya santimetre olduğunu bulunuz.



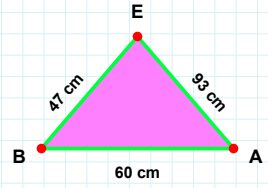
|DE| kaç brdir?

- ☐ 15 br
☐ 14 br
☐ 12 br



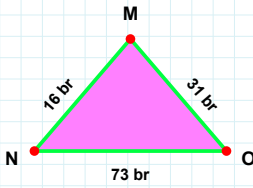
|DE| kaç cmdir?

- ☐ 43 cm
☐ 45 cm
☐ 50 cm



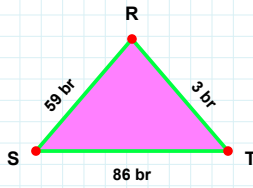
|AE| kaç cmdir?

- ☐ 91 cm
☐ 93 cm
☐ 90 cm



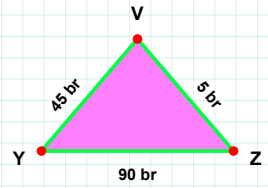
|YZ| kaç brdir?

- ☐ 88 br
☐ 85 br
☐ 90 br



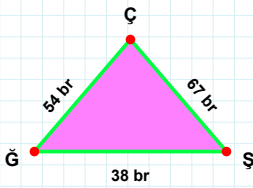
|OM| kaç brdir?

- ☐ 31 br
☐ 36 br
☐ 34 br



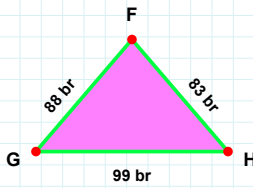
|RS| kaç brdir?

- ☐ 64 br
☐ 59 br
☐ 58 br



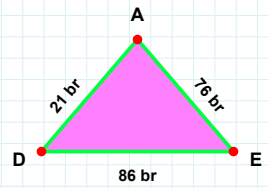
|HF| kaç brdir?

- ☐ 85 br
☐ 81 br
☐ 83 br



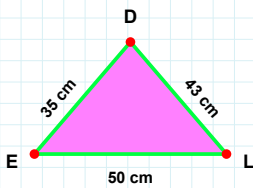
|ĞŞ| kaç brdir?

- ☐ 28 br
☐ 38 br
☐ 35 br



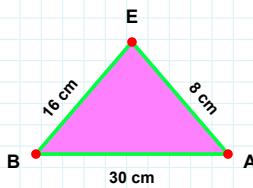
|AD| kaç brdir?

- ☐ 21 br
☐ 19 br
☐ 16 br



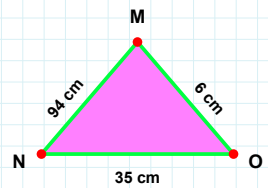
|LD| kaç cmdir?

- ☐ 46 cm
☐ 43 cm
☐ 48 cm



|BA| kaç cmdir?

- ☐ 25 cm
☐ 27 cm
☐ 30 cm



|MN| kaç cmdir?

- ☐ 99 cm
☐ 94 cm
☐ 95 cm

SÜREÇ ODAKLI DEĞERLENDİRME ÖLÇEĞİ

Doğru Sayısı: / 24

Öğretmen ilgili kutucuğu işaretler.

Geliştirilmeli (0-8)

İyi (9-14)

Çok İyi (15-20)

Mükemmel (21-24)



Hazırlayan:

Bu bölüme sınıfınızın ilgili kazanıma yönelik genel durumuna ilişkin gözlem ve izlenimlerinizi, öğrencilerinizin bu kazanımla ilgili öğrenme eksikliklerini ve bu eksikliklerin giderilmesi amacıyla yaptığınız/yapmayı planladığınız faaliyetleri not edebilirsiniz.

No	Adı - Soyadı	Toplam Puan	Değerlendirme
1			
2			
3			
4			
5			
6			
7			
8			
9			
10			
11			
12			
13			
14			
15			
16			
17			
18			
19			
20			
21			
22			
23			
24			
25			
26			
27			
28			
29			
30			
31			
32			
33			
34			
35			

Hazırlayan: