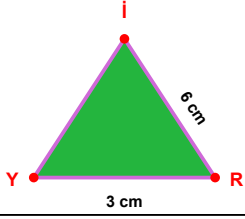
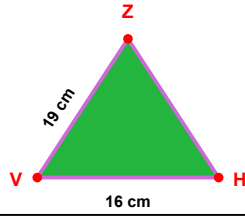


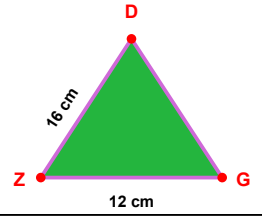
SORU: Aşağıdaki şekillerde verilen, kenar uzunlukları farklarını bulunuz.



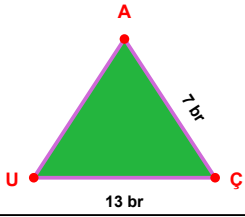
$$|RI| - |YR| = \dots\dots$$



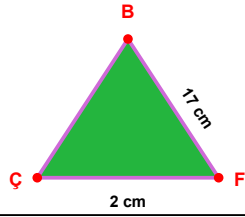
$$|ZV| - |VH| = \dots\dots$$



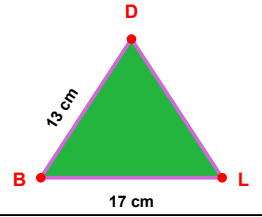
$$|DZ| - |ZG| = \dots\dots$$



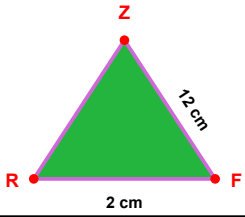
$$|UÇ| - |ÇA| = \dots\dots$$



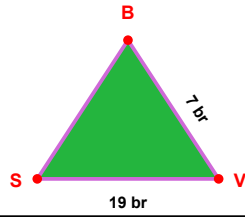
$$|FB| - |ÇF| = \dots\dots$$



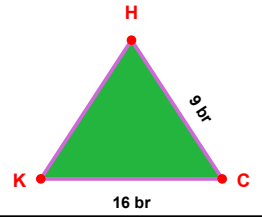
$$|BL| - |DB| = \dots\dots$$



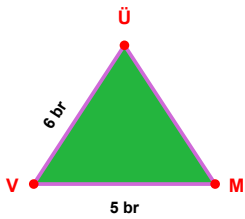
$$|FZ| - |RF| = \dots\dots$$



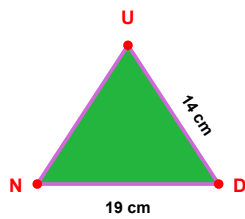
$$|SV| - |VB| = \dots\dots$$



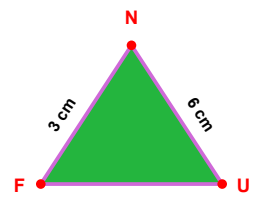
$$|KC| - |CH| = \dots\dots$$



$$|ÜV| - |VM| = \dots\dots$$

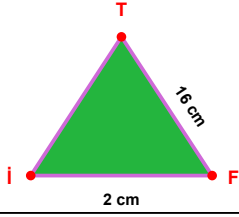


$$|ND| - |DU| = \dots\dots$$

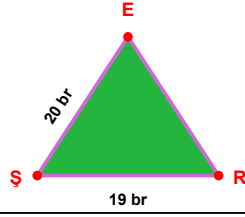


$$|UN| - |NF| = \dots\dots$$

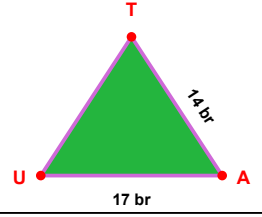
SORU: Aşağıdaki şekillerde verilen, kenar uzunlukları farklarını bulunuz.



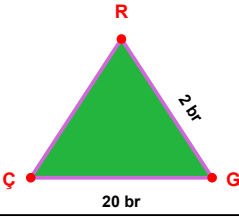
$$|FT| - |IF| = \dots\dots\dots$$



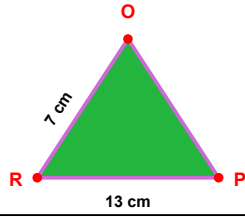
$$|EŞ| - |ŞR| = \dots\dots\dots$$



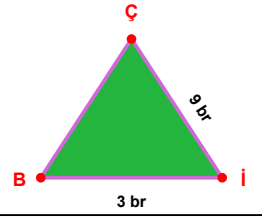
$$|UA| - |AT| = \dots\dots\dots$$



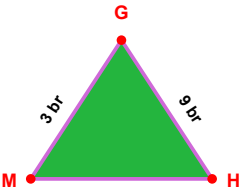
$$|ÇG| - |GR| = \dots\dots\dots$$



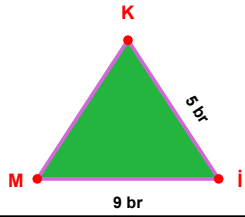
$$|RP| - |OR| = \dots\dots\dots$$



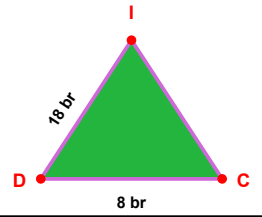
$$|İÇ| - |Bİ| = \dots\dots\dots$$



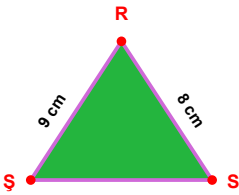
$$|HG| - |GM| = \dots\dots\dots$$



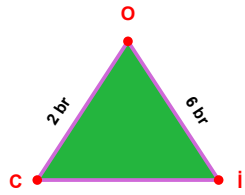
$$|Mİ| - |İK| = \dots\dots\dots$$



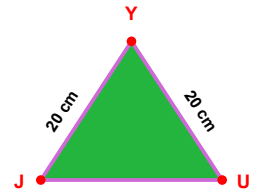
$$|ID| - |DC| = \dots\dots\dots$$



$$|RŞ| - |SR| = \dots\dots\dots$$



$$|İO| - |OC| = \dots\dots\dots$$



$$|UY| - |YJ| = \dots\dots\dots$$

SÜREÇ ODAKLI DEĞERLENDİRME ÖLÇEĞİ

Doğru Sayısı: / 24

Öğretmen ilgili kutucuğu işaretler.

Geliştirilmeli (0-8)

İyi (9-14)

Çok İyi (15-20)

Mükemmel (21-24)

☐
☐
☐
☐

Hazırlayan: Şeyhmus Öğretmen

Bu bölüme sınıfınızın ilgili kazanıma yönelik genel durumuna ilişkin gözlem ve izlenimlerinizi, öğrencilerinizin bu kazanımla ilgili öğrenme eksikliklerini ve bu eksikliklerin giderilmesi amacıyla yaptığınız/yapmayı planladığınız faaliyetleri not edebilirsiniz.

No	Adı - Soyadı	Toplam Puan	Değerlendirme
1			
2			
3			
4			
5			
6			
7			
8			
9			
10			
11			
12			
13			
14			
15			
16			
17			
18			
19			
20			
21			
22			
23			
24			
25			
26			
27			
28			
29			
30			
31			
32			
33			
34			
35			

Hazırlayan: Şeyhmus Öğretmen