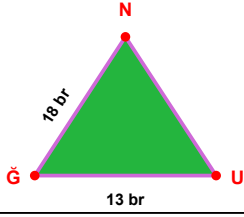
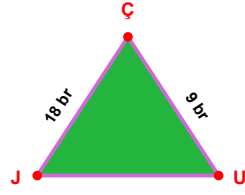


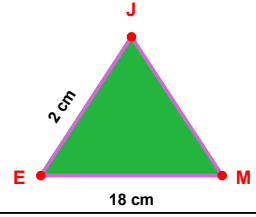
**SORU:** Aşağıdaki şekillerde verilen, kenar uzunlukları farklarını bulunuz.



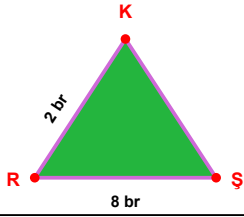
$$|NĖ| - |ĖU| = \dots\dots\dots$$



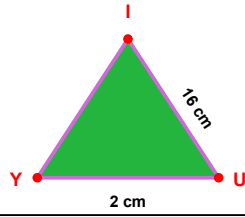
$$|ÇJ| - |ÜÇ| = \dots\dots\dots$$



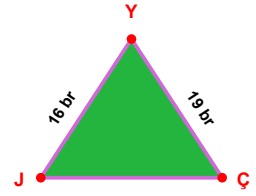
$$|EM| - |JE| = \dots\dots\dots$$



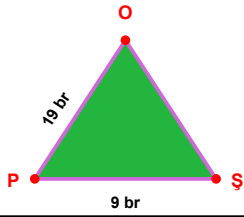
$$|RŞ| - |KR| = \dots\dots\dots$$



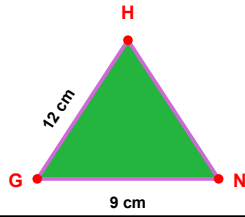
$$|Üİ| - |YÜ| = \dots\dots\dots$$



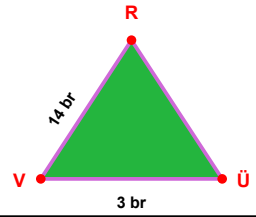
$$|ÇY| - |YJ| = \dots\dots\dots$$



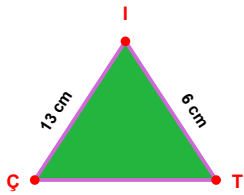
$$|OP| - |PŞ| = \dots\dots\dots$$



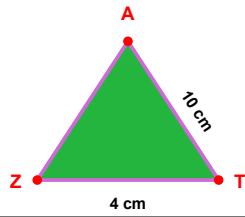
$$|HG| - |Gİ| = \dots\dots\dots$$



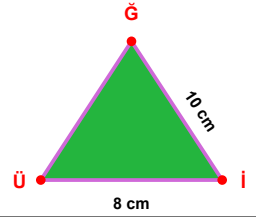
$$|RV| - |VÜ| = \dots\dots\dots$$



$$|İÇ| - |TI| = \dots\dots\dots$$

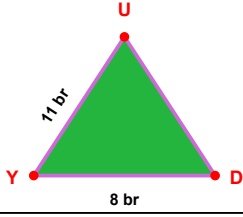


$$|TA| - |ZT| = \dots\dots\dots$$

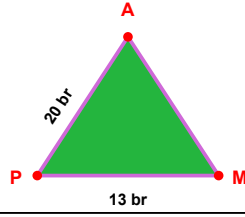


$$|İÜ| - |Üİ| = \dots\dots\dots$$

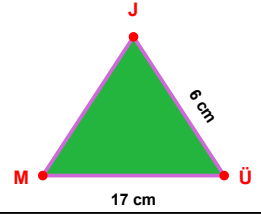
**SORU:** Aşağıdaki şekillerde verilen, kenar uzunlukları farklarını bulunuz.



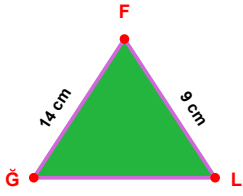
$$|UY| - |YD| = \dots\dots\dots$$



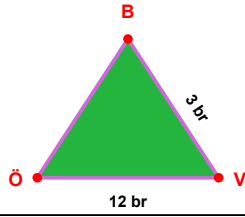
$$|AP| - |PM| = \dots\dots\dots$$



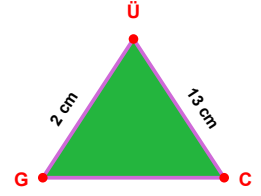
$$|MJ| - |JÜ| = \dots\dots\dots$$



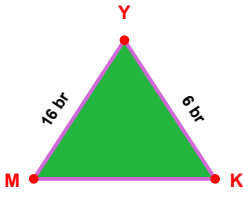
$$|FĞ| - |GL| = \dots\dots\dots$$



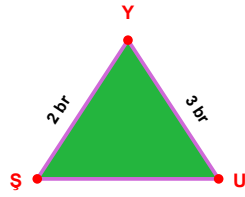
$$|BV| - |ÖV| = \dots\dots\dots$$



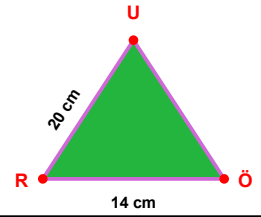
$$|GÜ| - |UC| = \dots\dots\dots$$



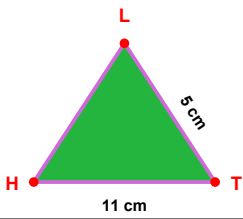
$$|MY| - |YK| = \dots\dots\dots$$



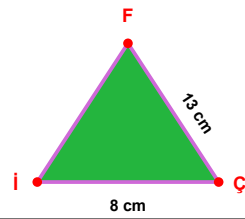
$$|YŞ| - |ŞÜ| = \dots\dots\dots$$



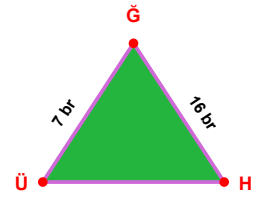
$$|UR| - |RÖ| = \dots\dots\dots$$



$$|LT| - |HT| = \dots\dots\dots$$



$$|Fİ| - |İÇ| = \dots\dots\dots$$



$$|GÜ| - |ÜH| = \dots\dots\dots$$

## SÜREÇ ODAKLI DEĞERLENDİRME ÖLÇEĞİ

Doğru Sayısı: ..... / 24

Öğretmen ilgili kutucuğu işaretler.

Geliştirilmeli (0-8)

İyi (9-14)

Çok İyi (15-20)

Mükemmel (21-24)

☐
☐
☐
☐

Hazırlayan: Şeyhmus Öğretmen

**Bu bölüme sınıfınızın ilgili kazanıma yönelik genel durumuna ilişkin gözlem ve izlenimlerinizi, öğrencilerinizin bu kazanımla ilgili öğrenme eksikliklerini ve bu eksikliklerin giderilmesi amacıyla yaptığınız/yapmayı planladığınız faaliyetleri not edebilirsiniz.**

No	Adı - Soyadı	Toplam Puan	Değerlendirme
1			
2			
3			
4			
5			
6			
7			
8			
9			
10			
11			
12			
13			
14			
15			
16			
17			
18			
19			
20			
21			
22			
23			
24			
25			
26			
27			
28			
29			
30			
31			
32			
33			
34			
35			

**Hazırlayan: Şeyhmus Öğretmen**