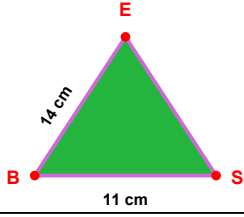
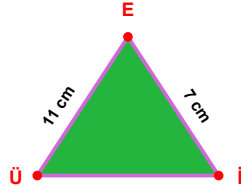


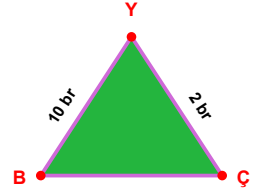
SORU: Aşağıdaki şekillerde verilen, kenar uzunlukları farklarını bulunuz.



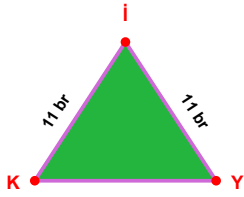
$$|EB| - |BS| = \dots\dots\dots$$



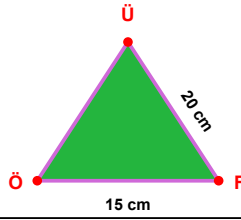
$$|EÜ| - |İE| = \dots\dots\dots$$



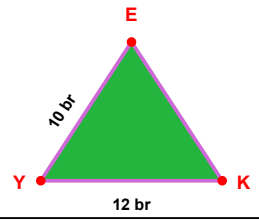
$$|YB| - |ÇY| = \dots\dots\dots$$



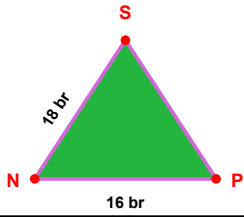
$$|Yİ| - |İK| = \dots\dots\dots$$



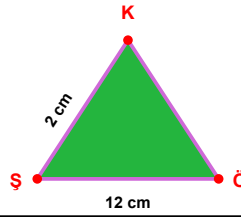
$$|FÜ| - |ÖF| = \dots\dots\dots$$



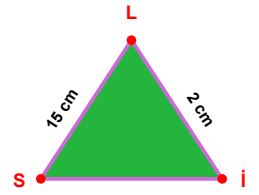
$$|YK| - |EY| = \dots\dots\dots$$



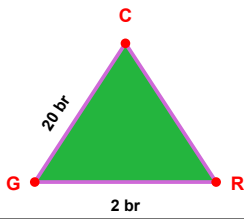
$$|SN| - |NP| = \dots\dots\dots$$



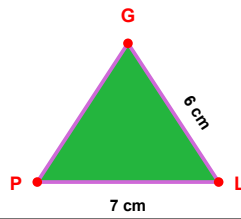
$$|ŞÖ| - |KŞ| = \dots\dots\dots$$



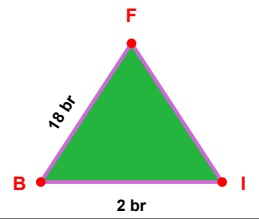
$$|LS| - |İL| = \dots\dots\dots$$



$$|CG| - |GR| = \dots\dots\dots$$

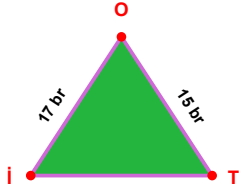


$$|PL| - |LG| = \dots\dots\dots$$

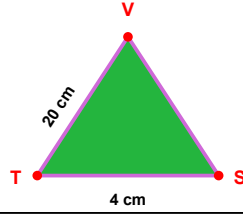


$$|FB| - |BI| = \dots\dots\dots$$

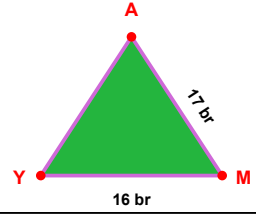
SORU: Aşağıdaki şekillerde verilen, kenar uzunlukları farklarını bulunuz.



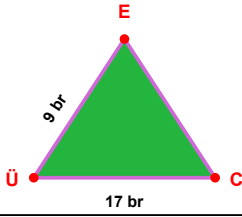
$$|OI| - |OT| = \dots\dots\dots$$



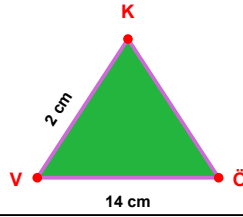
$$|VT| - |TS| = \dots\dots\dots$$



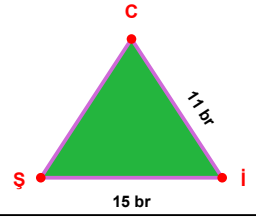
$$|MA| - |YM| = \dots\dots\dots$$



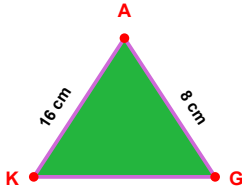
$$|ÜC| - |EÜ| = \dots\dots\dots$$



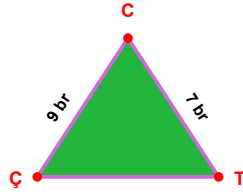
$$|VÖ| - |KV| = \dots\dots\dots$$



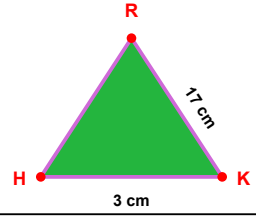
$$|Şİ| - |İC| = \dots\dots\dots$$



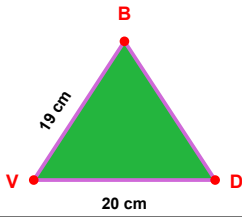
$$|AK| - |GA| = \dots\dots\dots$$



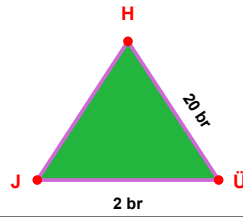
$$|CÇ| - |TC| = \dots\dots\dots$$



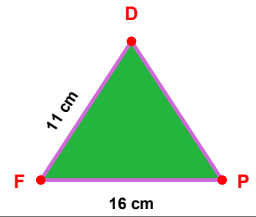
$$|KR| - |HK| = \dots\dots\dots$$



$$|VD| - |BV| = \dots\dots\dots$$



$$|ÜH| - |JÜ| = \dots\dots\dots$$



$$|FP| - |DF| = \dots\dots\dots$$

SÜREÇ ODAKLI DEĞERLENDİRME ÖLÇEĞİ

Doğru Sayısı: / 24

Öğretmen ilgili kutucuğu işaretler.

Geliştirilmeli (0-8)

İyi (9-14)

Çok İyi (15-20)

Mükemmel (21-24)

☐☐☐☐

Hazırlayan: Şeyhmus Öğretmen

Bu bölüme sınıfınızın ilgili kazanıma yönelik genel durumuna ilişkin gözlem ve izlenimlerinizi, öğrencilerinizin bu kazanımla ilgili öğrenme eksikliklerini ve bu eksikliklerin giderilmesi amacıyla yaptığınız/yapmayı planladığınız faaliyetleri not edebilirsiniz.

| No | Adı - Soyadı | Toplam Puan | Değerlendirme |
|----|--------------|-------------|---------------|
| 1 | | | |
| 2 | | | |
| 3 | | | |
| 4 | | | |
| 5 | | | |
| 6 | | | |
| 7 | | | |
| 8 | | | |
| 9 | | | |
| 10 | | | |
| 11 | | | |
| 12 | | | |
| 13 | | | |
| 14 | | | |
| 15 | | | |
| 16 | | | |
| 17 | | | |
| 18 | | | |
| 19 | | | |
| 20 | | | |
| 21 | | | |
| 22 | | | |
| 23 | | | |
| 24 | | | |
| 25 | | | |
| 26 | | | |
| 27 | | | |
| 28 | | | |
| 29 | | | |
| 30 | | | |
| 31 | | | |
| 32 | | | |
| 33 | | | |
| 34 | | | |
| 35 | | | |

Hazırlayan: Şeyhmus Öğretmen