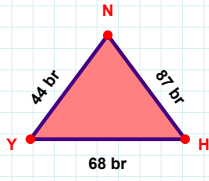
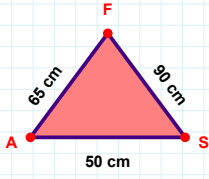


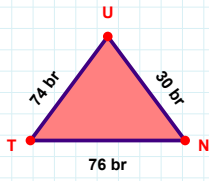
SORU: Aşağıdaki geometrik şekillerle ilgili soruları cevaplayınız.

44 br hangi kenara aittir?

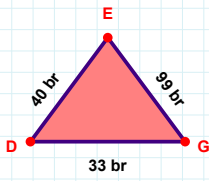
Kenar:

 $|AS| + |SF| = \dots$

Cevap: cm

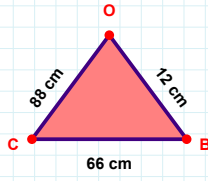
 $|UT|$ kaç brdir?

- ☐ 73 br
☐ 74 br
☐ 75 br



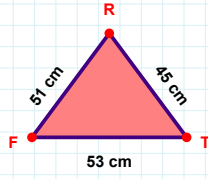
99 br hangi kenara aittir?

- ☐ GE kenarı
☐ XY kenarı
☐ ED kenarı

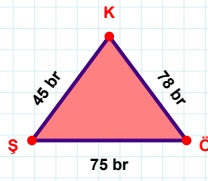


12 cm hangi kenara aittir?

- ☐ BO kenarı
☐ OC kenarı
☐ XY kenarı

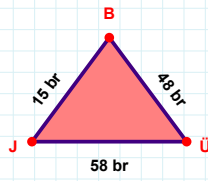
 $|TR|$ kaç cm'dir?

- ☐ 44 cm
☐ 45 cm
☐ 46 cm



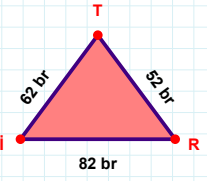
78 br hangi kenara aittir?

- ☐ KŞ kenarı
☐ ÖK kenarı
☐ XY kenarı

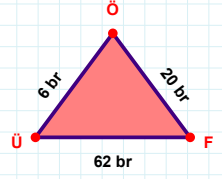


58 br hangi kenara aittir?

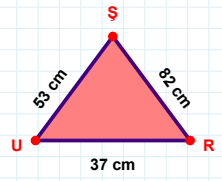
Kenar:

 $|TI|$ kaç brdir?

- ☐ 61 br
☐ 62 br
☐ 63 br

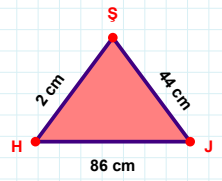
 $|FÖ|$ kaç brdir?

- ☐ 19 br
☐ 20 br
☐ 21 br



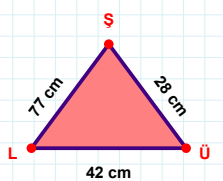
82 cm hangi kenara aittir?

- ☐ RŞ kenarı
☐ XY kenarı
☐ ŞU kenarı

 $|SH| + |HJ| = \dots$

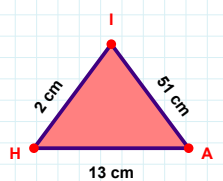
Cevap: cm

SORU: Aşağıdaki geometrik şekillerle ilgili soruları cevaplayınız.



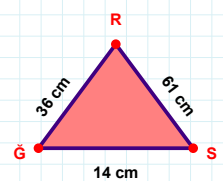
28 cm hangi kenara aittir?

☐ LÜ kenarı
☐ XY kenarı
☐ ÜŞ kenarı



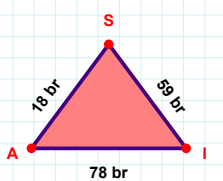
51 cm hangi kenara aittir?

☐ XY kenarı
☐ HA kenarı
☐ AI kenarı



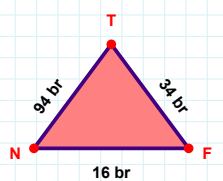
61 cm hangi kenara aittir?

☐ RĞ kenarı
☐ ĞS kenarı
☐ XY kenarı



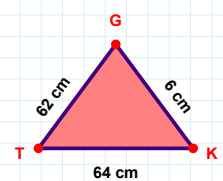
78 br hangi kenara aittir?

Kenar:



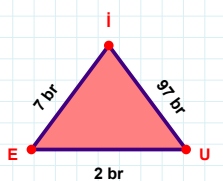
34 br hangi kenara aittir?

☐ XY kenarı
☐ FT kenarı
☐ TN kenarı



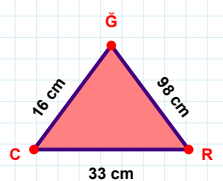
|GT| kaç cmdir?

☐ 61 cm
☐ 62 cm
☐ 63 cm



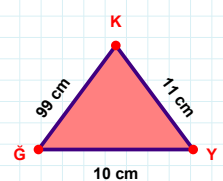
|İE| + |EU| =

Cevap: br



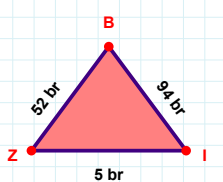
33 cm hangi kenara aittir?

Kenar:



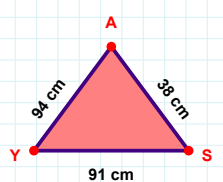
10 cm hangi kenara aittir?

Kenar:



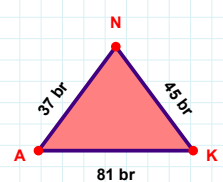
94 br hangi kenara aittir?

☐ IB kenarı
☐ ZI kenarı
☐ XY kenarı



|SA| kaç cmdir?

☐ 37 cm
☐ 38 cm
☐ 39 cm



45 br hangi kenara aittir?

☐ AK kenarı
☐ XY kenarı
☐ NA kenarı

SÜREÇ ODAKLI DEĞERLENDİRME ÖLÇEĞİ

Doğru Sayısı: / 24

Öğretmen ilgili kutucuğu işaretler.

Geliştirilmeli (0-8)

İyi (9-14)

Çok İyi (15-20)

Mükemmel (21-24)

☐☐☐☐

Hazırlayan:

Bu bölüme sınıfınızın ilgili kazanıma yönelik genel durumuna ilişkin gözlem ve izlenimlerinizi, öğrencilerinizin bu kazanımla ilgili öğrenme eksikliklerini ve bu eksikliklerin giderilmesi amacıyla yaptığınız/yapmayı planladığınız faaliyetleri not edebilirsiniz.

No	Adı - Soyadı	Toplam Puan	Değerlendirme
1			
2			
3			
4			
5			
6			
7			
8			
9			
10			
11			
12			
13			
14			
15			
16			
17			
18			
19			
20			
21			
22			
23			
24			
25			
26			
27			
28			
29			
30			
31			
32			
33			
34			
35			

Hazırlayan: