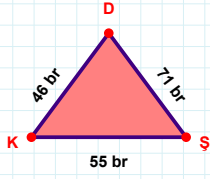
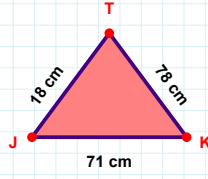
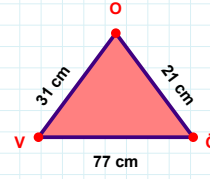


**SORU:** Aşağıdaki geometrik şekillerle ilgili soruları cevaplayınız.**|KS| kaç brdir?**

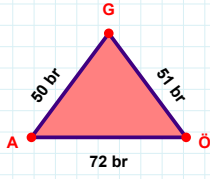
- ☐ 54 br  
☐ 55 br  
☐ 56 br

**78 cm hangi kenara aittir?**

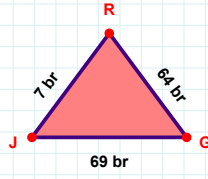
Kenar: .....

**31 cm hangi kenara aittir?**

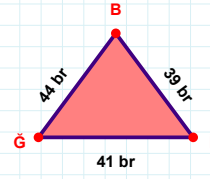
Kenar: .....

**|GA| + |AO| = ....**

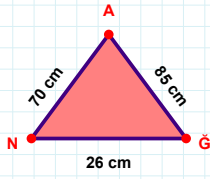
Cevap: ..... br

**64 br hangi kenara aittir?**

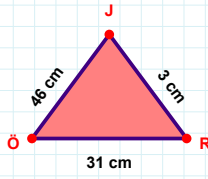
- ☐ JG kenarı  
☐ GR kenarı  
☐ XY kenarı

**39 br hangi kenara aittir?**

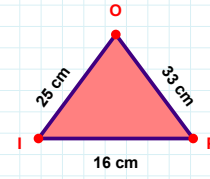
- ☐ BĞ kenarı  
☐ İB kenarı  
☐ XY kenarı

**85 cm hangi kenara aittir?**

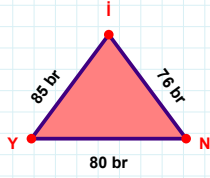
Kenar: .....

**3 cm hangi kenara aittir?**

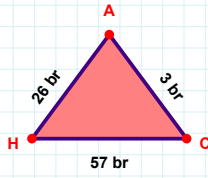
- ☐ JO kenarı  
☐ XY kenarı  
☐ RJ kenarı

**|IP| kaç cmdir?**

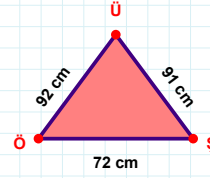
- ☐ 15 cm  
☐ 16 cm  
☐ 17 cm

**|YN| kaç brdir?**

- ☐ 79 br  
☐ 80 br  
☐ 81 br

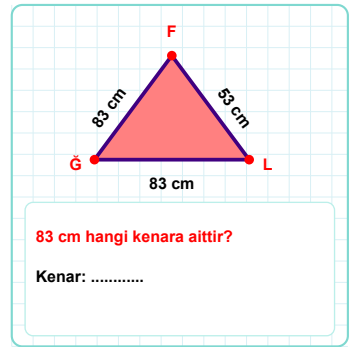
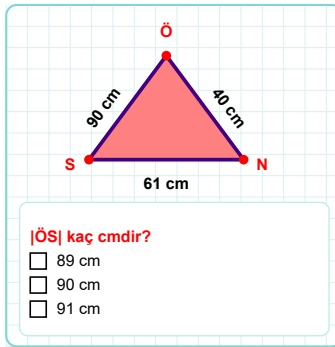
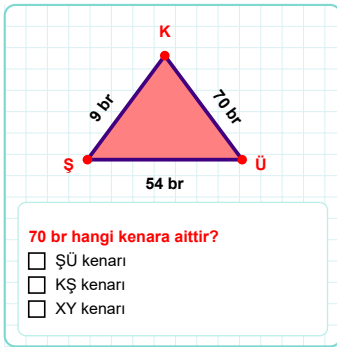
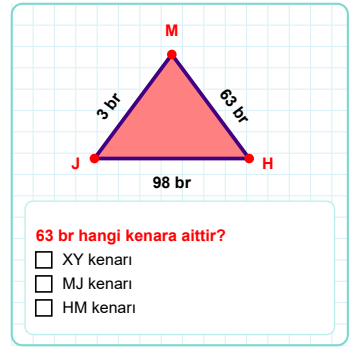
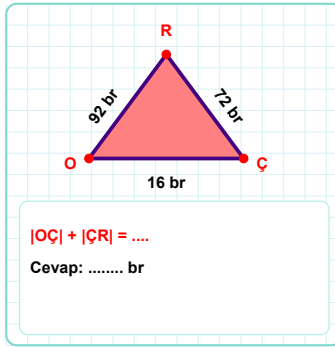
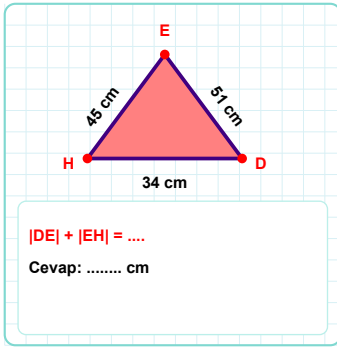
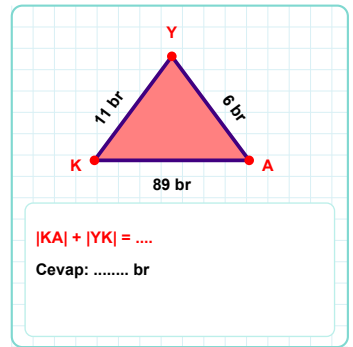
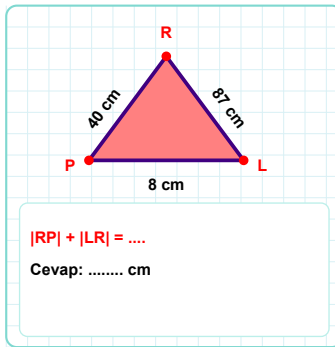
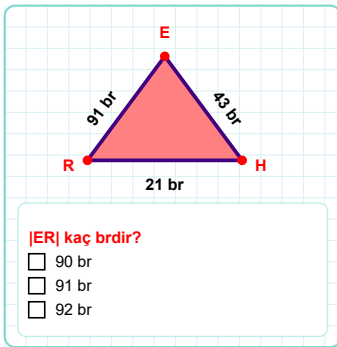
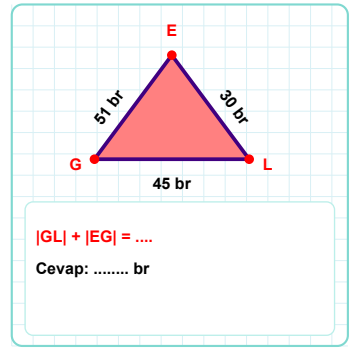
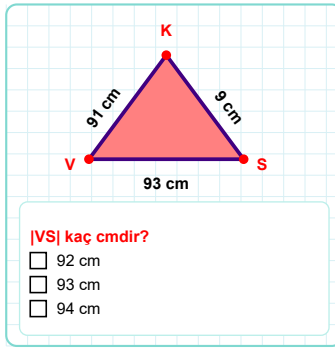
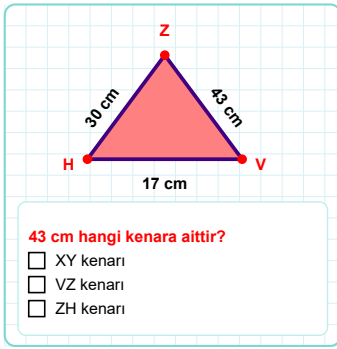
**3 br hangi kenara aittir?**

- ☐ AH kenarı  
☐ HC kenarı  
☐ XY kenarı

**91 cm hangi kenara aittir?**

- ☐ XY kenarı  
☐ ŞÜ kenarı  
☐ ÜÖ kenarı

**SORU:** Aşağıdaki geometrik şekillerle ilgili soruları cevaplayınız.



## SÜREÇ ODAKLI DEĞERLENDİRME ÖLÇEĞİ

Doğru Sayısı: ..... / 24

Öğretmen ilgili kutucuğu işaretler.

Geliştirilmeli (0-8)

İyi (9-14)

Çok İyi (15-20)

Mükemmel (21-24)

☐
☐
☐
☐

Hazırlayan: .....

Bu bölüme sınıfınızın ilgili kazanıma yönelik genel durumuna ilişkin gözlem ve izlenimlerinizi, öğrencilerinizin bu kazanımla ilgili öğrenme eksikliklerini ve bu eksikliklerin giderilmesi amacıyla yaptığınız/yapmayı planladığınız faaliyetleri not edebilirsiniz.

No	Adı - Soyadı	Toplam Puan	Değerlendirme
1			
2			
3			
4			
5			
6			
7			
8			
9			
10			
11			
12			
13			
14			
15			
16			
17			
18			
19			
20			
21			
22			
23			
24			
25			
26			
27			
28			
29			
30			
31			
32			
33			
34			
35			

Hazırlayan: .....