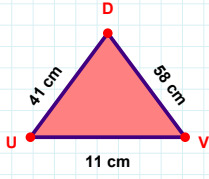
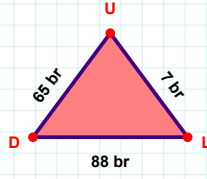
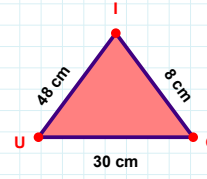


SORU: Aşağıdaki geometrik şekillerle ilgili soruları cevaplayınız.**|DU| kaç cm'dir?**

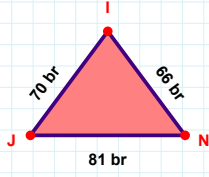
- ☐ 40 cm
☐ 41 cm
☐ 42 cm

**65 br hangi kenara aittir?**

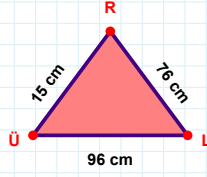
Kenar:

**48 cm hangi kenara aittir?**

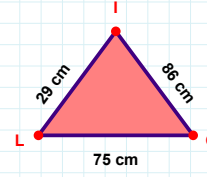
Kenar:

**70 br hangi kenara aittir?**

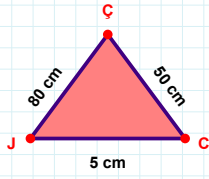
Kenar:

**|RÜ| kaç cm'dir?**

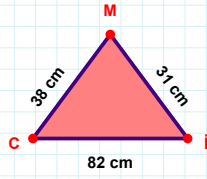
- ☐ 14 cm
☐ 15 cm
☐ 16 cm

**|İL| + |LG| =**

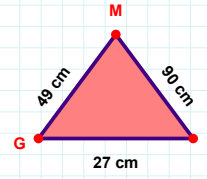
Cevap: cm

**50 cm hangi kenara aittir?**

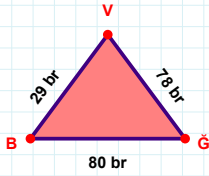
Kenar:

**|CI| kaç cm'dir?**

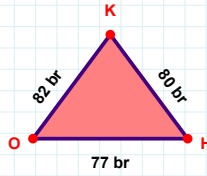
- ☐ 81 cm
☐ 82 cm
☐ 83 cm

**|FM| + |GF| =**

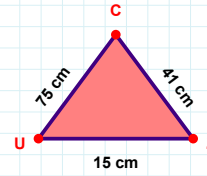
Cevap: cm

**78 br hangi kenara aittir?**

- ☐ BĞ kenarı
☐ XY kenarı
☐ GV kenarı

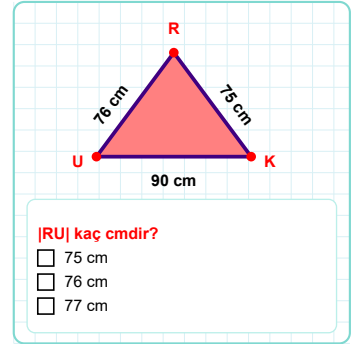
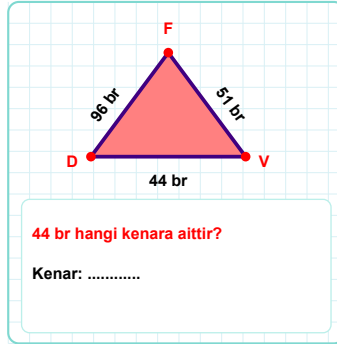
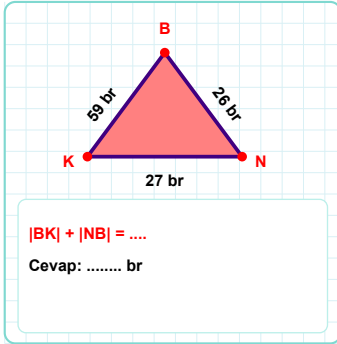
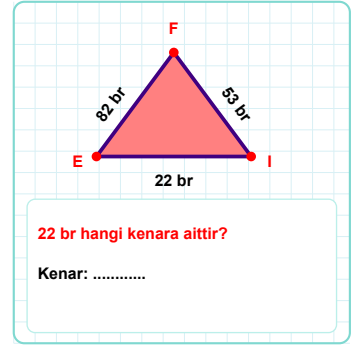
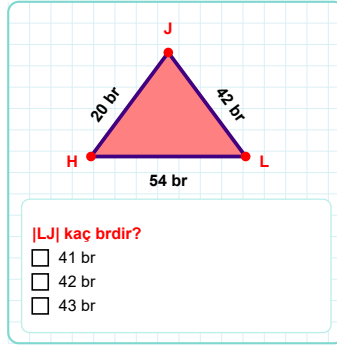
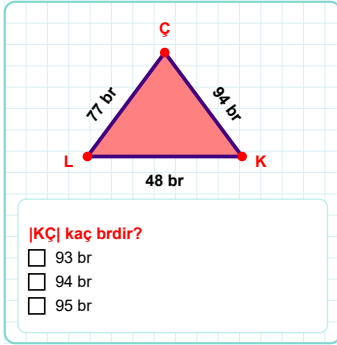
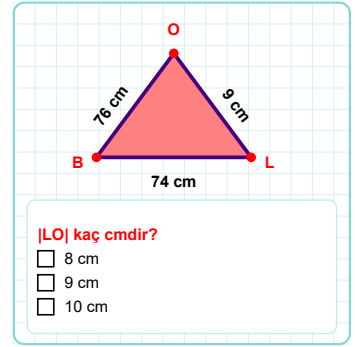
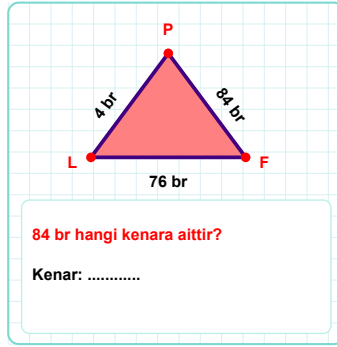
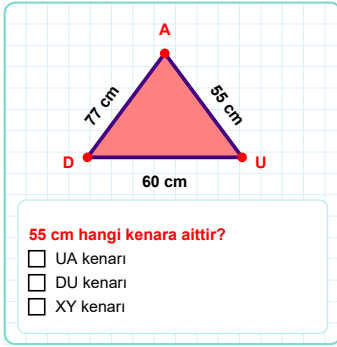
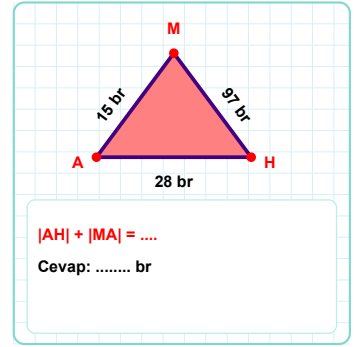
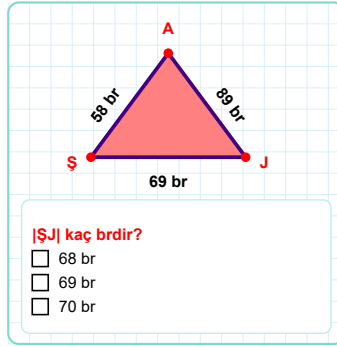
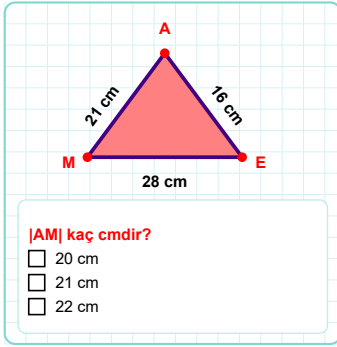
**80 br hangi kenara aittir?**

- ☐ OH kenarı
☐ XY kenarı
☐ KO kenarı

**|ZC| + |CU| =**

Cevap: cm

SORU: Aşağıdaki geometrik şekillerle ilgili soruları cevaplayınız.



SÜREÇ ODAKLI DEĞERLENDİRME ÖLÇEĞİ

Doğru Sayısı: / 24

Öğretmen ilgili kutucuğu işaretler.

Geliştirilmeli (0-8)

İyi (9-14)

Çok İyi (15-20)

Mükemmel (21-24)

☐☐☐☐

Hazırlayan:

Bu bölüme sınıfınızın ilgili kazanıma yönelik genel durumuna ilişkin gözlem ve izlenimlerinizi, öğrencilerinizin bu kazanımla ilgili öğrenme eksikliklerini ve bu eksikliklerin giderilmesi amacıyla yaptığınız/yapmayı planladığınız faaliyetleri not edebilirsiniz.

No	Adı - Soyadı	Toplam Puan	Değerlendirme
1			
2			
3			
4			
5			
6			
7			
8			
9			
10			
11			
12			
13			
14			
15			
16			
17			
18			
19			
20			
21			
22			
23			
24			
25			
26			
27			
28			
29			
30			
31			
32			
33			
34			
35			

Hazırlayan: