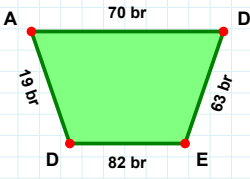
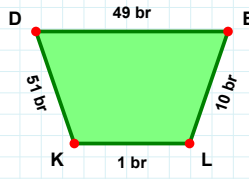


**SORU:** Aşağıdaki şekillerde istenen kenarın kaç birim veya santimetre olduğunu bulunuz.

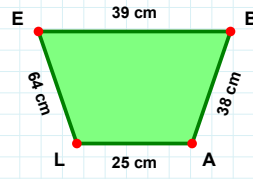
|LK| kaç brdir?

- ☐ 2 br  
☐ 1 br  
☐ 4 br



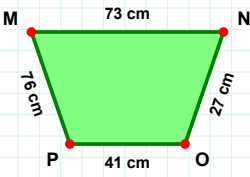
|DA| kaç brdir?

- ☐ 14 br  
☐ 21 br  
☐ 19 br



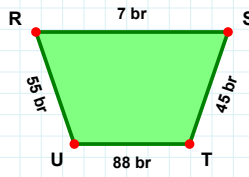
|AL| kaç cmdir?

- ☐ 27 cm  
☐ 24 cm  
☐ 25 cm



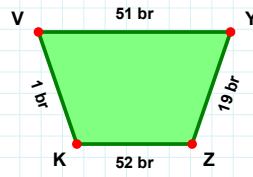
|PM| kaç cmdir?

- ☐ 75 cm  
☐ 86 cm  
☐ 76 cm



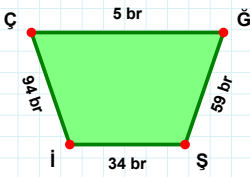
|RS| kaç brdir?

- ☐ 12 br  
☐ 7 br  
☐ 9 br



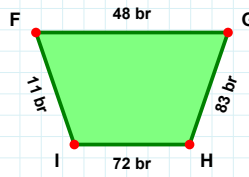
|ZK| kaç brdir?

- ☐ 49 br  
☐ 47 br  
☐ 52 br



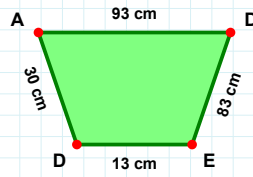
|GH| kaç brdir?

- ☐ 83 br  
☐ 88 br  
☐ 78 br



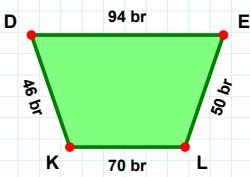
|AD| kaç cmdir?

- ☐ 93 cm  
☐ 95 cm  
☐ 96 cm



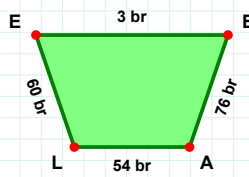
|İÇ| kaç brdir?

- ☐ 94 br  
☐ 89 br  
☐ 93 br



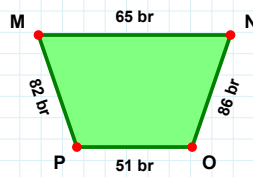
|DE| kaç brdir?

- ☐ 99 br  
☐ 96 br  
☐ 94 br



|LE| kaç brdir?

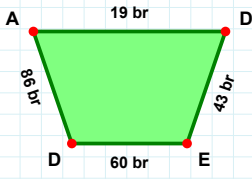
- ☐ 60 br  
☐ 55 br  
☐ 70 br



|NO| kaç brdir?

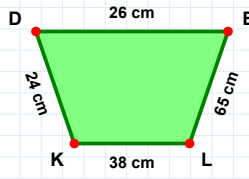
- ☐ 91 br  
☐ 86 br  
☐ 88 br

**SORU:** Aşağıdaki şekillerde istenen kenarın kaç birim veya santimetre olduğunu bulunuz.



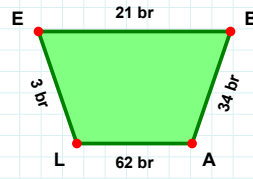
|LK| kaç cmdir?

- ☐ 38 cm  
☐ 35 cm  
☐ 48 cm



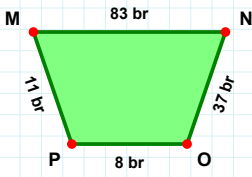
|AD| kaç brdir?

- ☐ 20 br  
☐ 19 br  
☐ 29 br



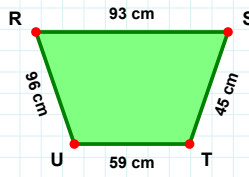
|LE| kaç brdir?

- ☐ 3 br  
☐ 6 br  
☐ 8 br



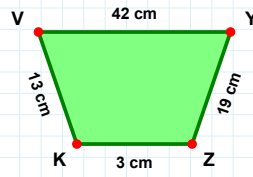
|ST| kaç cmdir?

- ☐ 50 cm  
☐ 45 cm  
☐ 42 cm



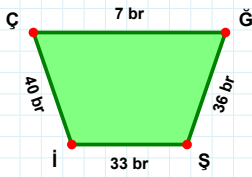
|OP| kaç brdir?

- ☐ 8 br  
☐ 5 br  
☐ 18 br



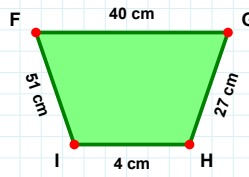
|YZ| kaç cmdir?

- ☐ 19 cm  
☐ 24 cm  
☐ 16 cm



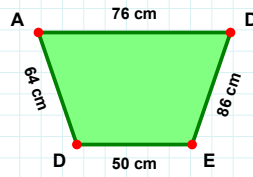
|ED| kaç cmdir?

- ☐ 50 cm  
☐ 45 cm  
☐ 49 cm



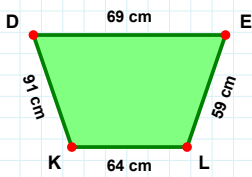
|İF| kaç cmdir?

- ☐ 41 cm  
☐ 51 cm  
☐ 61 cm



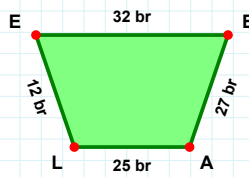
|Şİ| kaç brdir?

- ☐ 32 br  
☐ 33 br  
☐ 43 br



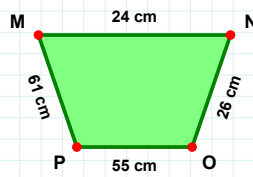
|MN| kaç cmdir?

- ☐ 26 cm  
☐ 24 cm  
☐ 25 cm



|EL| kaç cmdir?

- ☐ 62 cm  
☐ 59 cm  
☐ 69 cm



|AL| kaç brdir?

- ☐ 27 br  
☐ 28 br  
☐ 25 br

### SÜREÇ ODAKLI DEĞERLENDİRME ÖLÇEĞİ

Doğru Sayısı: ..... / 24

Öğretmen ilgili kutucuğu işaretler.

Geliştirilmeli (0-8)

İyi (9-14)

Çok İyi (15-20)

Mükemmel (21-24)

☐
☐
☐
☐

Hazırlayan: .....

Bu bölüme sınıfınızın ilgili kazanıma yönelik genel durumuna ilişkin gözlem ve izlenimlerinizi, öğrencilerinizin bu kazanımla ilgili öğrenme eksikliklerini ve bu eksikliklerin giderilmesi amacıyla yaptığınız/yapmayı planladığınız faaliyetleri not edebilirsiniz.

No	Adı - Soyadı	Toplam Puan	Değerlendirme
1			
2			
3			
4			
5			
6			
7			
8			
9			
10			
11			
12			
13			
14			
15			
16			
17			
18			
19			
20			
21			
22			
23			
24			
25			
26			
27			
28			
29			
30			
31			
32			
33			
34			
35			

Hazırlayan: .....