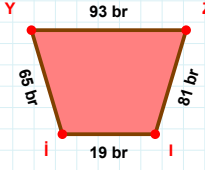
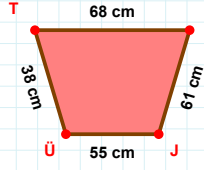


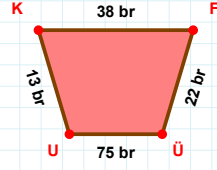
**SORU:** Aşağıdaki geometrik şekillerle ilgili soruları cevaplayınız.

81 br hangi kenara aittir?

Kenar: .....

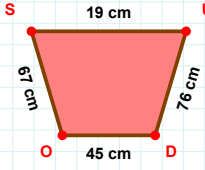
 $|ÜT| + |TZ| = \dots$ 

Cevap: ..... cm

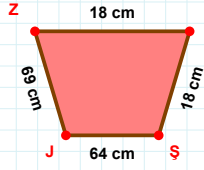


38 br hangi kenara aittir?

Kenar: .....

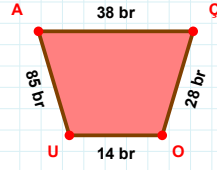
 $|UD| + |SU| = \dots$ 

Cevap: ..... cm



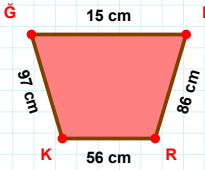
69 cm hangi kenara aittir?

- ☐ ŞZ kenarı  
☐ JZ kenarı  
☐ NŞ kenarı



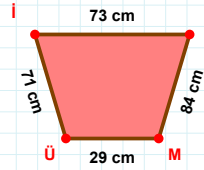
38 br hangi kenara aittir?

Kenar: .....



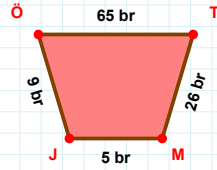
97 cm hangi kenara aittir?

Kenar: .....



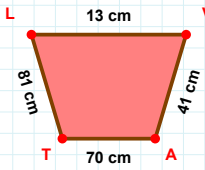
71 cm hangi kenara aittir?

- ☐ Mİ kenarı  
☐ Üİ kenarı  
☐ MÜ kenarı



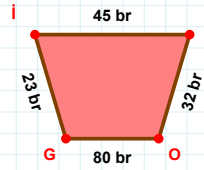
9 br hangi kenara aittir?

Kenar: .....

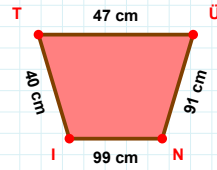


13 cm hangi kenara aittir?

Kenar: .....

 $|OG| + |Gi| = \dots$ 

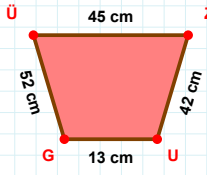
Cevap: ..... br



40 cm hangi kenara aittir?

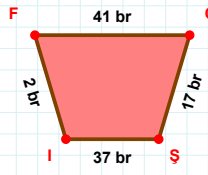
Kenar: .....

SORU: Aşağıdaki geometrik şekillerle ilgili soruları cevaplayınız.



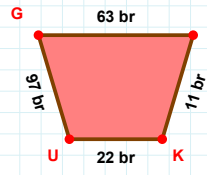
$$|ZU| + |UG| = \dots$$

Cevap: ..... cm



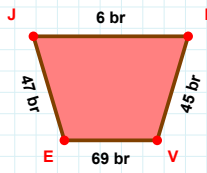
17 br hangi kenara aittir?

Kenar: .....



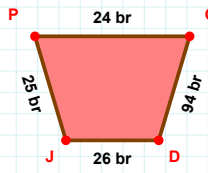
|GY| kaç brdir?

- ☐ 62 br  
☐ 63 br  
☐ 64 br



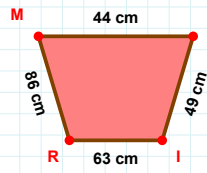
|JL| kaç brdir?

- ☐ 5 br  
☐ 6 br  
☐ 7 br



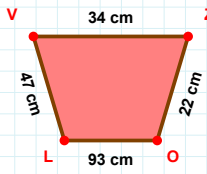
24 br hangi kenara aittir?

Kenar: .....



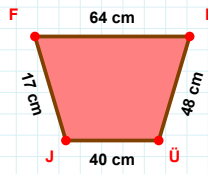
$$|RM| + |IR| = \dots$$

Cevap: ..... cm



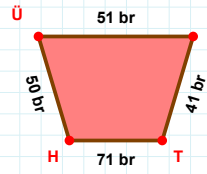
34 cm hangi kenara aittir?

Kenar: .....



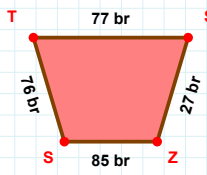
17 cm hangi kenara aittir?

- ☐ DJ kenarı  
☐ DÜ kenarı  
☐ ÜJ kenarı



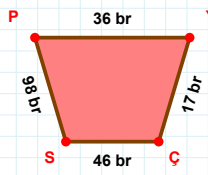
71 br hangi kenara aittir?

Kenar: .....



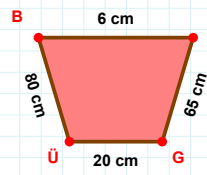
85 br hangi kenara aittir?

Kenar: .....



98 br hangi kenara aittir?

Kenar: .....



65 cm hangi kenara aittir?

Kenar: .....

## SÜREÇ ODAKLI DEĞERLENDİRME ÖLÇEĞİ

Doğru Sayısı: ..... / 24

Öğretmen ilgili kutucuğu işaretler.

Geliştirilmeli (0-8)

İyi (9-14)

Çok İyi (15-20)

Mükemmel (21-24)

☐
☐
☐
☐

Hazırlayan: .....

Bu bölüme sınıfınızın ilgili kazanıma yönelik genel durumuna ilişkin gözlem ve izlenimlerinizi, öğrencilerinizin bu kazanımla ilgili öğrenme eksikliklerini ve bu eksikliklerin giderilmesi amacıyla yaptığınız/yapmayı planladığınız faaliyetleri not edebilirsiniz.

No	Adı - Soyadı	Toplam Puan	Değerlendirme
1			
2			
3			
4			
5			
6			
7			
8			
9			
10			
11			
12			
13			
14			
15			
16			
17			
18			
19			
20			
21			
22			
23			
24			
25			
26			
27			
28			
29			
30			
31			
32			
33			
34			
35			

Hazırlayan: ..... ..