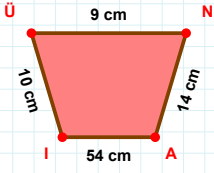
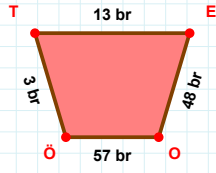
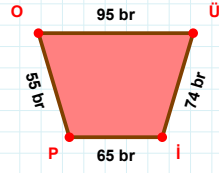


SORU: Aşağıdaki geometrik şekillerle ilgili soruları cevaplayınız.**|ÜN| kaç cmdir?**

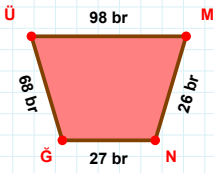
- ☐ 8 cm
☐ 9 cm
☐ 10 cm

**3 br hangi kenara aittir?**

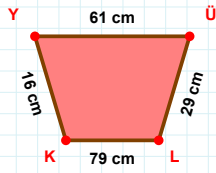
- ☐ OT kenarı
☐ ÖT kenarı
☐ EO kenarı

**|OÜ| kaç brdir?**

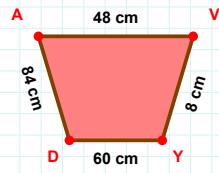
- ☐ 94 br
☐ 95 br
☐ 96 br

**98 br hangi kenara aittir?**

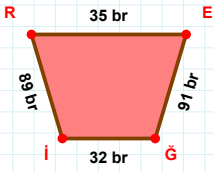
Kenar:

**|LK| + |KY| =**

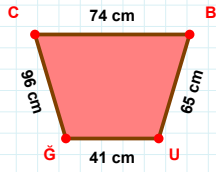
Cevap: cm

**84 cm hangi kenara aittir?**

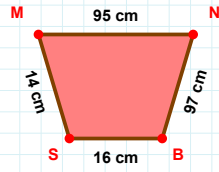
Kenar:

**89 br hangi kenara aittir?**

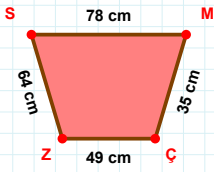
- ☐ EI kenarı
☐ İR kenarı
☐ GI kenarı

**|BU| + |GC| =**

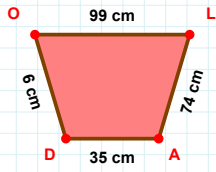
Cevap: cm

**95 cm hangi kenara aittir?**

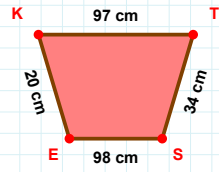
Kenar:

**|ÇZ| kaç cmdir?**

- ☐ 48 cm
☐ 49 cm
☐ 50 cm

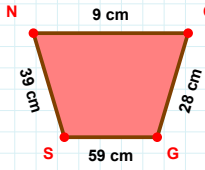
**|AD| kaç cmdir?**

- ☐ 34 cm
☐ 35 cm
☐ 36 cm

**|KT| kaç cmdir?**

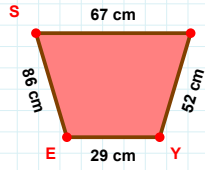
- ☐ 96 cm
☐ 97 cm
☐ 98 cm

SORU: Aşağıdaki geometrik şekillerle ilgili soruları cevaplayınız.

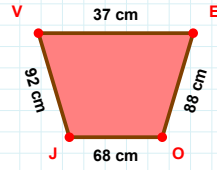


39 cm hangi kenara aittir?

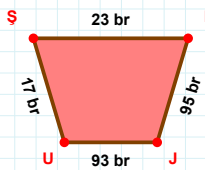
- ☐ NO kenarı
☐ SO kenarı
☐ GS kenarı

 $|SD| + |YE| = \dots$

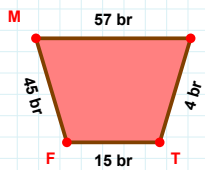
Cevap: cm

 $|OJ|$ kaç cm'dir?

- ☐ 67 cm
☐ 68 cm
☐ 69 cm

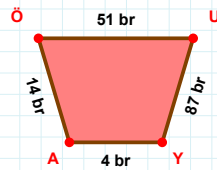
 $|UŞ| + |JU| = \dots$

Cevap: br



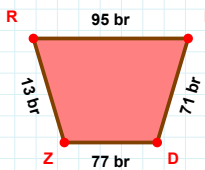
45 br hangi kenara aittir?

- ☐ TF kenarı
☐ FI kenarı
☐ MI kenarı



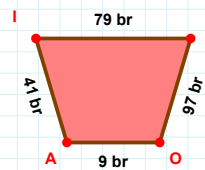
14 br hangi kenara aittir?

Kenar:

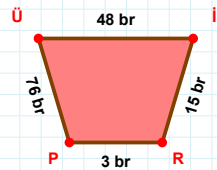


95 br hangi kenara aittir?

Kenar:

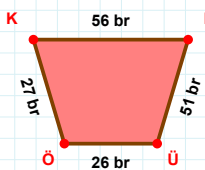
 $|AI|$ kaç br'dir?

- ☐ 40 br
☐ 41 br
☐ 42 br



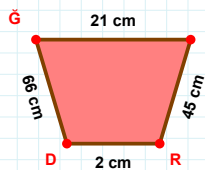
76 br hangi kenara aittir?

- ☐ PI kenarı
☐ İR kenarı
☐ PÜ kenarı



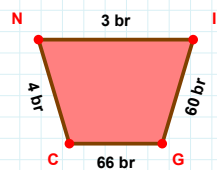
56 br hangi kenara aittir?

Kenar:



45 cm hangi kenara aittir?

Kenar:



3 br hangi kenara aittir?

Kenar:

SÜREÇ ODAKLI DEĞERLENDİRME ÖLÇEĞİ

Doğru Sayısı: / 24

Öğretmen ilgili kutucuğu işaretler.

Geliştirilmeli (0-8)

İyi (9-14)

Çok İyi (15-20)

Mükemmel (21-24)

☐
☐
☐
☐

Hazırlayan:

Bu bölüme sınıfınızın ilgili kazanıma yönelik genel durumuna ilişkin gözlem ve izlenimlerinizi, öğrencilerinizin bu kazanımla ilgili öğrenme eksikliklerini ve bu eksikliklerin giderilmesi amacıyla yaptığınız/yapmayı planladığınız faaliyetleri not edebilirsiniz.

No	Adı - Soyadı	Toplam Puan	Değerlendirme
1			
2			
3			
4			
5			
6			
7			
8			
9			
10			
11			
12			
13			
14			
15			
16			
17			
18			
19			
20			
21			
22			
23			
24			
25			
26			
27			
28			
29			
30			
31			
32			
33			
34			
35			

Hazırlayan: