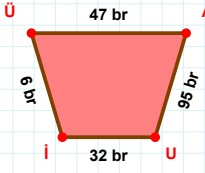
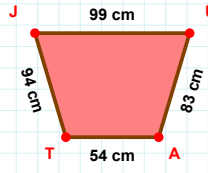


SORU: Aşağıdaki geometrik şekillerle ilgili soruları cevaplayınız.



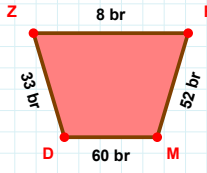
$$|İÜ| + |ÜA| = \dots$$

Cevap: ..... br



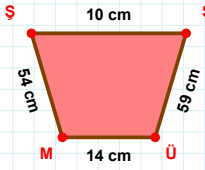
$$|JT| \text{ kaç cm'dir?}$$

- ☐ 93 cm  
☐ 94 cm  
☐ 95 cm



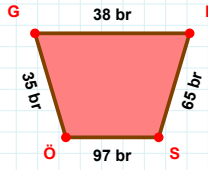
$$|MD| \text{ kaç br'dir?}$$

- ☐ 59 br  
☐ 60 br  
☐ 61 br



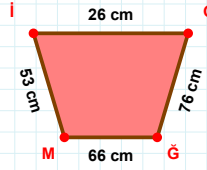
$$54 \text{ cm hangi kenara aittir?}$$

Kenar: .....



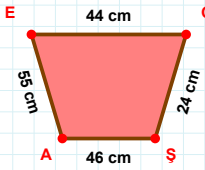
$$|NS| \text{ kaç br'dir?}$$

- ☐ 64 br  
☐ 65 br  
☐ 66 br



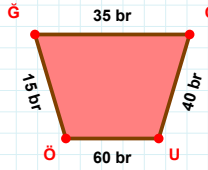
$$66 \text{ cm hangi kenara aittir?}$$

Kenar: .....



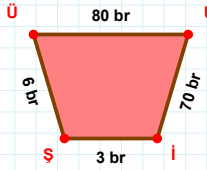
$$|AE| + |ŞA| = \dots$$

Cevap: ..... cm



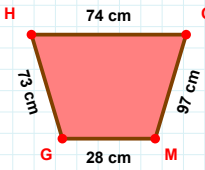
$$|ÖĞ| + |ĞÖ| = \dots$$

Cevap: ..... br



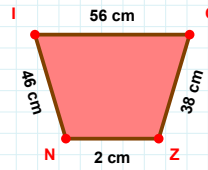
$$6 \text{ br hangi kenara aittir?}$$

- ☐ İÜ kenarı  
☐ İŞ kenarı  
☐ ÜU kenarı



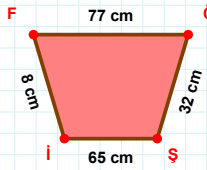
$$|OM| \text{ kaç cm'dir?}$$

- ☐ 96 cm  
☐ 97 cm  
☐ 98 cm



$$46 \text{ cm hangi kenara aittir?}$$

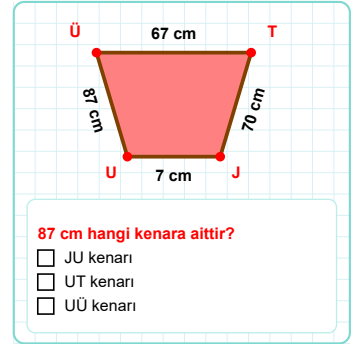
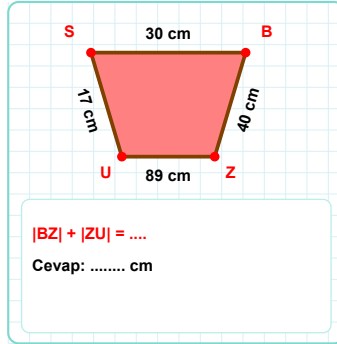
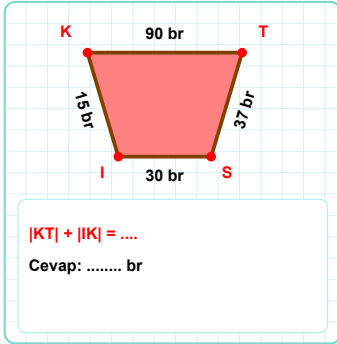
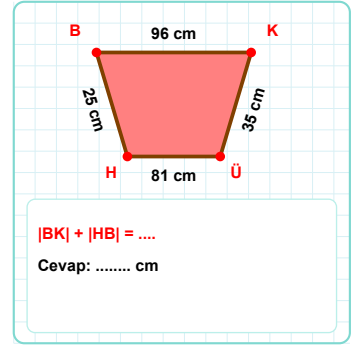
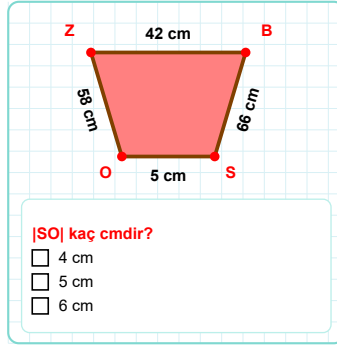
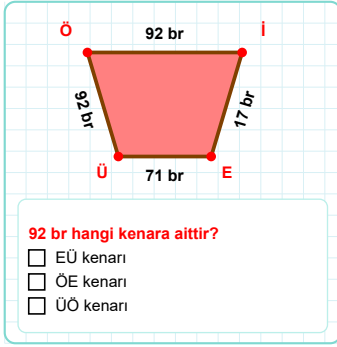
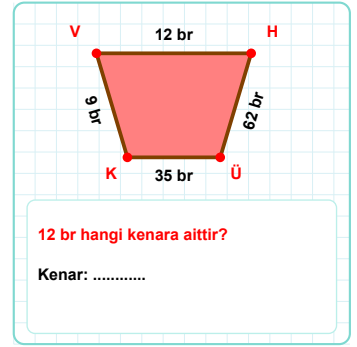
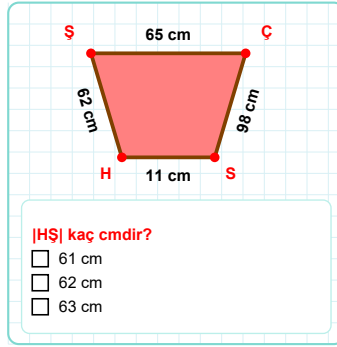
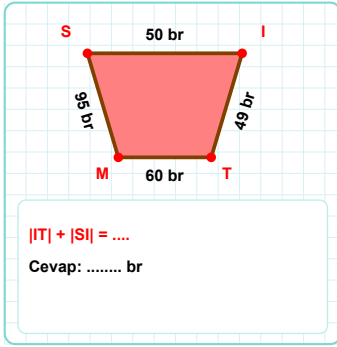
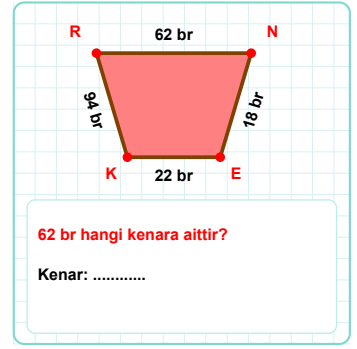
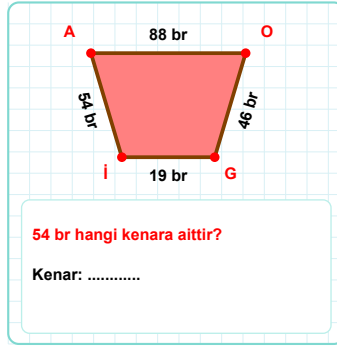
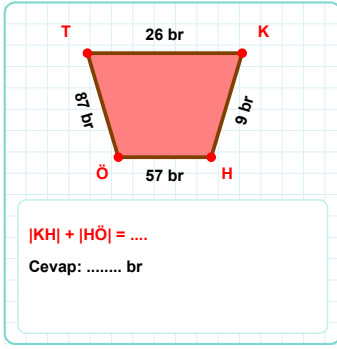
- ☐ NÇ kenarı  
☐ ÇZ kenarı  
☐ ZN kenarı



$$|Şİ| + |ÖŞ| = \dots$$

Cevap: ..... cm

**SORU:** Aşağıdaki geometrik şekillerle ilgili soruları cevaplayınız.



SÜREÇ ODAKLI DEĞERLENDİRME ÖLÇEĞİ

Doğru Sayısı: ..... / 24

Öğretmen ilgili kutucuğu işaretler.

Geliştirilmeli (0-8)

İyi (9-14)

Çok İyi (15-20)

Mükemmel (21-24)

☐
☐
☐
☐

Hazırlayan: .....

Bu bölüme sınıfınızın ilgili kazanıma yönelik genel durumuna ilişkin gözlem ve izlenimlerinizi, öğrencilerinizin bu kazanımla ilgili öğrenme eksikliklerini ve bu eksikliklerin giderilmesi amacıyla yaptığınız/yapmayı planladığınız faaliyetleri not edebilirsiniz.

No	Adı - Soyadı	Toplam Puan	Değerlendirme
1			
2			
3			
4			
5			
6			
7			
8			
9			
10			
11			
12			
13			
14			
15			
16			
17			
18			
19			
20			
21			
22			
23			
24			
25			
26			
27			
28			
29			
30			
31			
32			
33			
34			
35			

Hazırlayan: .....