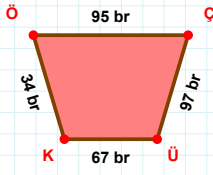
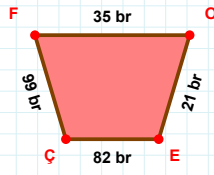


SORU: Aşağıdaki geometrik şekillerle ilgili soruları cevaplayınız.

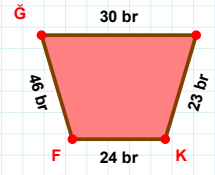
 $|ÖÇ| + |KÜ| = \dots$

Cevap: br

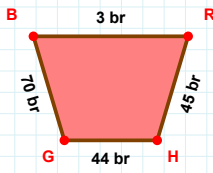


21 br hangi kenara aittir?

Kenar:

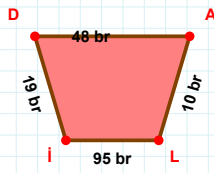
 $|Gİ|$ kaç brdir?

- ☐ 29 br
☐ 30 br
☐ 31 br

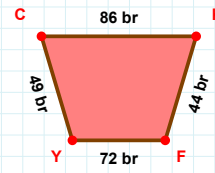


70 br hangi kenara aittir?

- ☐ HG kenarı
☐ GB kenarı
☐ BH kenarı

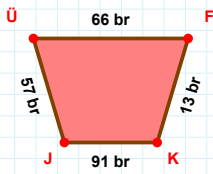
 $|LI|$ kaç brdir?

- ☐ 94 br
☐ 95 br
☐ 96 br



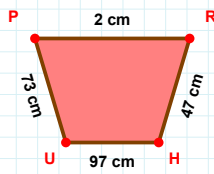
49 br hangi kenara aittir?

- ☐ FY kenarı
☐ CK kenarı
☐ KY kenarı

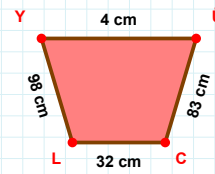


13 br hangi kenara aittir?

Kenar:

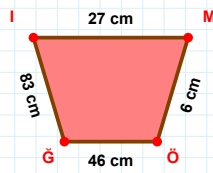
 $|PR|$ kaç cmdir?

- ☐ 1 cm
☐ 2 cm
☐ 3 cm

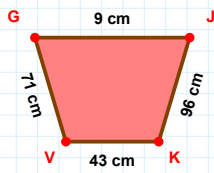


98 cm hangi kenara aittir?

- ☐ CL kenarı
☐ ÜC kenarı
☐ ÜL kenarı

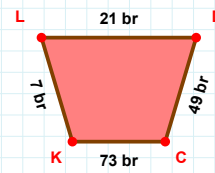
 $|MÖ|$ kaç cmdir?

- ☐ 5 cm
☐ 6 cm
☐ 7 cm



71 cm hangi kenara aittir?

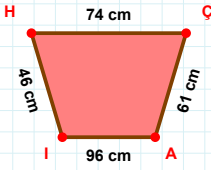
- ☐ VJ kenarı
☐ KV kenarı
☐ JK kenarı



21 br hangi kenara aittir?

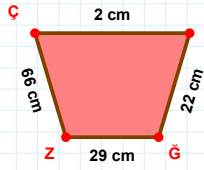
Kenar:

SORU: Aşağıdaki geometrik şekillerle ilgili soruları cevaplayınız.



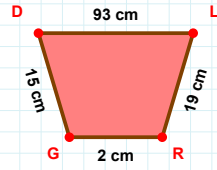
|ÇA| kaç cm'dir?

- ☐ 60 cm
☐ 61 cm
☐ 62 cm



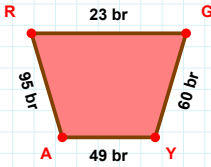
|GZ| kaç cm'dir?

- ☐ 28 cm
☐ 29 cm
☐ 30 cm



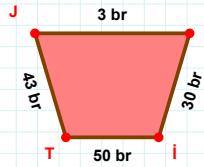
15 cm hangi kenara aittir?

- ☐ LR kenarı
☐ DL kenarı
☐ DR kenarı



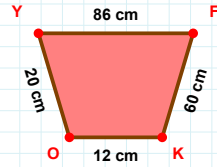
95 br hangi kenara aittir?

- ☐ YA kenarı
☐ AG kenarı
☐ GY kenarı



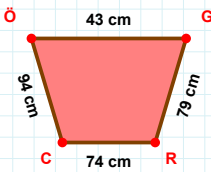
43 br hangi kenara aittir?

- ☐ İT kenarı
☐ TŞ kenarı
☐ JŞ kenarı



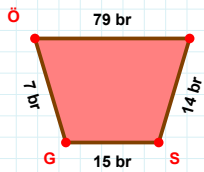
60 cm hangi kenara aittir?

Kenar:



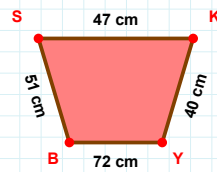
94 cm hangi kenara aittir?

- ☐ ÖG kenarı
☐ ÖR kenarı
☐ GR kenarı



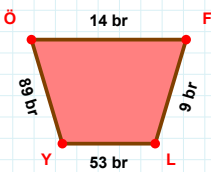
7 br hangi kenara aittir?

- ☐ ÖS kenarı
☐ SG kenarı
☐ GÖ kenarı



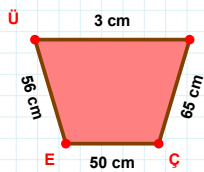
|KY| kaç cm'dir?

- ☐ 39 cm
☐ 40 cm
☐ 41 cm



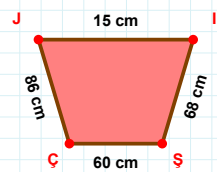
89 br hangi kenara aittir?

Kenar:



|ÇE| + |ÜN| =

Cevap: cm



|ÇJ| + |ŞÇ| =

Cevap: cm

SÜREÇ ODAKLI DEĞERLENDİRME ÖLÇEĞİ

Doğru Sayısı: / 24

Öğretmen ilgili kutucuğu işaretler.

Geliştirilmeli (0-8)

İyi (9-14)

Çok İyi (15-20)

Mükemmel (21-24)

☐
☐
☐
☐

Hazırlayan:

Bu bölüme sınıfınızın ilgili kazanıma yönelik genel durumuna ilişkin gözlem ve izlenimlerinizi, öğrencilerinizin bu kazanımla ilgili öğrenme eksikliklerini ve bu eksikliklerin giderilmesi amacıyla yaptığınız/yapmayı planladığınız faaliyetleri not edebilirsiniz.

No	Adı - Soyadı	Toplam Puan	Değerlendirme
1			
2			
3			
4			
5			
6			
7			
8			
9			
10			
11			
12			
13			
14			
15			
16			
17			
18			
19			
20			
21			
22			
23			
24			
25			
26			
27			
28			
29			
30			
31			
32			
33			
34			
35			

Hazırlayan: