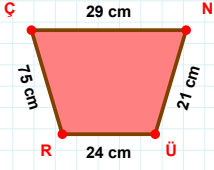
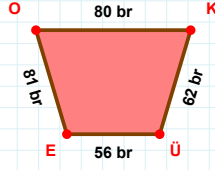


SORU: Aşağıdaki geometrik şekillerle ilgili soruları cevaplayınız.

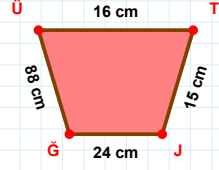
29 cm hangi kenara aittir?

Kenar:

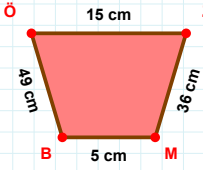


80 br hangi kenara aittir?

Kenar:

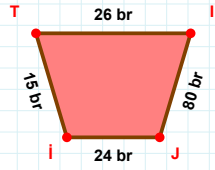
 $|ĞÜ| + |JĞ| = \dots$

Cevap: cm

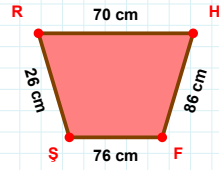


49 cm hangi kenara aittir?

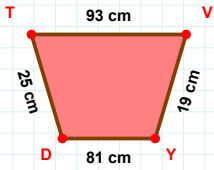
- ☐ BÖ kenarı
☐ ZB kenarı
☐ ZM kenarı

 $|TI| + |IJ| = \dots$

Cevap: br

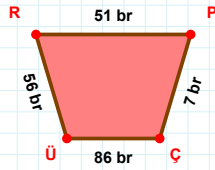
 $|RH| + |FŞ| = \dots$

Cevap: cm



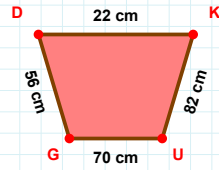
25 cm hangi kenara aittir?

- ☐ DV kenarı
☐ DT kenarı
☐ YD kenarı



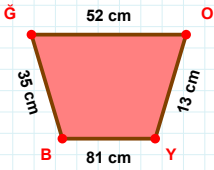
56 br hangi kenara aittir?

Kenar:

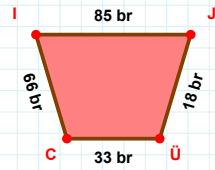


70 cm hangi kenara aittir?

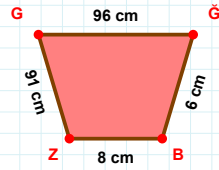
Kenar:

 $|ĞO| + |OY| = \dots$

Cevap: cm

 $|CI|$ kaç brdir?

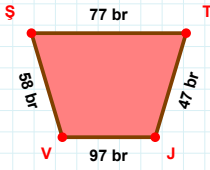
- ☐ 65 br
☐ 66 br
☐ 67 br



91 cm hangi kenara aittir?

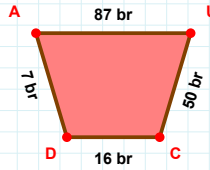
- ☐ ĞZ kenarı
☐ ĞĞ kenarı
☐ ZG kenarı

SORU: Aşağıdaki geometrik şekillerle ilgili soruları cevaplayınız.



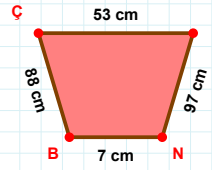
$|ST| + |TV| = \dots$

Cevap: br



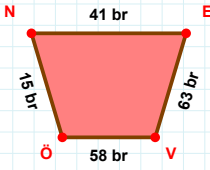
7 br hangi kenara aittir?

- ☐ UC kenarı
☐ AC kenarı
☐ DA kenarı



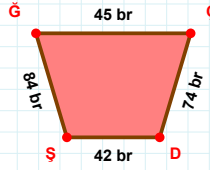
$|IN| + |CI| = \dots$

Cevap: cm



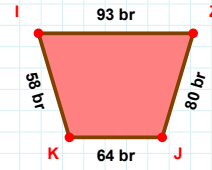
$|EV| + |NE| = \dots$

Cevap: br



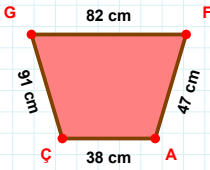
84 br hangi kenara aittir?

- ☐ ÇŞ kenarı
☐ ÇD kenarı
☐ DŞ kenarı



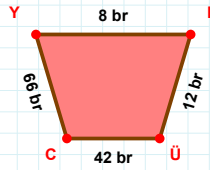
|ZJ| kaç brdir?

- ☐ 79 br
☐ 80 br
☐ 81 br



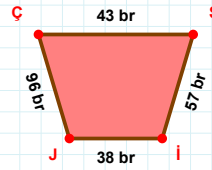
|GF| kaç cm'dir?

- ☐ 81 cm
☐ 82 cm
☐ 83 cm



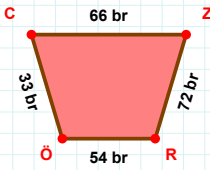
|YF| kaç brdir?

- ☐ 7 br
☐ 8 br
☐ 9 br



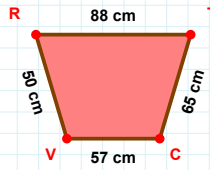
|JÇ| kaç brdir?

- ☐ 95 br
☐ 96 br
☐ 97 br



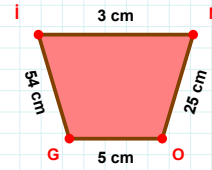
|RÖ| kaç brdir?

- ☐ 53 br
☐ 54 br
☐ 55 br



88 cm hangi kenara aittir?

Kenar:



$|NO| + |GI| = \dots$

Cevap: cm

SÜREÇ ODAKLI DEĞERLENDİRME ÖLÇEĞİ

Doğru Sayısı: / 24

Öğretmen ilgili kutucuğu işaretler.

Geliştirilmeli (0-8)

İyi (9-14)

Çok İyi (15-20)

Mükemmel (21-24)

☐
☐
☐
☐

Hazırlayan:

Bu bölüme sınıfınızın ilgili kazanıma yönelik genel durumuna ilişkin gözlem ve izlenimlerinizi, öğrencilerinizin bu kazanımla ilgili öğrenme eksikliklerini ve bu eksikliklerin giderilmesi amacıyla yaptığınız/yapmayı planladığınız faaliyetleri not edebilirsiniz.

| No | Adı - Soyadı | Toplam Puan | Değerlendirme |
|----|--------------|-------------|---------------|
| 1 | | | |
| 2 | | | |
| 3 | | | |
| 4 | | | |
| 5 | | | |
| 6 | | | |
| 7 | | | |
| 8 | | | |
| 9 | | | |
| 10 | | | |
| 11 | | | |
| 12 | | | |
| 13 | | | |
| 14 | | | |
| 15 | | | |
| 16 | | | |
| 17 | | | |
| 18 | | | |
| 19 | | | |
| 20 | | | |
| 21 | | | |
| 22 | | | |
| 23 | | | |
| 24 | | | |
| 25 | | | |
| 26 | | | |
| 27 | | | |
| 28 | | | |
| 29 | | | |
| 30 | | | |
| 31 | | | |
| 32 | | | |
| 33 | | | |
| 34 | | | |
| 35 | | | |

Hazırlayan: