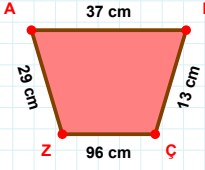
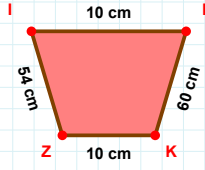


SORU: Aşağıdaki geometrik şekillerle ilgili soruları cevaplayınız.

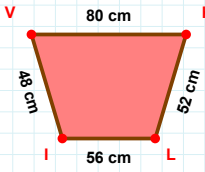
37 cm hangi kenara aittir?

Kenar:



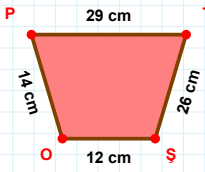
|PK| kaç cm'dir?

- ☐ 59 cm
☐ 60 cm
☐ 61 cm



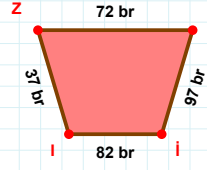
48 cm hangi kenara aittir?

- ☐ VK kenarı
☐ LI kenarı
☐ KI kenarı



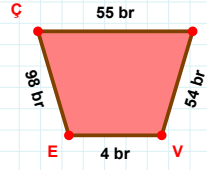
14 cm hangi kenara aittir?

Kenar:



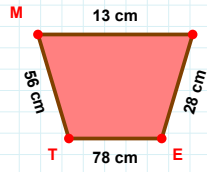
|IZ| + |İI| =

Cevap: br



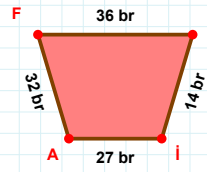
|EÇ| + |NV| =

Cevap: br



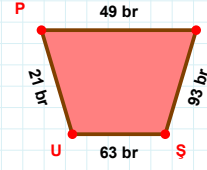
78 cm hangi kenara aittir?

Kenar:



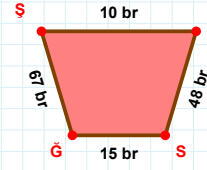
|İA| + |Vİ| =

Cevap: br



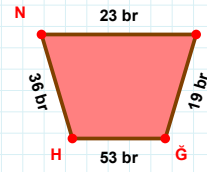
93 br hangi kenara aittir?

Kenar:



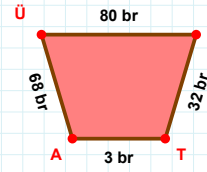
|ŞĞ| kaç br'dir?

- ☐ 14 br
☐ 15 br
☐ 16 br



|ĞH| + |LĞ| =

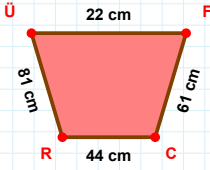
Cevap: br



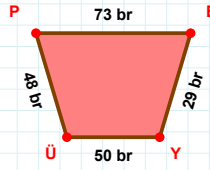
80 br hangi kenara aittir?

Kenar:

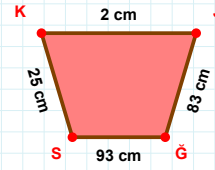
SORU: Aşağıdaki geometrik şekillerle ilgili soruları cevaplayınız.

 $|RÜ| + |ÜF| = \dots$

Cevap: cm

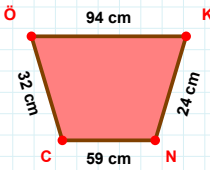
 $|YÜ|$ kaç brdir?

- ☐ 49 br
☐ 50 br
☐ 51 br

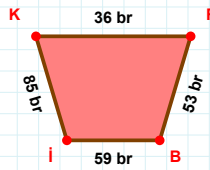


25 cm hangi kenara aittir?

- ☐ ŞK kenarı
☐ SK kenarı
☐ JŞ kenarı

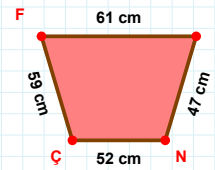
 $|ÖK|$ kaç cmdir?

- ☐ 93 cm
☐ 94 cm
☐ 95 cm

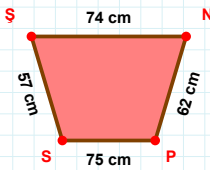


53 br hangi kenara aittir?

Kenar:

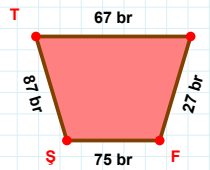
 $|İN|$ kaç cmdir?

- ☐ 46 cm
☐ 47 cm
☐ 48 cm

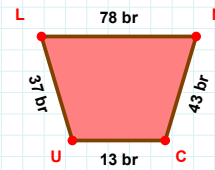


75 cm hangi kenara aittir?

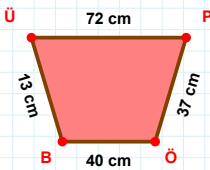
Kenar:

 $|ŞT| + |İF| = \dots$

Cevap: br

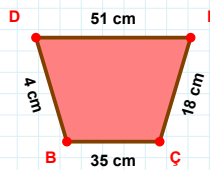
 $|LN| + |UL| = \dots$

Cevap: br



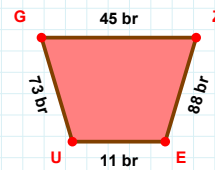
13 cm hangi kenara aittir?

- ☐ BÜ kenarı
☐ ÖÜ kenarı
☐ ÖB kenarı



51 cm hangi kenara aittir?

Kenar:

 $|UG|$ kaç brdir?

- ☐ 72 br
☐ 73 br
☐ 74 br

SÜREÇ ODAKLI DEĞERLENDİRME ÖLÇEĞİ

Doğru Sayısı: / 24

Öğretmen ilgili kutucuğu işaretler.

Geliştirilmeli (0-8)

İyi (9-14)

Çok İyi (15-20)

Mükemmel (21-24)

☐☐☐☐

Hazırlayan:

Bu bölüme sınıfınızın ilgili kazanıma yönelik genel durumuna ilişkin gözlem ve izlenimlerinizi, öğrencilerinizin bu kazanımla ilgili öğrenme eksikliklerini ve bu eksikliklerin giderilmesi amacıyla yaptığınız/yapmayı planladığınız faaliyetleri not edebilirsiniz.

No	Adı - Soyadı	Toplam Puan	Değerlendirme
1			
2			
3			
4			
5			
6			
7			
8			
9			
10			
11			
12			
13			
14			
15			
16			
17			
18			
19			
20			
21			
22			
23			
24			
25			
26			
27			
28			
29			
30			
31			
32			
33			
34			
35			

Hazırlayan: