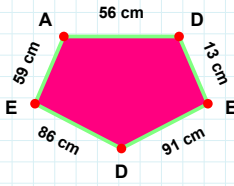
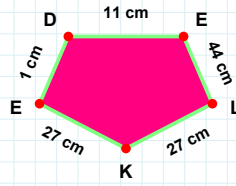


SORU: Aşağıdaki şekillerde istenen kenarın kaç birim veya santimetre olduğunu bulunuz.



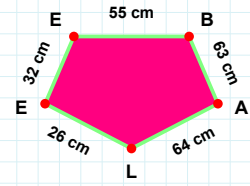
|LK| kaç cmdir?

- ☐ 27 cm
☐ 22 cm
☐ 25 cm



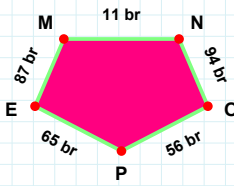
|EB| kaç cmdir?

- ☐ 55 cm
☐ 54 cm
☐ 52 cm



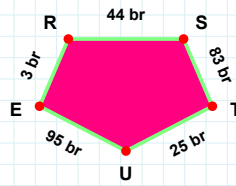
|AD| kaç cmdir?

- ☐ 55 cm
☐ 46 cm
☐ 56 cm



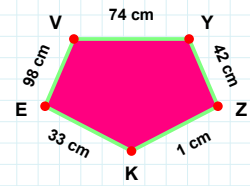
|EM| kaç brdir?

- ☐ 85 br
☐ 87 br
☐ 77 br



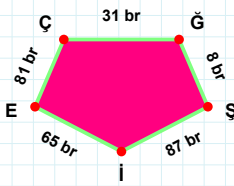
|UE| kaç brdir?

- ☐ 93 br
☐ 94 br
☐ 95 br



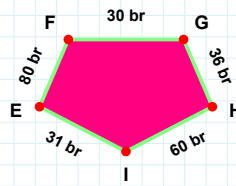
|KE| kaç cmdir?

- ☐ 33 cm
☐ 23 cm
☐ 43 cm



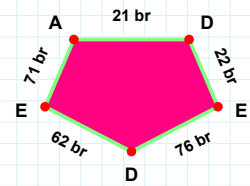
|Şİ| kaç brdir?

- ☐ 84 br
☐ 85 br
☐ 87 br



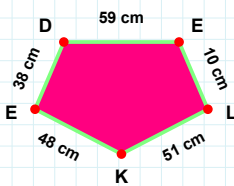
|AD| kaç brdir?

- ☐ 21 br
☐ 31 br
☐ 22 br



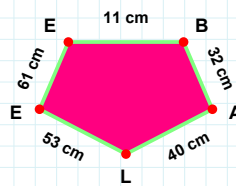
|FG| kaç brdir?

- ☐ 29 br
☐ 30 br
☐ 25 br



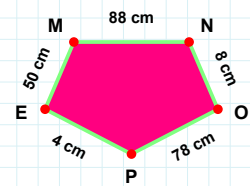
|EE| kaç cmdir?

- ☐ 59 cm
☐ 60 cm
☐ 61 cm



|ED| kaç cmdir?

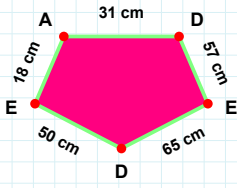
- ☐ 35 cm
☐ 38 cm
☐ 40 cm



|PE| kaç cmdir?

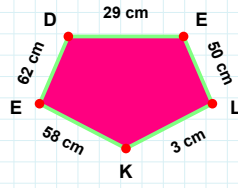
- ☐ 5 cm
☐ 4 cm
☐ 2 cm

SORU: Aşağıdaki şekillerde istenen kenarın kaç birim veya santimetre olduğunu bulunuz.



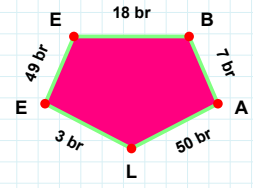
|EL| kaç cmdir?

- ☐ 50 cm
☐ 60 cm
☐ 47 cm



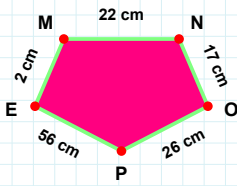
|AD| kaç cmdir?

- ☐ 21 cm
☐ 36 cm
☐ 31 cm



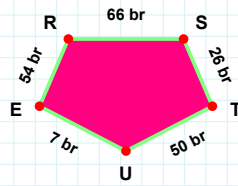
|AL| kaç brdir?

- ☐ 50 br
☐ 51 br
☐ 53 br



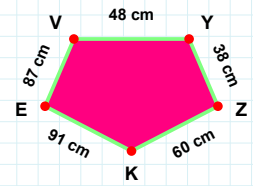
|MN| kaç cmdir?

- ☐ 22 cm
☐ 25 cm
☐ 20 cm



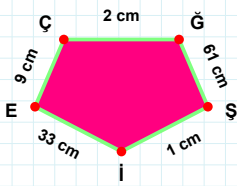
|YZ| kaç cmdir?

- ☐ 39 cm
☐ 48 cm
☐ 38 cm



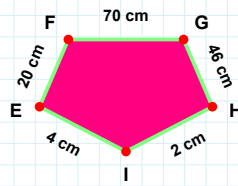
|TU| kaç brdir?

- ☐ 47 br
☐ 50 br
☐ 60 br



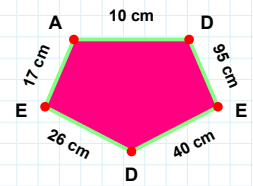
|GH| kaç cmdir?

- ☐ 46 cm
☐ 45 cm
☐ 51 cm



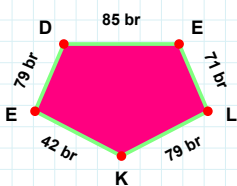
|ÇĞ| kaç cmdir?

- ☐ 4 cm
☐ 12 cm
☐ 2 cm



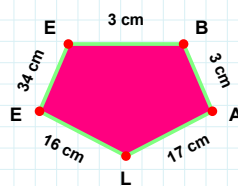
|ED| kaç cmdir?

- ☐ 35 cm
☐ 39 cm
☐ 40 cm



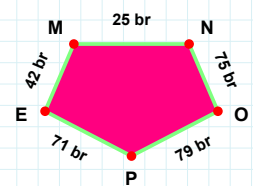
|ED| kaç brdir?

- ☐ 77 br
☐ 79 br
☐ 69 br



|EB| kaç cmdir?

- ☐ 8 cm
☐ 1 cm
☐ 3 cm



|PE| kaç brdir?

- ☐ 71 br
☐ 70 br
☐ 81 br

SÜREÇ ODAKLI DEĞERLENDİRME ÖLÇEĞİ

Doğru Sayısı: / 24

Öğretmen ilgili kutucuğu işaretler.

Geliştirilmeli (0-8)	İyi (9-14)	Çok İyi (15-20)	Mükemmel (21-24)
<input type="checkbox"/>	<input type="checkbox"/>	<input type="checkbox"/>	<input type="checkbox"/>

Hazırlayan:

Bu bölüme sınıfınızın ilgili kazanıma yönelik genel durumuna ilişkin gözlem ve izlenimlerinizi, öğrencilerinizin bu kazanımla ilgili öğrenme eksikliklerini ve bu eksikliklerin giderilmesi amacıyla yaptığınız/yapmayı planladığınız faaliyetleri not edebilirsiniz.

No	Adı - Soyadı	Toplam Puan	Değerlendirme
1			
2			
3			
4			
5			
6			
7			
8			
9			
10			
11			
12			
13			
14			
15			
16			
17			
18			
19			
20			
21			
22			
23			
24			
25			
26			
27			
28			
29			
30			
31			
32			
33			
34			
35			

Hazırlayan: