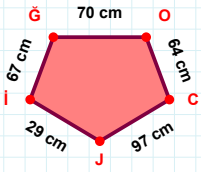
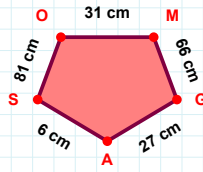


SORU: Aşağıdaki geometrik şekillerle ilgili soruları cevaplayınız.



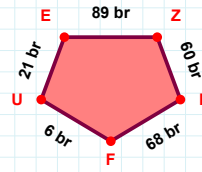
67 cm hangi kenara aittir?

- ☐ JG kenarı
☐ OC kenarı
☐ GO kenarı



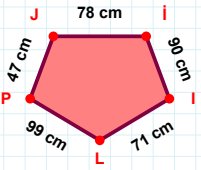
81 cm hangi kenara aittir?

Kenar:



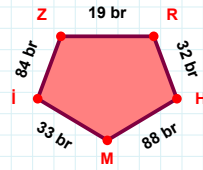
21 br hangi kenara aittir?

- ☐ UE kenarı
☐ PF kenarı
☐ ZU kenarı



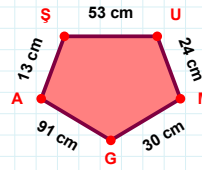
|PJ| kaç cm'dir?

- ☐ 46 cm
☐ 47 cm
☐ 48 cm



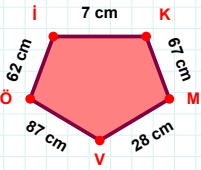
88 br hangi kenara aittir?

Kenar:



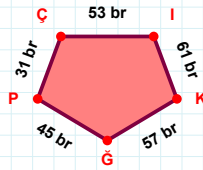
13 cm hangi kenara aittir?

- ☐ MŞ kenarı
☐ UM kenarı
☐ MG kenarı



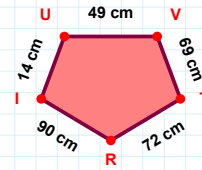
28 cm hangi kenara aittir?

Kenar:



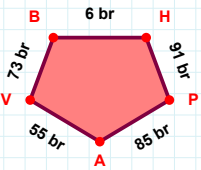
31 br hangi kenara aittir?

- ☐ PI kenarı
☐ KÇ kenarı
☐ IK kenarı



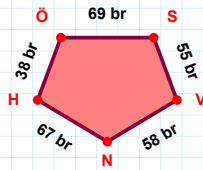
14 cm hangi kenara aittir?

- ☐ VT kenarı
☐ RI kenarı
☐ UR kenarı



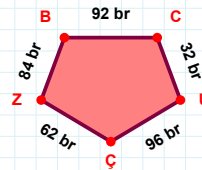
73 br hangi kenara aittir?

- ☐ HP kenarı
☐ VB kenarı
☐ HA kenarı



|NH| + |VN| =

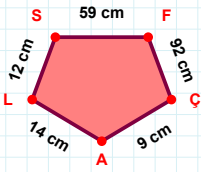
Cevap: br



|CU| kaç br'dir?

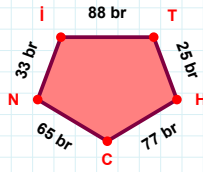
- ☐ 31 br
☐ 32 br
☐ 33 br

SORU: Aşağıdaki geometrik şekillerle ilgili soruları cevaplayınız.



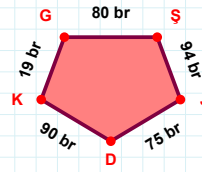
12 cm hangi kenara aittir?

- ☐ ÇA kenarı
☐ ÇL kenarı
☐ SF kenarı

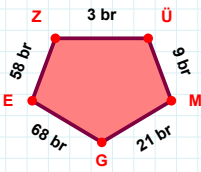


33 br hangi kenara aittir?

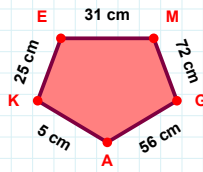
- ☐ İT kenarı
☐ HC kenarı
☐ TN kenarı

 $|ŞJ| + |DK| = \dots$

Cevap: br

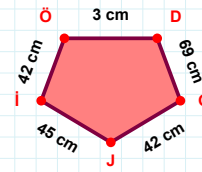
 $|ÜM| + |MG| = \dots$

Cevap: br



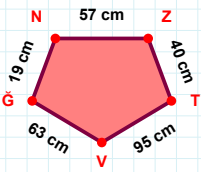
5 cm hangi kenara aittir?

Kenar:

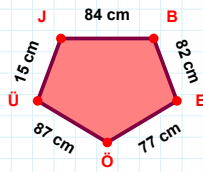


42 cm hangi kenara aittir?

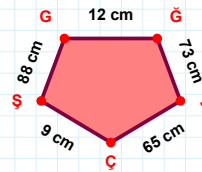
Kenar:

 $|GN|$ kaç cm'dir?

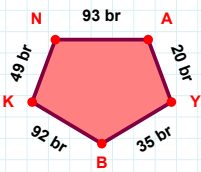
- ☐ 18 cm
☐ 19 cm
☐ 20 cm

 $|JB|$ kaç cm'dir?

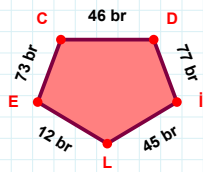
- ☐ 83 cm
☐ 84 cm
☐ 85 cm

 $|JÇ| + |ÇŞ| = \dots$

Cevap: cm

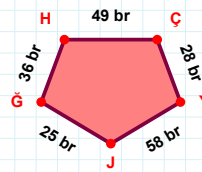
 $|AY|$ kaç br'dir?

- ☐ 19 br
☐ 20 br
☐ 21 br



73 br hangi kenara aittir?

Kenar:

 $|YJ|$ kaç br'dir?

- ☐ 57 br
☐ 58 br
☐ 59 br

SÜREÇ ODAKLI DEĞERLENDİRME ÖLÇEĞİ

Doğru Sayısı: / 24

Öğretmen ilgili kutucuğu işaretler.

Geliştirilmeli (0-8)

İyi (9-14)

Çok İyi (15-20)

Mükemmel (21-24)

☐☐☐☐

Hazırlayan:

Bu bölüme sınıfınızın ilgili kazanıma yönelik genel durumuna ilişkin gözlem ve izlenimlerinizi, öğrencilerinizin bu kazanımla ilgili öğrenme eksikliklerini ve bu eksikliklerin giderilmesi amacıyla yaptığınız/yapmayı planladığınız faaliyetleri not edebilirsiniz.

No	Adı - Soyadı	Toplam Puan	Değerlendirme
1			
2			
3			
4			
5			
6			
7			
8			
9			
10			
11			
12			
13			
14			
15			
16			
17			
18			
19			
20			
21			
22			
23			
24			
25			
26			
27			
28			
29			
30			
31			
32			
33			
34			
35			

Hazırlayan: