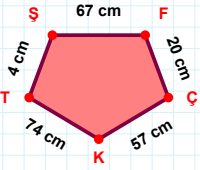
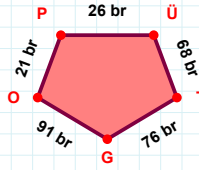


SORU: Aşağıdaki geometrik şekillerle ilgili soruları cevaplayınız.



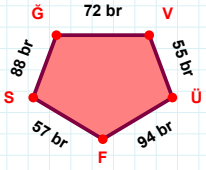
|ÇK| kaç cm'dir?

- ☐ 56 cm  
☐ 57 cm  
☐ 58 cm



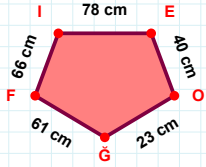
|PÜ| kaç br'dir?

- ☐ 25 br  
☐ 26 br  
☐ 27 br



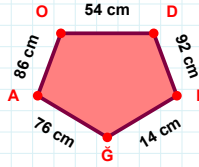
|FS| kaç br'dir?

- ☐ 56 br  
☐ 57 br  
☐ 58 br



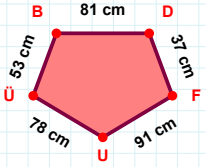
|FI| kaç cm'dir?

- ☐ 65 cm  
☐ 66 cm  
☐ 67 cm



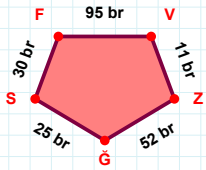
86 cm hangi kenara aittir?

- ☐ ĞA kenarı  
☐ ĞO kenarı  
☐ AO kenarı



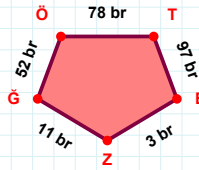
53 cm hangi kenara aittir?

- ☐ DU kenarı  
☐ BD kenarı  
☐ ÜB kenarı



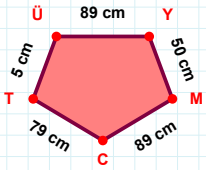
52 br hangi kenara aittir?

Kenar: .....



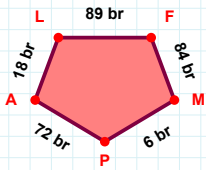
52 br hangi kenara aittir?

- ☐ ZĞ kenarı  
☐ BÖ kenarı  
☐ BZ kenarı



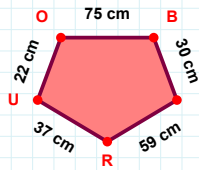
5 cm hangi kenara aittir?

- ☐ YC kenarı  
☐ CT kenarı  
☐ ÜY kenarı



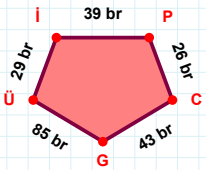
|AL| kaç br'dir?

- ☐ 17 br  
☐ 18 br  
☐ 19 br



22 cm hangi kenara aittir?

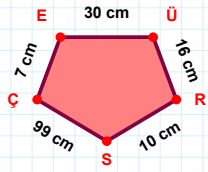
- ☐ UO kenarı  
☐ UB kenarı  
☐ OB kenarı



|GÜ| + |Üİ| = ....

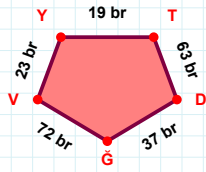
Cevap: ..... br

SORU: Aşağıdaki geometrik şekillerle ilgili soruları cevaplayınız.



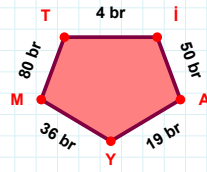
$$|ÜR| + |ÇE| = \dots$$

Cevap: ..... cm



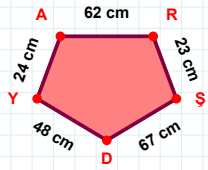
$$|YT| \text{ kaç brdir?}$$

- ☐ 18 br  
☐ 19 br  
☐ 20 br



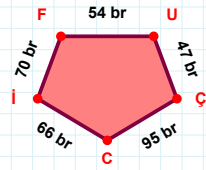
$$36 \text{ br hangi kenara aittir?}$$

Kenar: .....



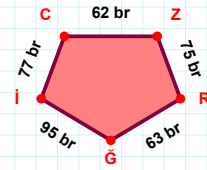
$$67 \text{ cm hangi kenara aittir?}$$

Kenar: .....



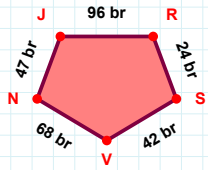
$$|ÇC| + |Cİ| = \dots$$

Cevap: ..... br



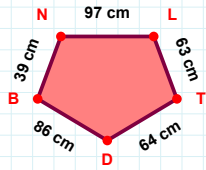
$$77 \text{ br hangi kenara aittir?}$$

- ☐ İC kenarı  
☐ ZR kenarı  
☐ ĞC kenarı



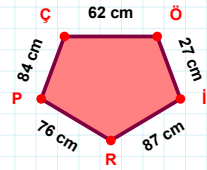
$$42 \text{ br hangi kenara aittir?}$$

Kenar: .....



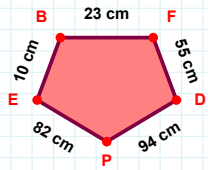
$$|BN| + |LT| = \dots$$

Cevap: ..... cm



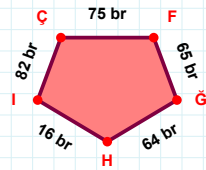
$$27 \text{ cm hangi kenara aittir?}$$

Kenar: .....



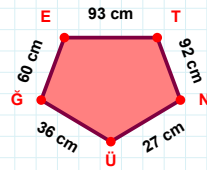
$$|BF| + |DP| = \dots$$

Cevap: ..... cm



$$82 \text{ br hangi kenara aittir?}$$

- ☐ ÇF kenarı  
☐ HI kenarı  
☐ ĞÇ kenarı



$$92 \text{ cm hangi kenara aittir?}$$

Kenar: .....

## SÜREÇ ODAKLI DEĞERLENDİRME ÖLÇEĞİ

Doğru Sayısı: ..... / 24

Öğretmen ilgili kutucuğu işaretler.

Geliştirilmeli (0-8)

İyi (9-14)

Çok İyi (15-20)

Mükemmel (21-24)

☐☐☐☐

Hazırlayan: .....

Bu bölüme sınıfınızın ilgili kazanıma yönelik genel durumuna ilişkin gözlem ve izlenimlerinizi, öğrencilerinizin bu kazanımla ilgili öğrenme eksikliklerini ve bu eksikliklerin giderilmesi amacıyla yaptığınız/yapmayı planladığınız faaliyetleri not edebilirsiniz.

No	Adı - Soyadı	Toplam Puan	Değerlendirme
1			
2			
3			
4			
5			
6			
7			
8			
9			
10			
11			
12			
13			
14			
15			
16			
17			
18			
19			
20			
21			
22			
23			
24			
25			
26			
27			
28			
29			
30			
31			
32			
33			
34			
35			

Hazırlayan: .....