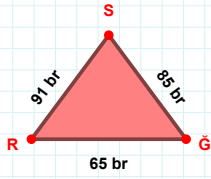
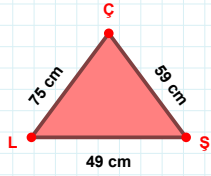


SORU: Aşağıdaki geometrik şekillerle ilgili soruları cevaplayınız.



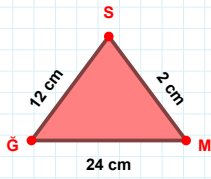
91 br hangi kenara aittir?

Kenar:



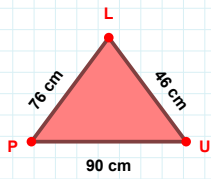
|ŞÇ| kaç cm'dir?

- ☐ 58 cm
☐ 59 cm
☐ 60 cm



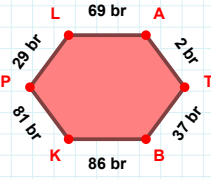
2 cm hangi kenara aittir?

Kenar:



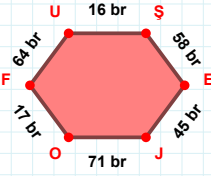
76 cm hangi kenara aittir?

Kenar:



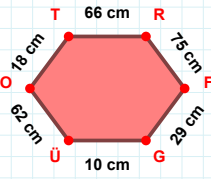
29 br hangi kenara aittir?

- ☐ KA kenarı
☐ KP kenarı
☐ AT kenarı



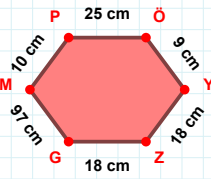
|OF| kaç br'dir?

- ☐ 16 br
☐ 17 br
☐ 18 br



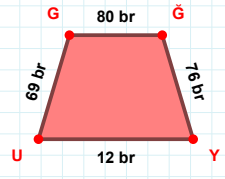
OT kenarı hangi şeklin kenarıdır?

- ☐ Üçgen
☐ Kare
☐ Dikdörtgen



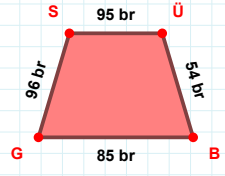
10 cm hangi kenara aittir?

- ☐ MP kenarı
☐ ÖY kenarı
☐ ZÖ kenarı



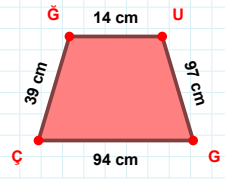
|UG| kaç br'dir?

- ☐ 68 br
☐ 69 br
☐ 70 br



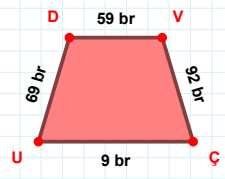
85 br hangi kenara aittir?

Kenar:



|ŞÜ| kaç cm'dir?

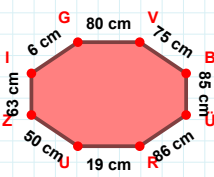
- ☐ 13 cm
☐ 14 cm
☐ 15 cm



VÇ kenarı hangi şeklin kenarıdır?

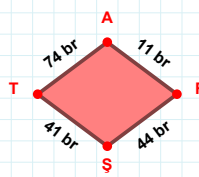
- ☐ Üçgen
☐ Kare
☐ Dikdörtgen

SORU: Aşağıdaki geometrik şekillerle ilgili soruları cevaplayınız.



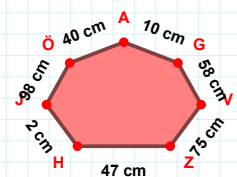
85 cm hangi kenara aittir?

Kenar:

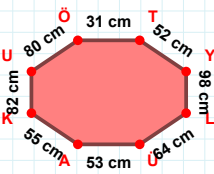


44 br hangi kenara aittir?

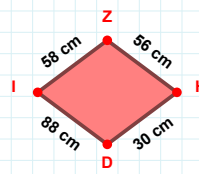
Kenar:

 $|ÖJ| + |AÖ| = \dots$

Cevap: cm

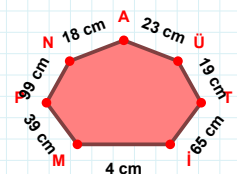
 $|ÖT| + |AK| = \dots$

Cevap: cm

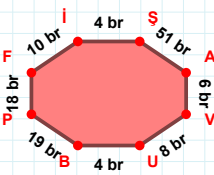


58 cm hangi kenara aittir?

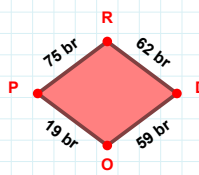
Kenar:

 $|AN| + |MI| = \dots$

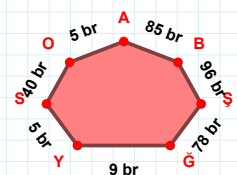
Cevap: cm

 $|BP|$ kaç brdir?

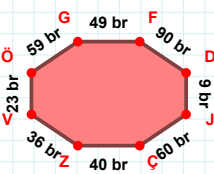
- ☐ 18 br
☐ 19 br
☐ 20 br

 $|RD|$ kaç brdir?

- ☐ 61 br
☐ 62 br
☐ 63 br

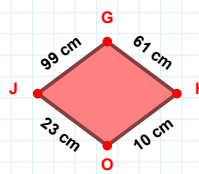
 $|OS| + |BA| = \dots$

Cevap: br

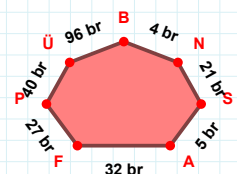


JÇ kenarı hangi şeklin kenarıdır?

- ☐ Üçgen
☐ Kare
☐ Dikdörtgen

 $|OJ|$ kaç cmdir?

- ☐ 22 cm
☐ 23 cm
☐ 24 cm



32 br hangi kenara aittir?

Kenar:

SÜREÇ ODAKLI DEĞERLENDİRME ÖLÇEĞİ

Doğru Sayısı: / 24

Öğretmen ilgili kutucuğu işaretler.

Geliştirilmeli (0-8)

İyi (9-14)

Çok İyi (15-20)

Mükemmel (21-24)

☐☐☐☐

Hazırlayan:

Bu bölüme sınıfınızın ilgili kazanıma yönelik genel durumuna ilişkin gözlem ve izlenimlerinizi, öğrencilerinizin bu kazanımla ilgili öğrenme eksikliklerini ve bu eksikliklerin giderilmesi amacıyla yaptığınız/yapmayı planladığınız faaliyetleri not edebilirsiniz.

No	Adı - Soyadı	Toplam Puan	Değerlendirme
1			
2			
3			
4			
5			
6			
7			
8			
9			
10			
11			
12			
13			
14			
15			
16			
17			
18			
19			
20			
21			
22			
23			
24			
25			
26			
27			
28			
29			
30			
31			
32			
33			
34			
35			

Hazırlayan: