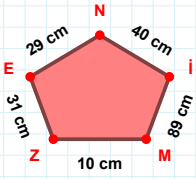
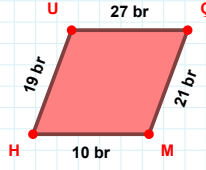


SORU: Aşağıdaki geometrik şekillerle ilgili soruları cevaplayınız.



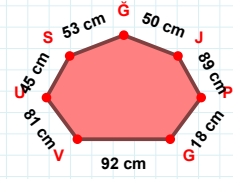
Mİ kenarı hangi şeklin kenarıdır?

- ☐ Üçgen
☐ Kare
☐ Dikdörtgen



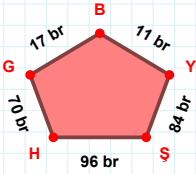
MH kenarı hangi şeklin kenarıdır?

- ☐ Üçgen
☐ Kare
☐ Dikdörtgen

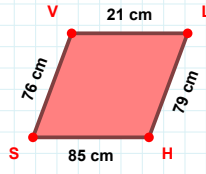


50 cm hangi kenara aittir?

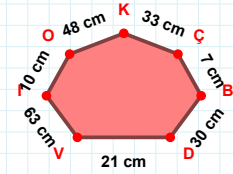
- ☐ ĞS kenarı
☐ JĞ kenarı
☐ UJ kenarı

 $|SY| + |HŞ| = \dots$

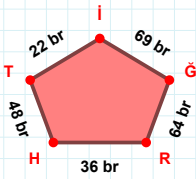
Cevap: br

 $|SV| + |VL| = \dots$

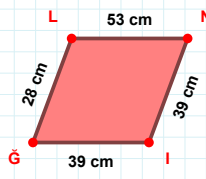
Cevap: cm

 $|ÇK| + |OK| = \dots$

Cevap: cm

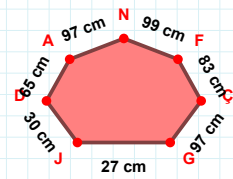
 $|İT|$ kaç brdir?

- ☐ 21 br
☐ 22 br
☐ 23 br

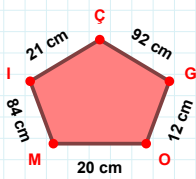


39 cm hangi kenara aittir?

Kenar:

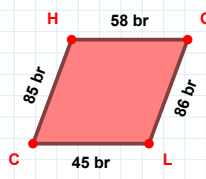
 $|AD|$ kaç cmdir?

- ☐ 64 cm
☐ 65 cm
☐ 66 cm



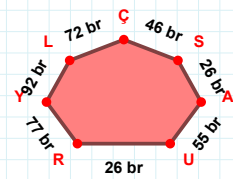
92 cm hangi kenara aittir?

Kenar:



OL kenarı hangi şeklin kenarıdır?

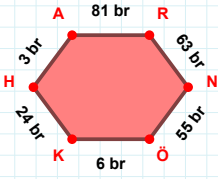
- ☐ Üçgen
☐ Kare
☐ Dikdörtgen



46 br hangi kenara aittir?

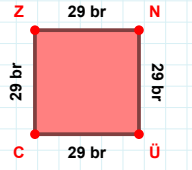
- ☐ LY kenarı
☐ ÇL kenarı
☐ SL kenarı

SORU: Aşağıdaki geometrik şekillerle ilgili soruları cevaplayınız.



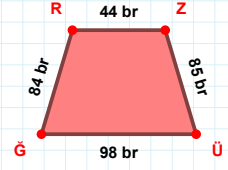
24 br hangi kenara aittir?

Kenar:



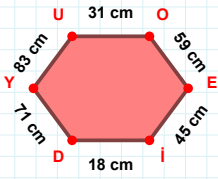
|NÜ| kaç brdir?

- ☐ 28 br
☐ 29 br
☐ 30 br



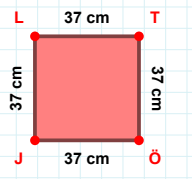
|RZ| kaç brdir?

- ☐ 43 br
☐ 44 br
☐ 45 br



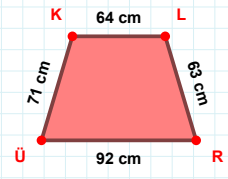
83 cm hangi kenara aittir?

- ☐ İY kenarı
☐ YU kenarı
☐ DY kenarı



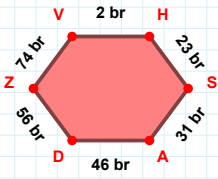
|TÖ| kaç cmdir?

- ☐ 36 cm
☐ 37 cm
☐ 38 cm



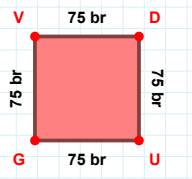
|ÜK| kaç cmdir?

- ☐ 70 cm
☐ 71 cm
☐ 72 cm



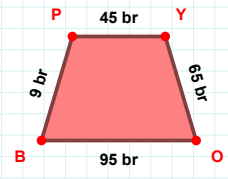
74 br hangi kenara aittir?

Kenar:



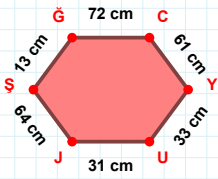
|UG| + |DU| =

Cevap: br



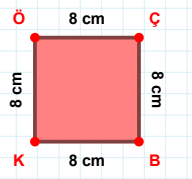
45 br hangi kenara aittir?

Kenar:



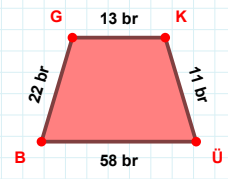
|YU| + |ŞG| =

Cevap: cm



|ÇB| kaç cmdir?

- ☐ 7 cm
☐ 8 cm
☐ 9 cm



22 br hangi kenara aittir?

- ☐ ÜB kenarı
☐ GÜ kenarı
☐ GK kenarı

SÜREÇ ODAKLI DEĞERLENDİRME ÖLÇEĞİ

Doğru Sayısı: / 24

Öğretmen ilgili kutucuğu işaretler.

Geliştirilmeli (0-8)

İyi (9-14)

Çok İyi (15-20)

Mükemmel (21-24)

☐☐☐☐

Hazırlayan:

Bu bölüme sınıfınızın ilgili kazanıma yönelik genel durumuna ilişkin gözlem ve izlenimlerinizi, öğrencilerinizin bu kazanımla ilgili öğrenme eksikliklerini ve bu eksikliklerin giderilmesi amacıyla yaptığınız/yapmayı planladığınız faaliyetleri not edebilirsiniz.

No	Adı - Soyadı	Toplam Puan	Değerlendirme
1			
2			
3			
4			
5			
6			
7			
8			
9			
10			
11			
12			
13			
14			
15			
16			
17			
18			
19			
20			
21			
22			
23			
24			
25			
26			
27			
28			
29			
30			
31			
32			
33			
34			
35			

Hazırlayan: