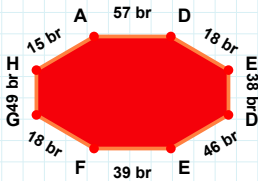
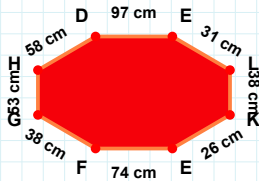


**SORU:** Aşağıdaki şekillerde istenen kenarın kaç birim veya santimetre olduğunu bulunuz.



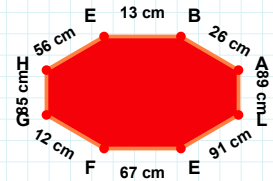
|LE| kaç cmdir?

- ☐ 86 cm  
☐ 90 cm  
☐ 91 cm



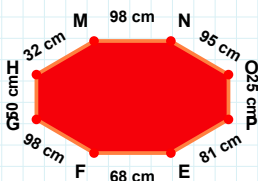
|FG| kaç brdir?

- ☐ 18 br  
☐ 20 br  
☐ 17 br



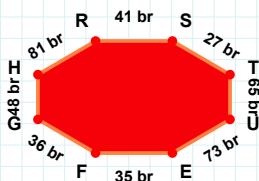
|DE| kaç cmdir?

- ☐ 99 cm  
☐ 87 cm  
☐ 97 cm



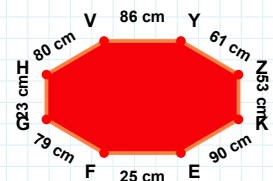
|ZK| kaç cmdir?

- ☐ 55 cm  
☐ 53 cm  
☐ 58 cm



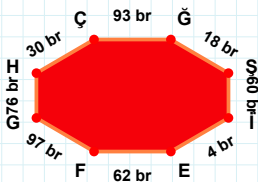
|GH| kaç cmdir?

- ☐ 51 cm  
☐ 49 cm  
☐ 50 cm



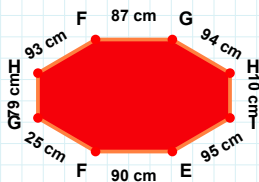
|EF| kaç brdir?

- ☐ 34 br  
☐ 35 br  
☐ 38 br



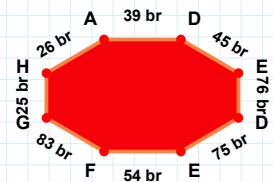
|İE| kaç brdir?

- ☐ 5 br  
☐ 2 br  
☐ 4 br



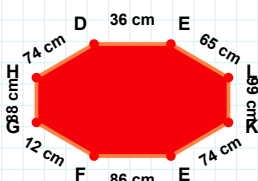
|GH| kaç brdir?

- ☐ 25 br  
☐ 24 br  
☐ 23 br



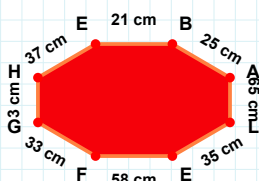
|FG| kaç cmdir?

- ☐ 87 cm  
☐ 82 cm  
☐ 92 cm



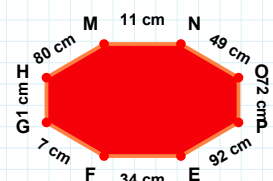
|MN| kaç cmdir?

- ☐ 10 cm  
☐ 16 cm  
☐ 11 cm



|LE| kaç cmdir?

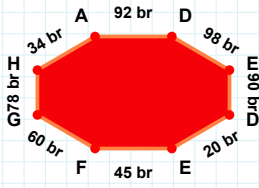
- ☐ 38 cm  
☐ 34 cm  
☐ 35 cm



|LK| kaç cmdir?

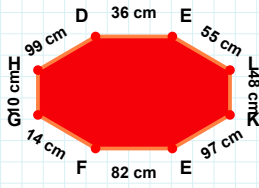
- ☐ 96 cm  
☐ 94 cm  
☐ 99 cm

**SORU:** Aşağıdaki şekillerde istenen kenarın kaç birim veya santimetre olduğunu bulunuz.



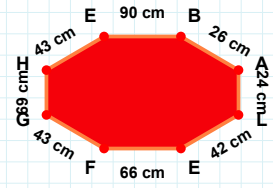
|EF| kaç brdir?

- ☐ 45 br  
☐ 47 br  
☐ 44 br



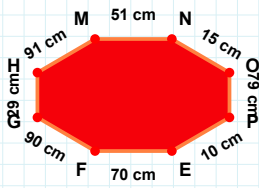
|HE| kaç cmdir?

- ☐ 53 cm  
☐ 43 cm  
☐ 48 cm



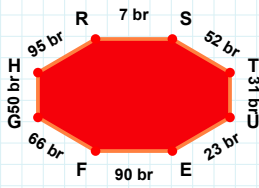
|EL| kaç cmdir?

- ☐ 60 cm  
☐ 55 cm  
☐ 52 cm



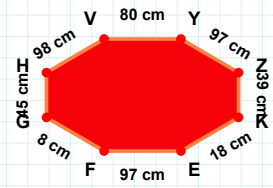
|EF| kaç cmdir?

- ☐ 94 cm  
☐ 98 cm  
☐ 97 cm



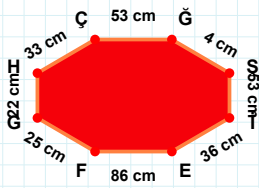
|EF| kaç cmdir?

- ☐ 70 cm  
☐ 73 cm  
☐ 68 cm



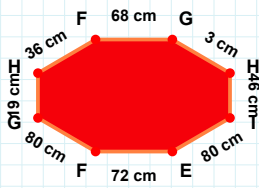
|FG| kaç brdir?

- ☐ 61 br  
☐ 69 br  
☐ 66 br



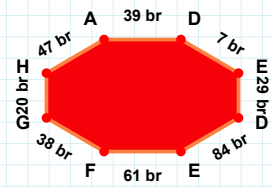
|HA| kaç brdir?

- ☐ 50 br  
☐ 47 br  
☐ 49 br



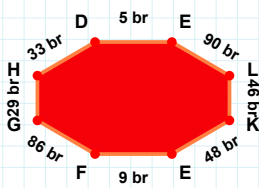
|GH| kaç cmdir?

- ☐ 29 cm  
☐ 22 cm  
☐ 19 cm



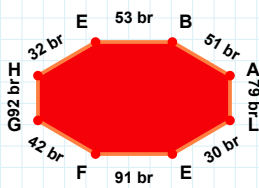
|HC| kaç cmdir?

- ☐ 30 cm  
☐ 33 cm  
☐ 34 cm



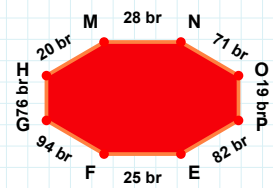
|OP| kaç brdir?

- ☐ 17 br  
☐ 9 br  
☐ 19 br



|GH| kaç brdir?

- ☐ 95 br  
☐ 82 br  
☐ 92 br



|HD| kaç brdir?

- ☐ 35 br  
☐ 33 br  
☐ 43 br

### SÜREÇ ODAKLI DEĞERLENDİRME ÖLÇEĞİ

Doğru Sayısı: ..... / 24

Öğretmen ilgili kutucuğu işaretler.

Geliştirilmeli (0-8)

İyi (9-14)

Çok İyi (15-20)

Mükemmel (21-24)

☐
☐
☐
☐

Hazırlayan: .....

Bu bölüme sınıfınızın ilgili kazanıma yönelik genel durumuna ilişkin gözlem ve izlenimlerinizi, öğrencilerinizin bu kazanımla ilgili öğrenme eksikliklerini ve bu eksikliklerin giderilmesi amacıyla yaptığınız/yapmayı planladığınız faaliyetleri not edebilirsiniz.

No	Adı - Soyadı	Toplam Puan	Değerlendirme
1			
2			
3			
4			
5			
6			
7			
8			
9			
10			
11			
12			
13			
14			
15			
16			
17			
18			
19			
20			
21			
22			
23			
24			
25			
26			
27			
28			
29			
30			
31			
32			
33			
34			
35			

Hazırlayan: .....