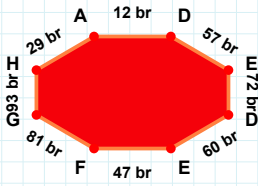
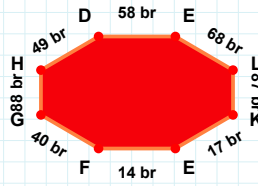


SORU: Aşağıdaki şekillerde istenen kenarın kaç birim veya santimetre olduğunu bulunuz.



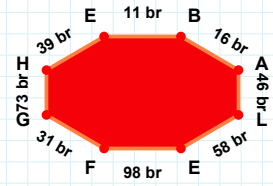
|DE| kaç brdir?

- ☐ 61 br
☐ 60 br
☐ 59 br



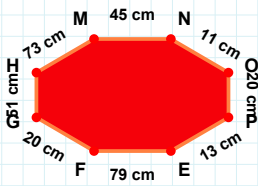
|GH| kaç brdir?

- ☐ 88 br
☐ 83 br
☐ 85 br



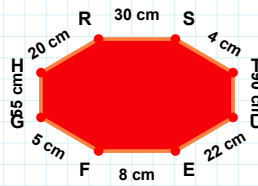
|EB| kaç brdir?

- ☐ 21 br
☐ 11 br
☐ 16 br



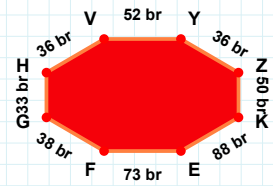
|GH| kaç cmdir?

- ☐ 53 cm
☐ 56 cm
☐ 55 cm



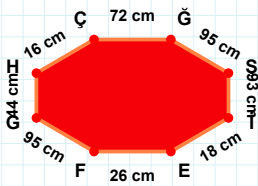
|EF| kaç cmdir?

- ☐ 69 cm
☐ 78 cm
☐ 79 cm



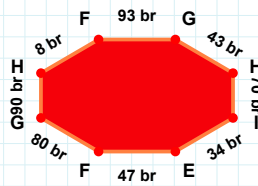
|ZK| kaç brdir?

- ☐ 55 br
☐ 53 br
☐ 50 br



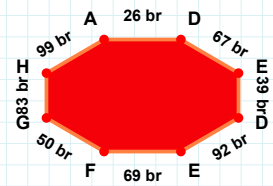
|GH| kaç cmdir?

- ☐ 47 cm
☐ 44 cm
☐ 41 cm



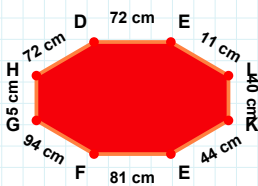
|HA| kaç brdir?

- ☐ 89 br
☐ 99 br
☐ 96 br



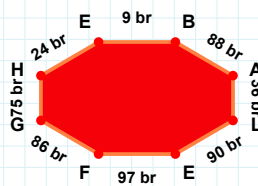
|IE| kaç brdir?

- ☐ 34 br
☐ 44 br
☐ 31 br



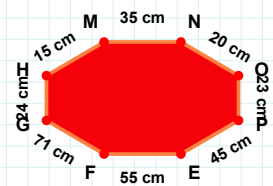
|FG| kaç brdir?

- ☐ 86 br
☐ 83 br
☐ 96 br



|MN| kaç cmdir?

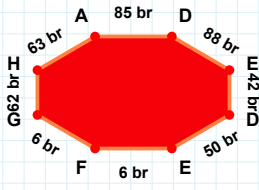
- ☐ 34 cm
☐ 38 cm
☐ 35 cm



|KE| kaç cmdir?

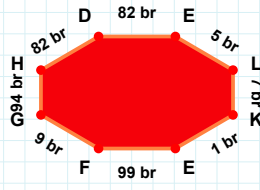
- ☐ 43 cm
☐ 44 cm
☐ 49 cm

SORU: Aşağıdaki şekillerde istenen kenarın kaç birim veya santimetre olduğunu bulunuz.



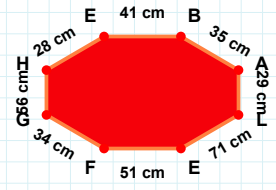
|EB| kaç cmdir?

- ☐ 43 cm
☐ 42 cm
☐ 41 cm



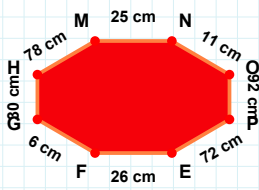
|GH| kaç brdir?

- ☐ 94 br
☐ 97 br
☐ 99 br



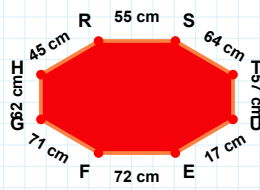
|DE| kaç brdir?

- ☐ 48 br
☐ 50 br
☐ 53 br



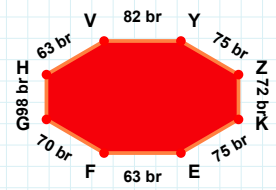
|UE| kaç cmdir?

- ☐ 20 cm
☐ 17 cm
☐ 16 cm



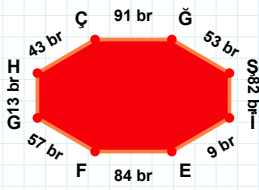
|NO| kaç cmdir?

- ☐ 8 cm
☐ 11 cm
☐ 16 cm



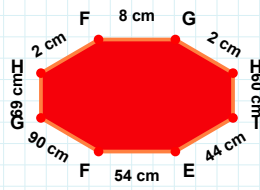
|EF| kaç brdir?

- ☐ 63 br
☐ 58 br
☐ 68 br



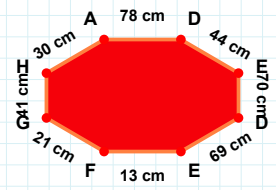
|GH| kaç cmdir?

- ☐ 40 cm
☐ 42 cm
☐ 41 cm



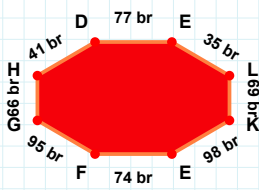
|FG| kaç cmdir?

- ☐ 3 cm
☐ 9 cm
☐ 8 cm



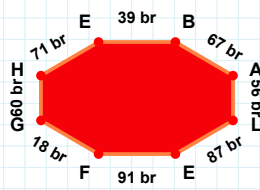
|IE| kaç brdir?

- ☐ 4 br
☐ 10 br
☐ 9 br



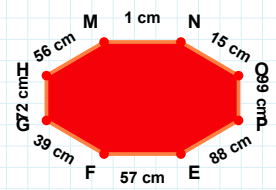
|MN| kaç cmdir?

- ☐ 3 cm
☐ 1 cm
☐ 2 cm



|GE| kaç brdir?

- ☐ 71 br
☐ 66 br
☐ 63 br



|LE| kaç brdir?

- ☐ 90 br
☐ 82 br
☐ 87 br

SÜREÇ ODAKLI DEĞERLENDİRME ÖLÇEĞİ

Doğru Sayısı: / 24

Öğretmen ilgili kutucuğu işaretler.

Geliştirilmeli (0-8)

İyi (9-14)

Çok İyi (15-20)

Mükemmel (21-24)

☐
☐
☐
☐

Hazırlayan:

Bu bölüme sınıfınızın ilgili kazanıma yönelik genel durumuna ilişkin gözlem ve izlenimlerinizi, öğrencilerinizin bu kazanımla ilgili öğrenme eksikliklerini ve bu eksikliklerin giderilmesi amacıyla yaptığınız/yapmayı planladığınız faaliyetleri not edebilirsiniz.

No	Adı - Soyadı	Toplam Puan	Değerlendirme
1			
2			
3			
4			
5			
6			
7			
8			
9			
10			
11			
12			
13			
14			
15			
16			
17			
18			
19			
20			
21			
22			
23			
24			
25			
26			
27			
28			
29			
30			
31			
32			
33			
34			
35			

Hazırlayan: