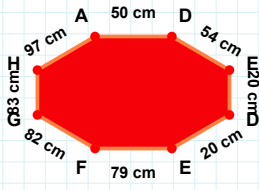
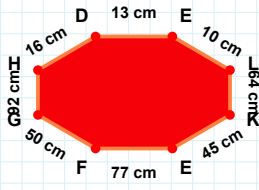


**SORU:** Aşağıdaki şekillerde istenen kenarın kaç birim veya santimetre olduğunu bulunuz.



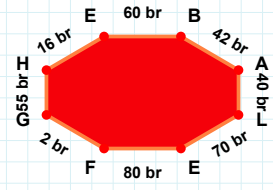
|FG| kaç cmdir?

- ☐ 82 cm  
☐ 92 cm  
☐ 83 cm



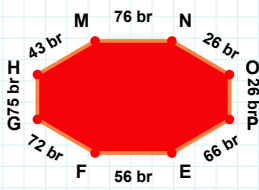
|BA| kaç brdir?

- ☐ 42 br  
☐ 32 br  
☐ 37 br



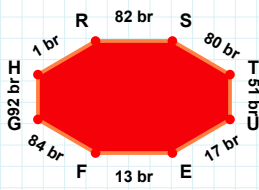
|HD| kaç cmdir?

- ☐ 16 cm  
☐ 14 cm  
☐ 17 cm



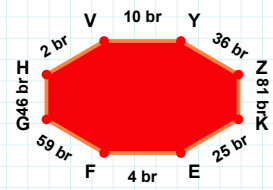
|MN| kaç brdir?

- ☐ 71 br  
☐ 74 br  
☐ 76 br



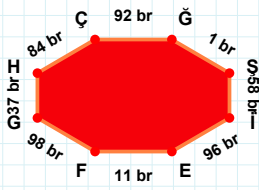
|YZ| kaç brdir?

- ☐ 36 br  
☐ 37 br  
☐ 35 br



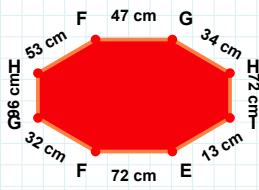
|GH| kaç brdir?

- ☐ 87 br  
☐ 92 br  
☐ 95 br



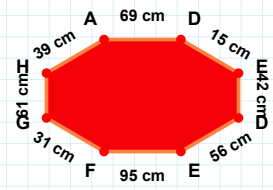
|FG| kaç cmdir?

- ☐ 36 cm  
☐ 30 cm  
☐ 31 cm



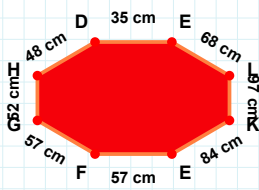
|GH| kaç cmdir?

- ☐ 96 cm  
☐ 99 cm  
☐ 93 cm



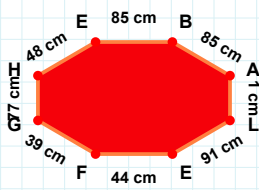
|ĜŞ| kaç brdir?

- ☐ 1 br  
☐ 3 br  
☐ 11 br



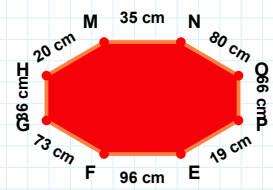
|BA| kaç cmdir?

- ☐ 85 cm  
☐ 80 cm  
☐ 83 cm



|DE| kaç cmdir?

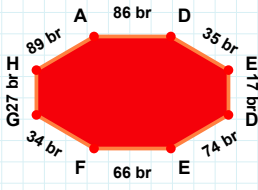
- ☐ 35 cm  
☐ 36 cm  
☐ 30 cm



|HM| kaç cmdir?

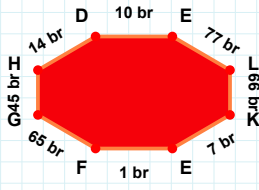
- ☐ 25 cm  
☐ 20 cm  
☐ 19 cm

**SORU:** Aşağıdaki şekillerde istenen kenarın kaç birim veya santimetre olduğunu bulunuz.



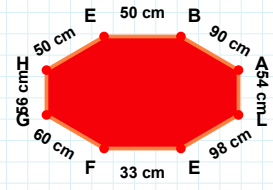
|EB| kaç cm'dir?

- ☐ 53 cm  
☐ 60 cm  
☐ 50 cm



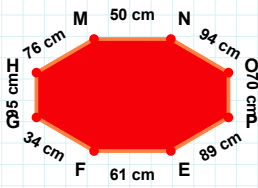
|EF| kaç br'dir?

- ☐ 56 br  
☐ 66 br  
☐ 65 br



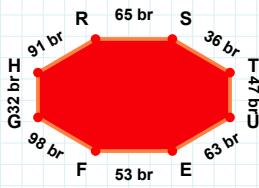
|LK| kaç br'dir?

- ☐ 68 br  
☐ 67 br  
☐ 66 br



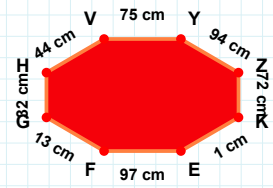
|FG| kaç cm'dir?

- ☐ 16 cm  
☐ 10 cm  
☐ 13 cm



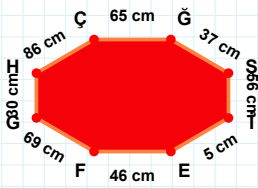
|EF| kaç cm'dir?

- ☐ 59 cm  
☐ 64 cm  
☐ 61 cm



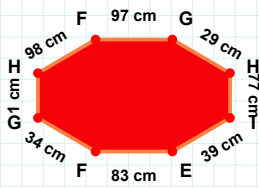
|EF| kaç br'dir?

- ☐ 55 br  
☐ 53 br  
☐ 43 br



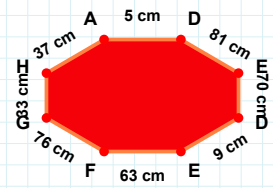
|GH| kaç cm'dir?

- ☐ 6 cm  
☐ 1 cm  
☐ 4 cm



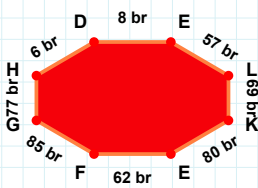
|FG| kaç cm'dir?

- ☐ 59 cm  
☐ 69 cm  
☐ 79 cm



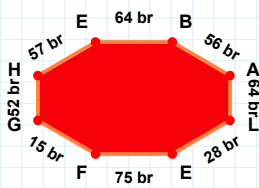
|DE| kaç cm'dir?

- ☐ 14 cm  
☐ 9 cm  
☐ 12 cm



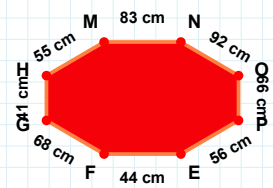
|EF| kaç br'dir?

- ☐ 80 br  
☐ 75 br  
☐ 73 br



|KE| kaç br'dir?

- ☐ 81 br  
☐ 90 br  
☐ 80 br



|PE| kaç cm'dir?

- ☐ 56 cm  
☐ 61 cm  
☐ 57 cm

## SÜREÇ ODAKLI DEĞERLENDİRME ÖLÇEĞİ

Doğru Sayısı: ..... / 24

Öğretmen ilgili kutucuğu işaretler.

Geliştirilmeli (0-8)

İyi (9-14)

Çok İyi (15-20)

Mükemmel (21-24)



Hazırlayan: .....

Bu bölüme sınıfınızın ilgili kazanıma yönelik genel durumuna ilişkin gözlem ve izlenimlerinizi, öğrencilerinizin bu kazanımla ilgili öğrenme eksikliklerini ve bu eksikliklerin giderilmesi amacıyla yaptığınız/yapmayı planladığınız faaliyetleri not edebilirsiniz.

No	Adı - Soyadı	Toplam Puan	Değerlendirme
1			
2			
3			
4			
5			
6			
7			
8			
9			
10			
11			
12			
13			
14			
15			
16			
17			
18			
19			
20			
21			
22			
23			
24			
25			
26			
27			
28			
29			
30			
31			
32			
33			
34			
35			

Hazırlayan: .....