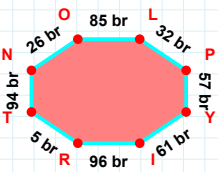
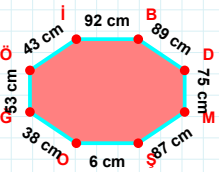


SORU: Aşağıdaki geometrik şekillerle ilgili soruları cevaplayınız.



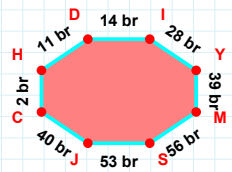
$|PY| + |IR| = \dots$

Cevap: br



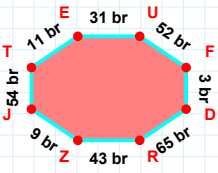
43 cm hangi kenara aittir?

- ☐ BD kenarı
☐ İÖ kenarı
☐ MO kenarı



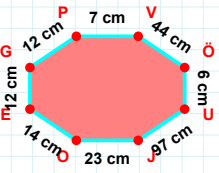
$|CH| + |HD| = \dots$

Cevap: br



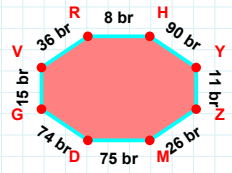
$|TE|$ kaç brdir?

- ☐ 10 br
☐ 11 br
☐ 12 br



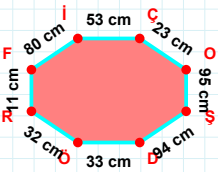
$|ÖÜ| + |JO| = \dots$

Cevap: cm



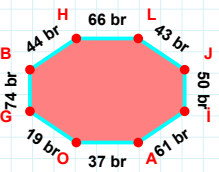
$|ZM| + |VR| = \dots$

Cevap: br



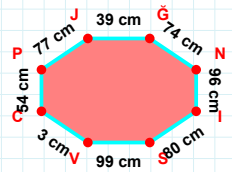
80 cm hangi kenara aittir?

- ☐ FI kenarı
☐ RF kenarı
☐ ÖI kenarı



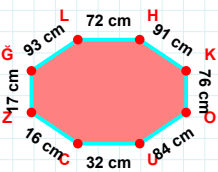
$|OG|$ kaç brdir?

- ☐ 18 br
☐ 19 br
☐ 20 br



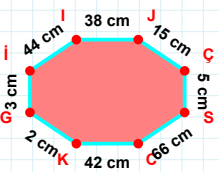
77 cm hangi kenara aittir?

- ☐ VC kenarı
☐ IS kenarı
☐ SP kenarı



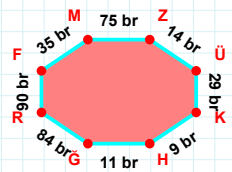
93 cm hangi kenara aittir?

- ☐ KO kenarı
☐ KC kenarı
☐ OU kenarı



44 cm hangi kenara aittir?

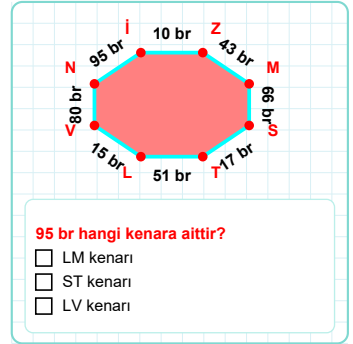
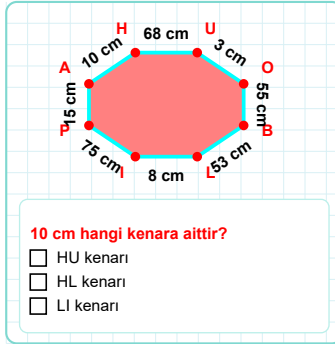
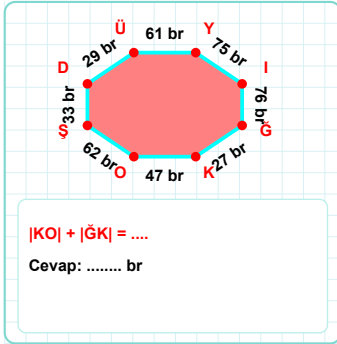
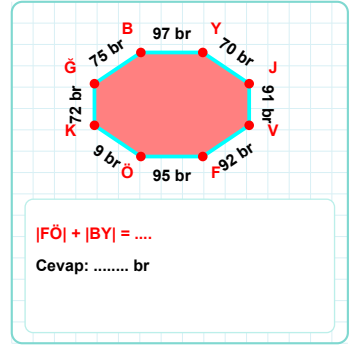
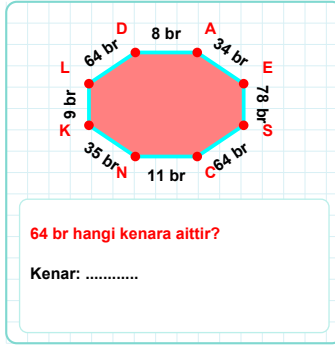
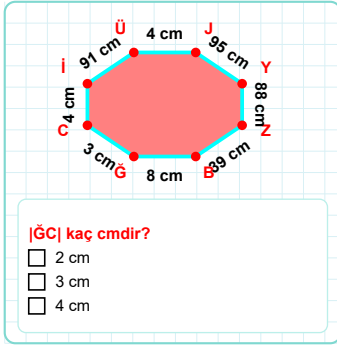
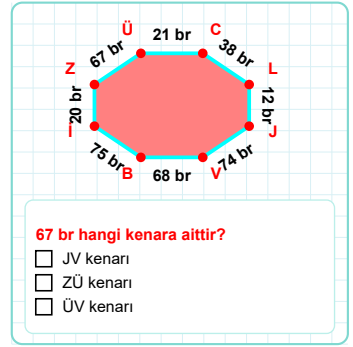
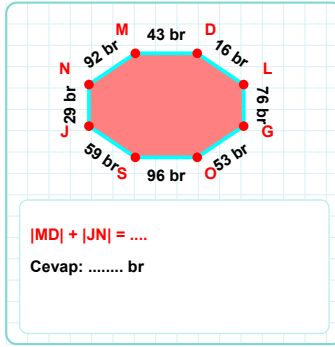
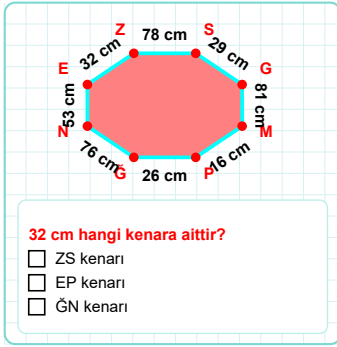
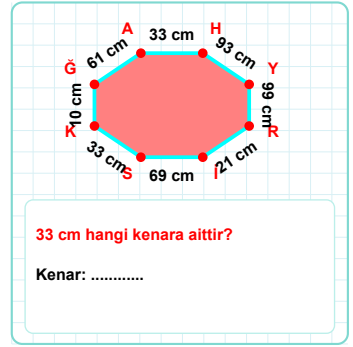
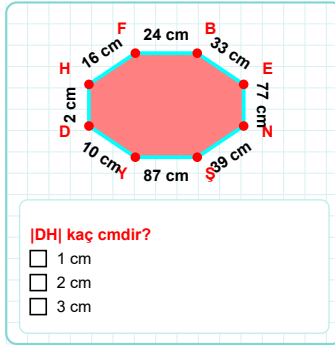
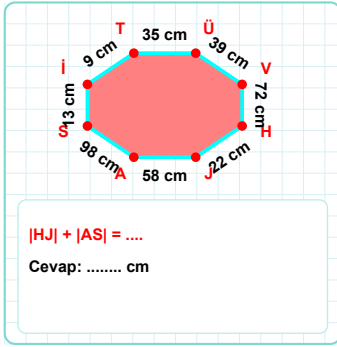
- ☐ SI kenarı
☐ Gİ kenarı
☐ İJ kenarı



$|HG|$ kaç brdir?

- ☐ 10 br
☐ 11 br
☐ 12 br

SORU: Aşağıdaki geometrik şekillerle ilgili soruları cevaplayınız.



SÜREÇ ODAKLI DEĞERLENDİRME ÖLÇEĞİ

Doğru Sayısı: / 24

Öğretmen ilgili kutucuğu işaretler.

Geliştirilmeli (0-8)

İyi (9-14)

Çok İyi (15-20)

Mükemmel (21-24)

☐
☐
☐
☐

Hazırlayan:

Bu bölüme sınıfınızın ilgili kazanıma yönelik genel durumuna ilişkin gözlem ve izlenimlerinizi, öğrencilerinizin bu kazanımla ilgili öğrenme eksikliklerini ve bu eksikliklerin giderilmesi amacıyla yaptığınız/yapmayı planladığınız faaliyetleri not edebilirsiniz.

No	Adı - Soyadı	Toplam Puan	Değerlendirme
1			
2			
3			
4			
5			
6			
7			
8			
9			
10			
11			
12			
13			
14			
15			
16			
17			
18			
19			
20			
21			
22			
23			
24			
25			
26			
27			
28			
29			
30			
31			
32			
33			
34			
35			

Hazırlayan: