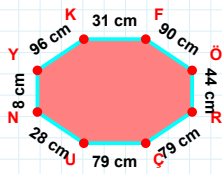
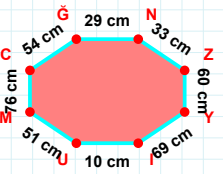


**SORU:** Aşağıdaki geometrik şekillerle ilgili soruları cevaplayınız.



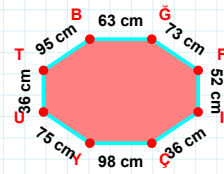
|KF| kaç cm'dir?

- ☐ 30 cm  
☐ 31 cm  
☐ 32 cm



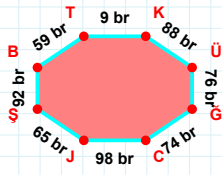
|CG| kaç cm'dir?

- ☐ 53 cm  
☐ 54 cm  
☐ 55 cm



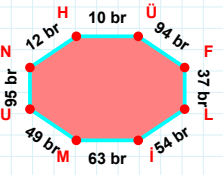
95 cm hangi kenara aittir?

- ☐ IG kenarı  
☐ TB kenarı  
☐ FI kenarı



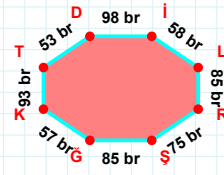
|SB| + |BT| = ....

Cevap: ..... br



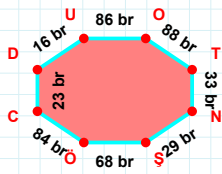
|ÜF| + |UN| = ....

Cevap: ..... br



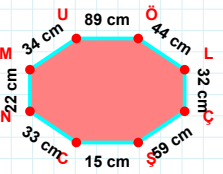
|Dİ| + |RS| = ....

Cevap: ..... br



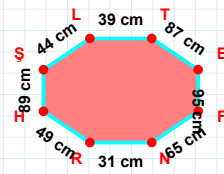
23 br hangi kenara aittir?

Kenar: .....



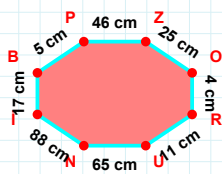
|ÇŞ| kaç cm'dir?

- ☐ 58 cm  
☐ 59 cm  
☐ 60 cm



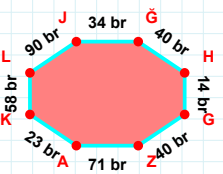
87 cm hangi kenara aittir?

Kenar: .....



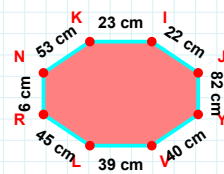
|ZO| kaç cm'dir?

- ☐ 24 cm  
☐ 25 cm  
☐ 26 cm



|LJ| + |KL| = ....

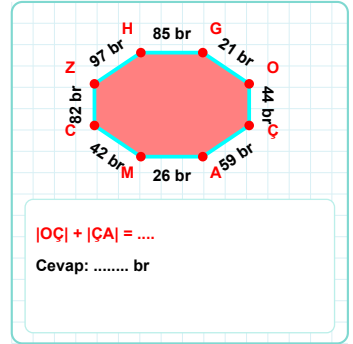
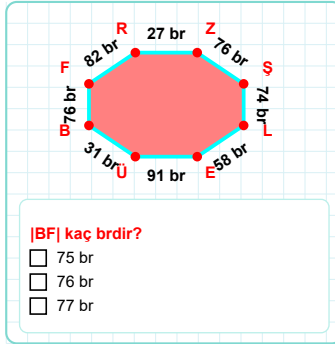
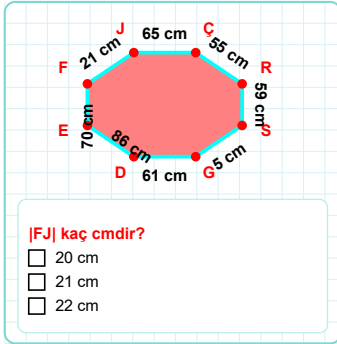
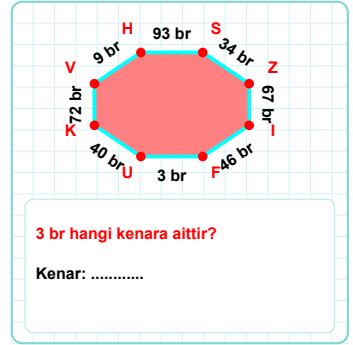
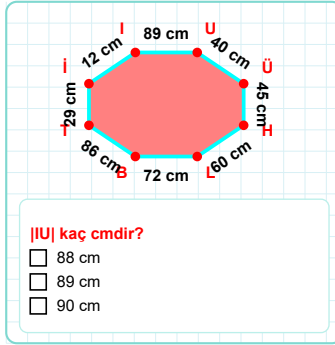
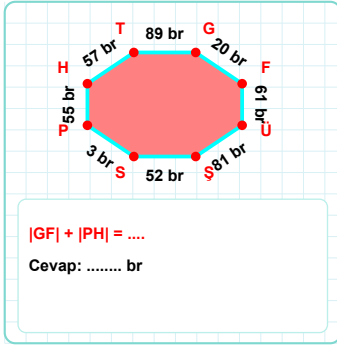
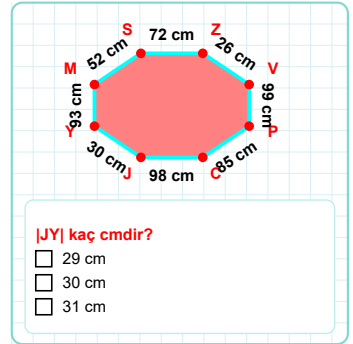
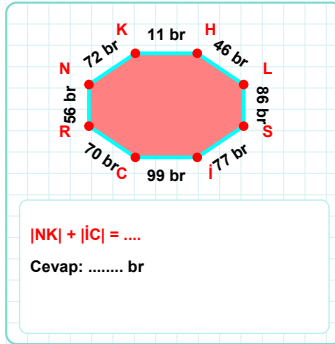
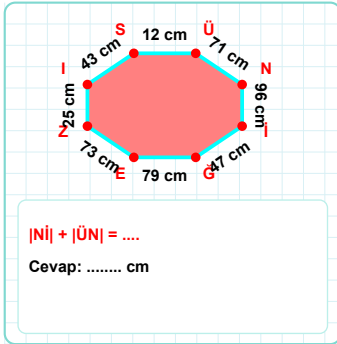
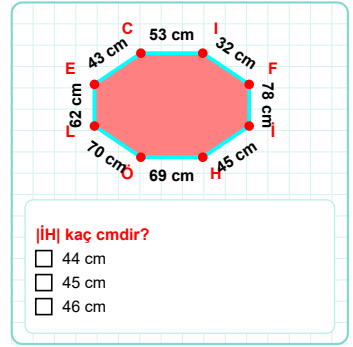
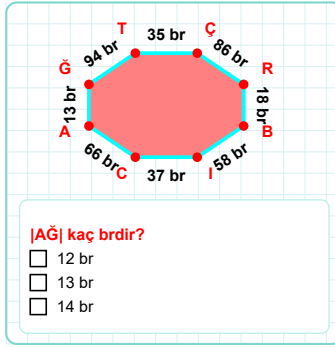
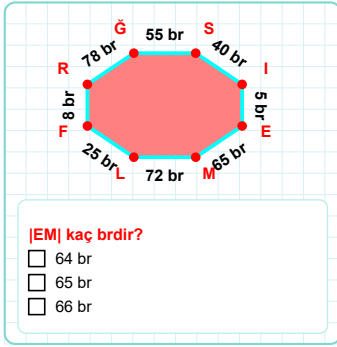
Cevap: ..... br



|YV| + |NK| = ....

Cevap: ..... cm

**SORU:** Aşağıdaki geometrik şekillerle ilgili soruları cevaplayınız.



SÜREÇ ODAKLI DEĞERLENDİRME ÖLÇEĞİ

Doğru Sayısı: ..... / 24

Öğretmen ilgili kutucuğu işaretler.

Geliştirilmeli (0-8)

İyi (9-14)

Çok İyi (15-20)

Mükemmel (21-24)

☐☐☐☐

Hazırlayan: .....

**Bu bölüme sınıfınızın ilgili kazanıma yönelik genel durumuna ilişkin gözlem ve izlenimlerinizi, öğrencilerinizin bu kazanımla ilgili öğrenme eksikliklerini ve bu eksikliklerin giderilmesi amacıyla yaptığınız/yapmayı planladığınız faaliyetleri not edebilirsiniz.**

No	Adı - Soyadı	Toplam Puan	Değerlendirme
1			
2			
3			
4			
5			
6			
7			
8			
9			
10			
11			
12			
13			
14			
15			
16			
17			
18			
19			
20			
21			
22			
23			
24			
25			
26			
27			
28			
29			
30			
31			
32			
33			
34			
35			

**Hazırlayan:** ..... ..