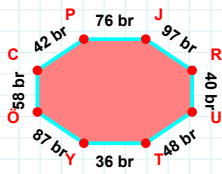
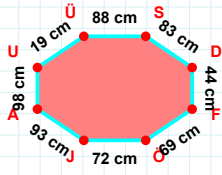


**SORU:** Aşağıdaki geometrik şekillerle ilgili soruları cevaplayınız.



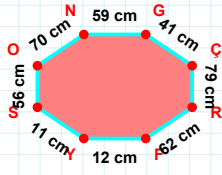
42 br hangi kenara aittir?

- ☐ YR kenarı  
☐ YÖ kenarı  
☐ TY kenarı



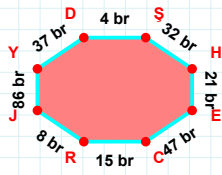
19 cm hangi kenara aittir?

- ☐ AU kenarı  
☐ UF kenarı  
☐ FÖ kenarı



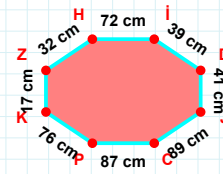
|SO| kaç cm'dir?

- ☐ 55 cm  
☐ 56 cm  
☐ 57 cm



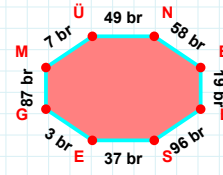
21 br hangi kenara aittir?

Kenar: .....



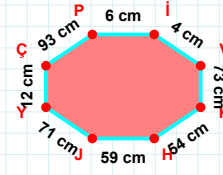
39 cm hangi kenara aittir?

Kenar: .....



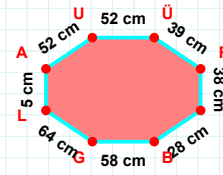
|EG| + |BL| = ....

Cevap: ..... br



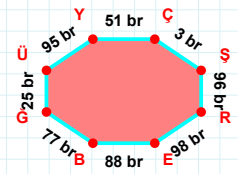
73 cm hangi kenara aittir?

Kenar: .....



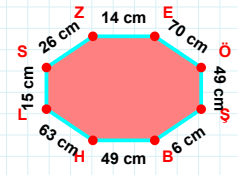
|BG| kaç cm'dir?

- ☐ 57 cm  
☐ 58 cm  
☐ 59 cm



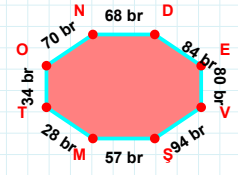
|RE| kaç br'dir?

- ☐ 97 br  
☐ 98 br  
☐ 99 br



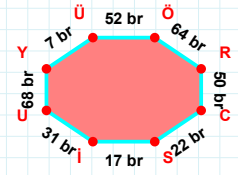
26 cm hangi kenara aittir?

- ☐ SZ kenarı  
☐ ZE kenarı  
☐ ÖH kenarı



80 br hangi kenara aittir?

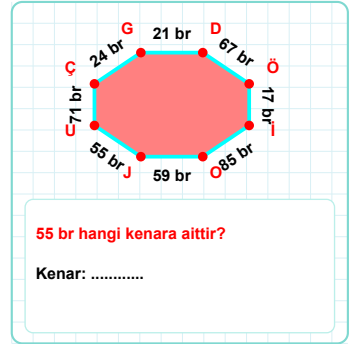
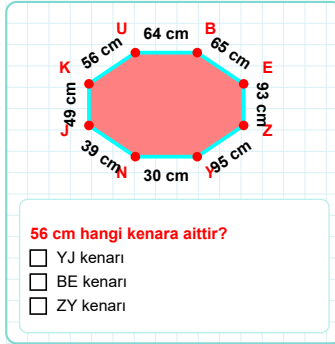
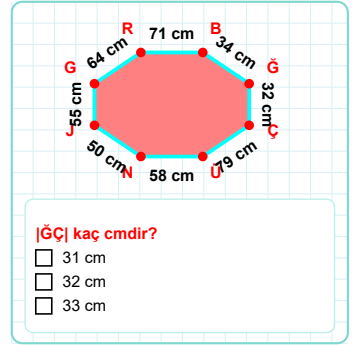
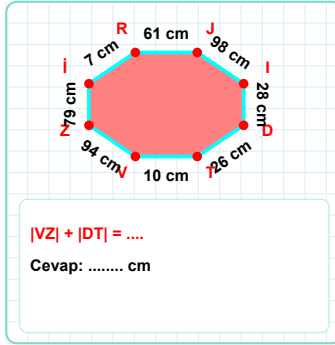
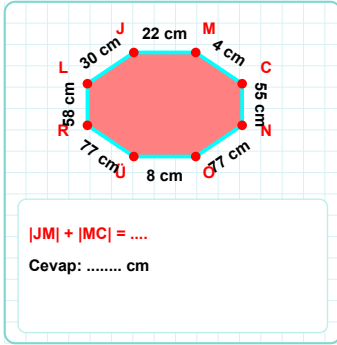
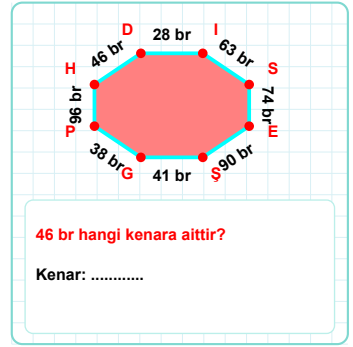
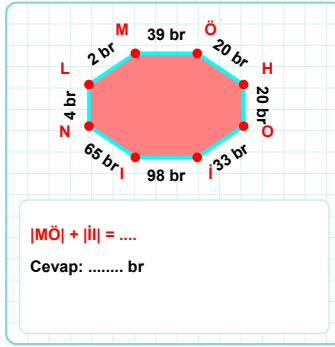
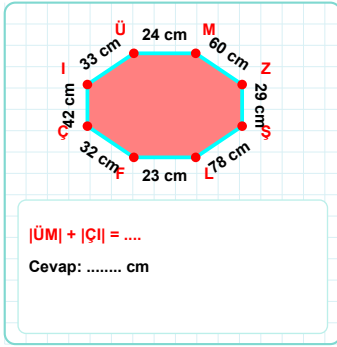
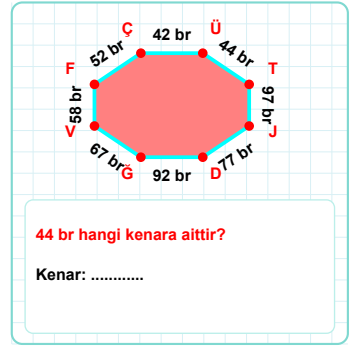
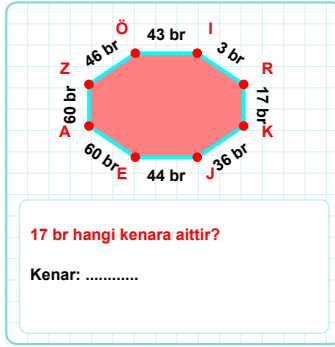
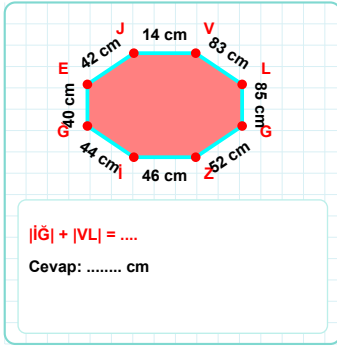
Kenar: .....



|RC| kaç br'dir?

- ☐ 49 br  
☐ 50 br  
☐ 51 br

**SORU:** Aşağıdaki geometrik şekillerle ilgili soruları cevaplayınız.



SÜREÇ ODAKLI DEĞERLENDİRME ÖLÇEĞİ

Doğru Sayısı: ..... / 24

Öğretmen ilgili kutucuğu işaretler.

Geliştirilmeli (0-8)	İyi (9-14)	Çok İyi (15-20)	Mükemmel (21-24)
<input type="checkbox"/>	<input type="checkbox"/>	<input type="checkbox"/>	<input type="checkbox"/>

Hazırlayan: .....

**Bu bölüme sınıfınızın ilgili kazanıma yönelik genel durumuna ilişkin gözlem ve izlenimlerinizi, öğrencilerinizin bu kazanımla ilgili öğrenme eksikliklerini ve bu eksikliklerin giderilmesi amacıyla yaptığınız/yapmayı planladığınız faaliyetleri not edebilirsiniz.**

No	Adı - Soyadı	Toplam Puan	Değerlendirme
1			
2			
3			
4			
5			
6			
7			
8			
9			
10			
11			
12			
13			
14			
15			
16			
17			
18			
19			
20			
21			
22			
23			
24			
25			
26			
27			
28			
29			
30			
31			
32			
33			
34			
35			

**Hazırlayan:** ..... ..