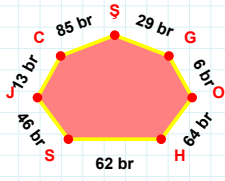
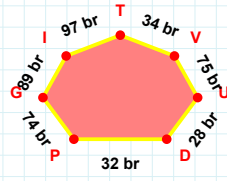


SORU: Aşağıdaki geometrik şekillerle ilgili soruları cevaplayınız.

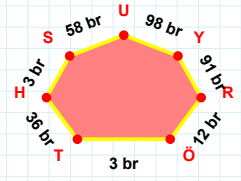
|SH| kaç brdir?

- ☐ 61 br
☐ 62 br
☐ 63 br



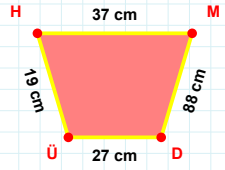
97 br hangi kenara aittir?

Kenar:



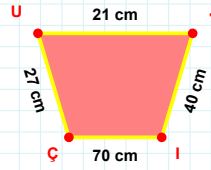
|ÖR| + |RY| =

Cevap: br



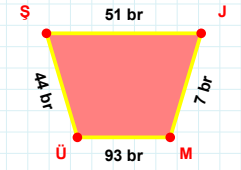
37 cm hangi kenara aittir?

Kenar:



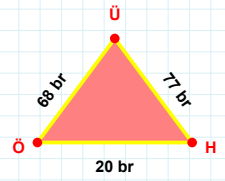
|IÇ| + |UJ| =

Cevap: cm



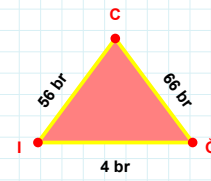
ŞJ kenarı hangi şeklin kenarıdır?

- ☐ Üçgen
☐ Kare
☐ Dikdörtgen



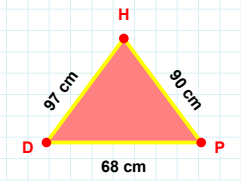
|ÖH| + |ÜÖ| =

Cevap: br



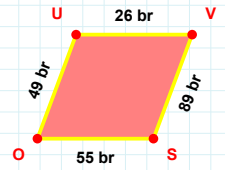
|İĞ| + |ĞC| =

Cevap: br



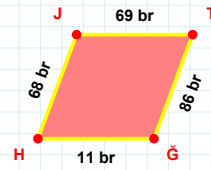
|PH| kaç cmdir?

- ☐ 89 cm
☐ 90 cm
☐ 91 cm



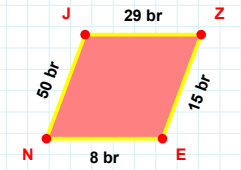
49 br hangi kenara aittir?

Kenar:



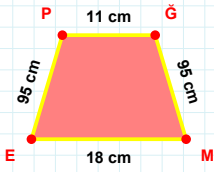
|JT| + |HJ| =

Cevap: br



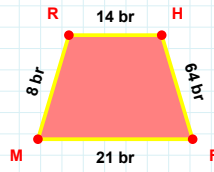
|ZE| + |JZ| =

Cevap: br

SORU: Aşağıdaki geometrik şekillerle ilgili soruları cevaplayınız.

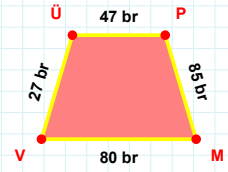
|EP| kaç cm'dir?

- ☐ 94 cm
☐ 95 cm
☐ 96 cm



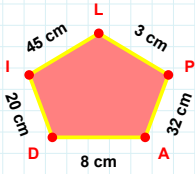
14 br hangi kenara aittir?

Kenar:



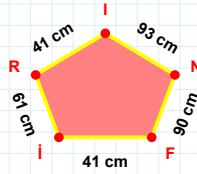
|PM| kaç br'dir?

- ☐ 84 br
☐ 85 br
☐ 86 br



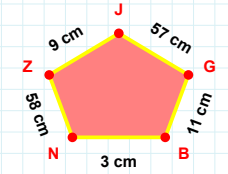
8 cm hangi kenara aittir?

Kenar:



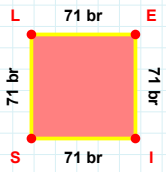
FN kenarı hangi şeklin kenarındır?

- ☐ Üçgen
☐ Kare
☐ Dikdörtgen



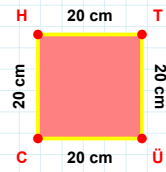
JZ kenarı hangi şeklin kenarındır?

- ☐ Üçgen
☐ Kare
☐ Dikdörtgen



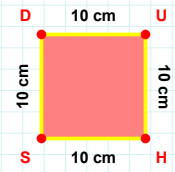
LE kenarı hangi şeklin kenarındır?

- ☐ Üçgen
☐ Kare
☐ Dikdörtgen



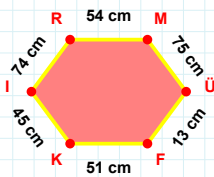
20 cm hangi kenara aittir?

Kenar:



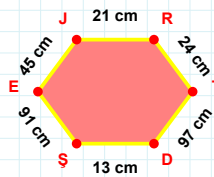
10 cm hangi kenara aittir?

Kenar:



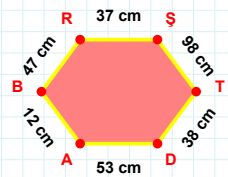
|ÜF| kaç cm'dir?

- ☐ 12 cm
☐ 13 cm
☐ 14 cm



21 cm hangi kenara aittir?

Kenar:



TD kenarı hangi şeklin kenarındır?

- ☐ Üçgen
☐ Kare
☐ Dikdörtgen

SÜREÇ ODAKLI DEĞERLENDİRME ÖLÇEĞİ

Doğru Sayısı: / 24

Öğretmen ilgili kutucuğu işaretler.

Geliştirilmeli (0-8)

İyi (9-14)

Çok İyi (15-20)

Mükemmel (21-24)

☐
☐
☐
☐

Hazırlayan:

Bu bölüme sınıfınızın ilgili kazanıma yönelik genel durumuna ilişkin gözlem ve izlenimlerinizi, öğrencilerinizin bu kazanımla ilgili öğrenme eksikliklerini ve bu eksikliklerin giderilmesi amacıyla yaptığınız/yapmayı planladığınız faaliyetleri not edebilirsiniz.

No	Adı - Soyadı	Toplam Puan	Değerlendirme
1			
2			
3			
4			
5			
6			
7			
8			
9			
10			
11			
12			
13			
14			
15			
16			
17			
18			
19			
20			
21			
22			
23			
24			
25			
26			
27			
28			
29			
30			
31			
32			
33			
34			
35			

Hazırlayan: