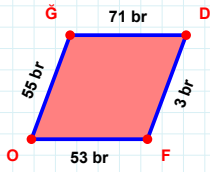
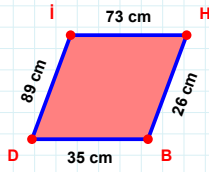


SORU: Aşağıdaki geometrik şekillerle ilgili soruları cevaplayınız.



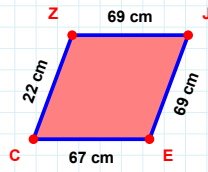
71 br hangi kenara aittir?

Kenar:

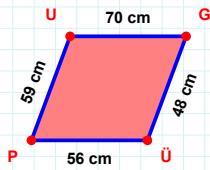


35 cm hangi kenara aittir?

Kenar:

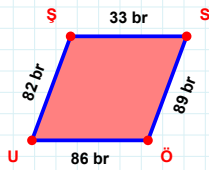
 $|JE| + |EC| = \dots$

Cevap: cm

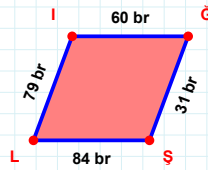


59 cm hangi kenara aittir?

- ☐ ÜP kenarı
☐ PU kenarı
☐ PG kenarı

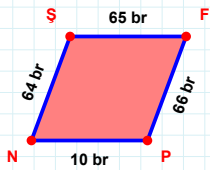
 $|ÖU|$ kaç brdir?

- ☐ 85 br
☐ 86 br
☐ 87 br



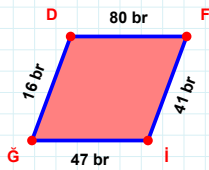
60 br hangi kenara aittir?

Kenar:



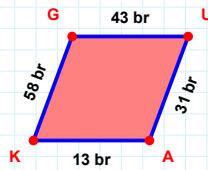
64 br hangi kenara aittir?

- ☐ PN kenarı
☐ ŞP kenarı
☐ NŞ kenarı

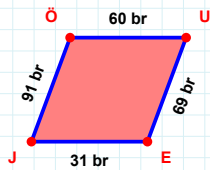


80 br hangi kenara aittir?

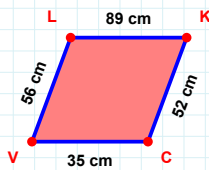
Kenar:

 $|AK| + |UA| = \dots$

Cevap: br

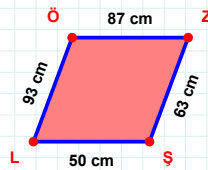
 $|UE| + |ÖU| = \dots$

Cevap: br



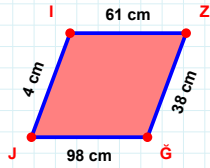
56 cm hangi kenara aittir?

- ☐ LK kenarı
☐ CL kenarı
☐ VL kenarı

 $|ZŞ|$ kaç cm'dir?

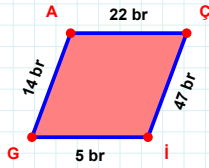
- ☐ 62 cm
☐ 63 cm
☐ 64 cm

SORU: Aşağıdaki geometrik şekillerle ilgili soruları cevaplayınız.



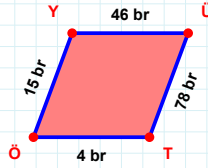
|GJ| kaç cm'dir?

- ☐ 97 cm
☐ 98 cm
☐ 99 cm



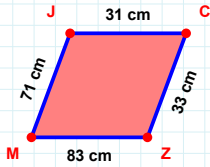
|GA| + |AC| =

Cevap: br



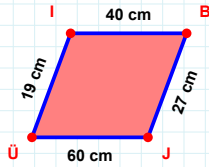
15 br hangi kenara aittir?

- ☐ ÜT kenarı
☐ TÖ kenarı
☐ YT kenarı



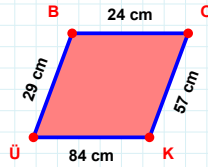
|JC| kaç cm'dir?

- ☐ 30 cm
☐ 31 cm
☐ 32 cm



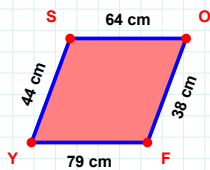
19 cm hangi kenara aittir?

Kenar:



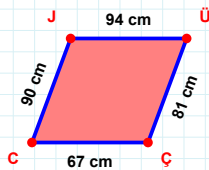
29 cm hangi kenara aittir?

Kenar:



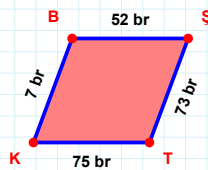
|FY| + |SO| =

Cevap: cm



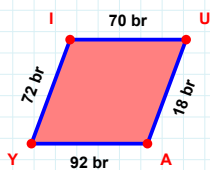
90 cm hangi kenara aittir?

Kenar:



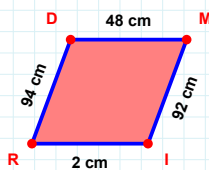
7 br hangi kenara aittir?

- ☐ TB kenarı
☐ KB kenarı
☐ ŞT kenarı



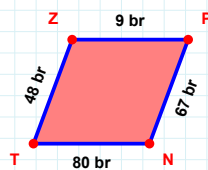
|UA| kaç br'dir?

- ☐ 17 br
☐ 18 br
☐ 19 br



94 cm hangi kenara aittir?

- ☐ RD kenarı
☐ ID kenarı
☐ IR kenarı



67 br hangi kenara aittir?

Kenar:

SÜREÇ ODAKLI DEĞERLENDİRME ÖLÇEĞİ

Doğru Sayısı: / 24

Öğretmen ilgili kutucuğu işaretler.

Geliştirilmeli (0-8)

İyi (9-14)

Çok İyi (15-20)

Mükemmel (21-24)

☐
☐
☐
☐

Hazırlayan:

Bu bölüme sınıfınızın ilgili kazanıma yönelik genel durumuna ilişkin gözlem ve izlenimlerinizi, öğrencilerinizin bu kazanımla ilgili öğrenme eksikliklerini ve bu eksikliklerin giderilmesi amacıyla yaptığınız/yapmayı planladığınız faaliyetleri not edebilirsiniz.

No	Adı - Soyadı	Toplam Puan	Değerlendirme
1			
2			
3			
4			
5			
6			
7			
8			
9			
10			
11			
12			
13			
14			
15			
16			
17			
18			
19			
20			
21			
22			
23			
24			
25			
26			
27			
28			
29			
30			
31			
32			
33			
34			
35			

Hazırlayan: