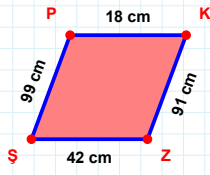
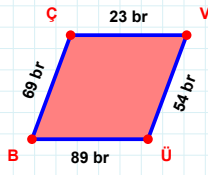


SORU: Aşağıdaki geometrik şekillerle ilgili soruları cevaplayınız.

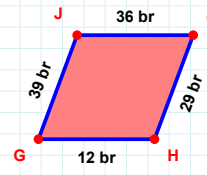
$|KZ| + |PK| = \dots$

Cevap: cm



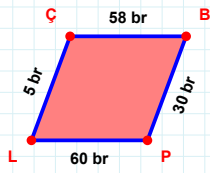
$|BC| + |VÜ| = \dots$

Cevap: br



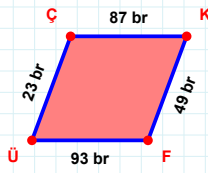
39 br hangi kenara aittir?

Kenar:



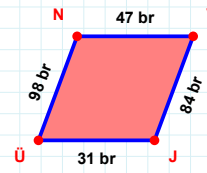
|LÇ| kaç brdir?

- ☐ 4 br
☐ 5 br
☐ 6 br



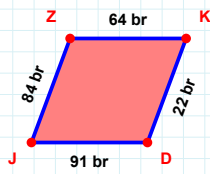
|FÜ| kaç brdir?

- ☐ 92 br
☐ 93 br
☐ 94 br



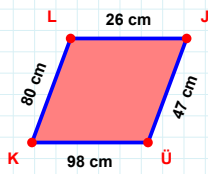
$|NV| + |VJ| = \dots$

Cevap: br



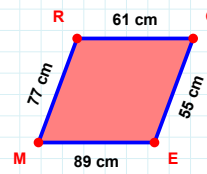
84 br hangi kenara aittir?

- ☐ KD kenarı
☐ DZ kenarı
☐ JZ kenarı



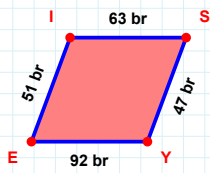
|LJ| kaç cmdir?

- ☐ 25 cm
☐ 26 cm
☐ 27 cm



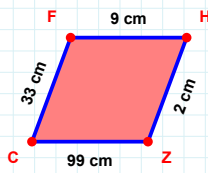
$|RG| + |MR| = \dots$

Cevap: cm



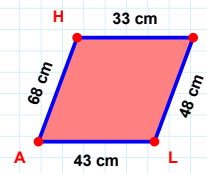
$|YE| + |EI| = \dots$

Cevap: br



$|FH| + |CF| = \dots$

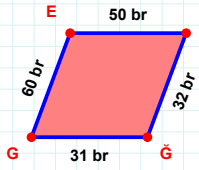
Cevap: cm



43 cm hangi kenara aittir?

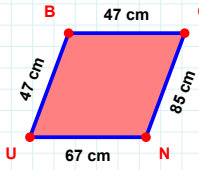
Kenar:

SORU: Aşağıdaki geometrik şekillerle ilgili soruları cevaplayınız.

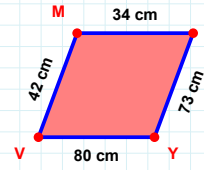


60 br hangi kenara aittir?

- ☐ GS kenarı
☐ SĞ kenarı
☐ ES kenarı

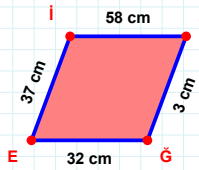
 $|UB| + |BC| = \dots$

Cevap: cm



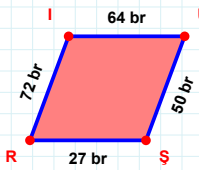
42 cm hangi kenara aittir?

- ☐ MA kenarı
☐ VA kenarı
☐ YV kenarı

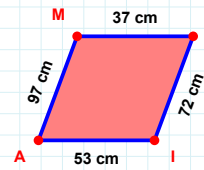


58 cm hangi kenara aittir?

Kenar:

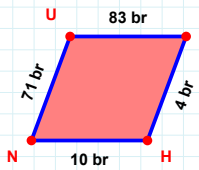
 $|US|$ kaç brdir?

- ☐ 49 br
☐ 50 br
☐ 51 br



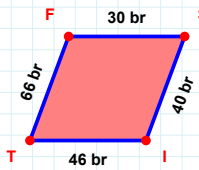
97 cm hangi kenara aittir?

- ☐ AM kenarı
☐ ME kenarı
☐ AE kenarı

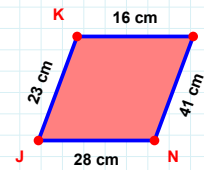


4 br hangi kenara aittir?

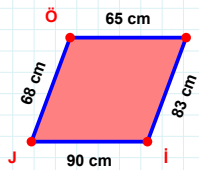
Kenar:

 $|IT|$ kaç brdir?

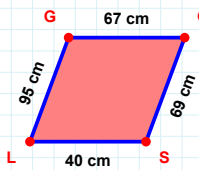
- ☐ 45 br
☐ 46 br
☐ 47 br

 $|JK|$ kaç cmdir?

- ☐ 22 cm
☐ 23 cm
☐ 24 cm

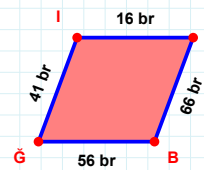
 $|J|$ kaç cmdir?

- ☐ 89 cm
☐ 90 cm
☐ 91 cm



95 cm hangi kenara aittir?

- ☐ LĞ kenarı
☐ GĞ kenarı
☐ GS kenarı



56 br hangi kenara aittir?

Kenar:

SÜREÇ ODAKLI DEĞERLENDİRME ÖLÇEĞİ

Doğru Sayısı: / 24

Öğretmen ilgili kutucuğu işaretler.

Geliştirilmeli (0-8)

İyi (9-14)

Çok İyi (15-20)

Mükemmel (21-24)

☐
☐
☐
☐

Hazırlayan:

Bu bölüme sınıfınızın ilgili kazanıma yönelik genel durumuna ilişkin gözlem ve izlenimlerinizi, öğrencilerinizin bu kazanımla ilgili öğrenme eksikliklerini ve bu eksikliklerin giderilmesi amacıyla yaptığınız/yapmayı planladığınız faaliyetleri not edebilirsiniz.

No	Adı - Soyadı	Toplam Puan	Değerlendirme
1			
2			
3			
4			
5			
6			
7			
8			
9			
10			
11			
12			
13			
14			
15			
16			
17			
18			
19			
20			
21			
22			
23			
24			
25			
26			
27			
28			
29			
30			
31			
32			
33			
34			
35			

Hazırlayan: