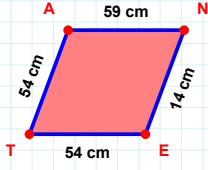
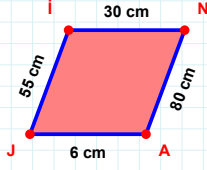


SORU: Aşağıdaki geometrik şekillerle ilgili soruları cevaplayınız.



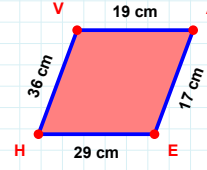
54 cm hangi kenara aittir?

- ☐ ET kenarı
☐ TN kenarı
☐ TA kenarı



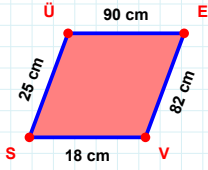
30 cm hangi kenara aittir?

Kenar:



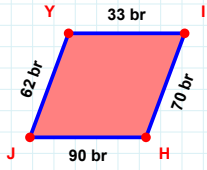
19 cm hangi kenara aittir?

Kenar:



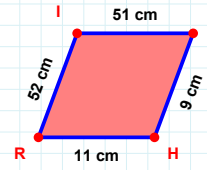
|SÜ| kaç cm'dir?

- ☐ 24 cm
☐ 25 cm
☐ 26 cm



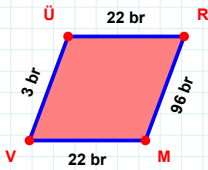
|IH| + |JY| =

Cevap: br



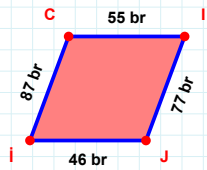
11 cm hangi kenara aittir?

Kenar:



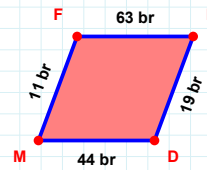
3 br hangi kenara aittir?

- ☐ ÜR kenarı
☐ ÜM kenarı
☐ VÜ kenarı



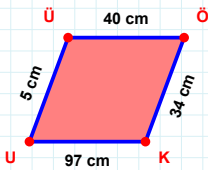
|CI| kaç br'dir?

- ☐ 54 br
☐ 55 br
☐ 56 br



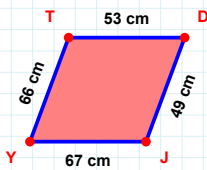
44 br hangi kenara aittir?

Kenar:



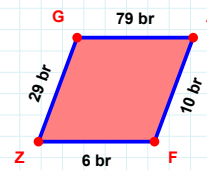
|KU| + |ÜÖ| =

Cevap: cm



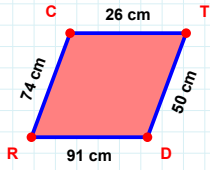
67 cm hangi kenara aittir?

Kenar:



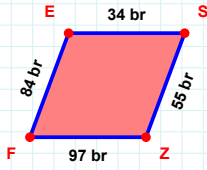
|ZG| + |FZ| =

Cevap: br

SORU: Aşağıdaki geometrik şekillerle ilgili soruları cevaplayınız.

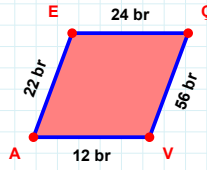
50 cm hangi kenara aittir?

Kenar:



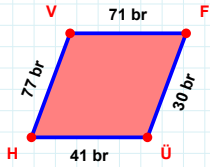
34 br hangi kenara aittir?

Kenar:



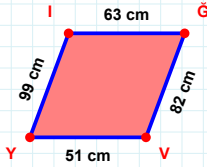
22 br hangi kenara aittir?

- ☐ VA kenarı
☐ AÇ kenarı
☐ AE kenarı



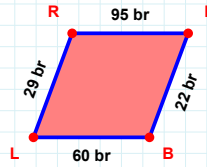
77 br hangi kenara aittir?

- ☐ ÜH kenarı
☐ FÜ kenarı
☐ HF kenarı



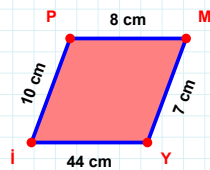
99 cm hangi kenara aittir?

- ☐ VI kenarı
☐ GV kenarı
☐ IÇ kenarı



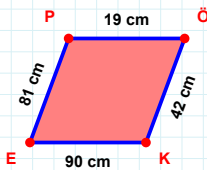
22 br hangi kenara aittir?

Kenar:



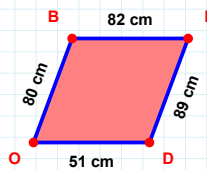
|Yİ| kaç cm'dir?

- ☐ 43 cm
☐ 44 cm
☐ 45 cm



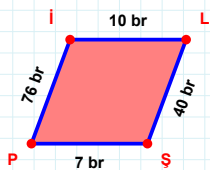
90 cm hangi kenara aittir?

Kenar:



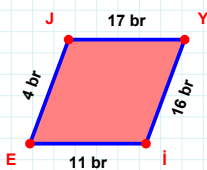
|ID| + |OB| =

Cevap: cm



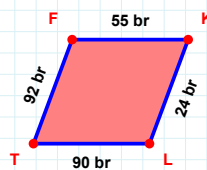
76 br hangi kenara aittir?

Kenar:



|JY| kaç br'dir?

- ☐ 16 br
☐ 17 br
☐ 18 br



92 br hangi kenara aittir?

Kenar:

SÜREÇ ODAKLI DEĞERLENDİRME ÖLÇEĞİ

Doğru Sayısı: / 24

Öğretmen ilgili kutucuğu işaretler.

Geliştirilmeli (0-8)

İyi (9-14)

Çok İyi (15-20)

Mükemmel (21-24)

☐
☐
☐
☐

Hazırlayan:

Bu bölüme sınıfınızın ilgili kazanıma yönelik genel durumuna ilişkin gözlem ve izlenimlerinizi, öğrencilerinizin bu kazanımla ilgili öğrenme eksikliklerini ve bu eksikliklerin giderilmesi amacıyla yaptığınız/yapmayı planladığınız faaliyetleri not edebilirsiniz.

No	Adı - Soyadı	Toplam Puan	Değerlendirme
1			
2			
3			
4			
5			
6			
7			
8			
9			
10			
11			
12			
13			
14			
15			
16			
17			
18			
19			
20			
21			
22			
23			
24			
25			
26			
27			
28			
29			
30			
31			
32			
33			
34			
35			

Hazırlayan: