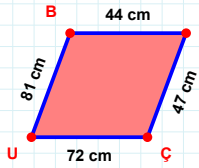
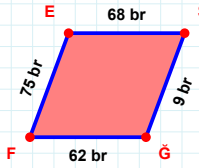
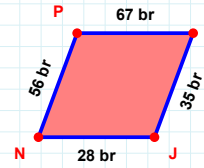


SORU: Aşağıdaki geometrik şekillerle ilgili soruları cevaplayınız. $|BS| + |UB| = \dots$

Cevap: cm

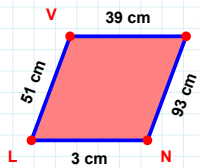
 $|SG|$ kaç brdir?

- ☐ 8 br
☐ 9 br
☐ 10 br

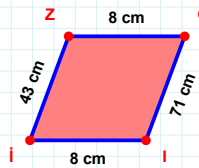


56 br hangi kenara aittir?

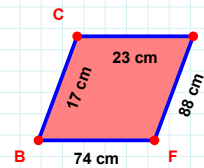
- ☐ NH kenarı
☐ PH kenarı
☐ HJ kenarı

 $|VA|$ kaç cmdir?

- ☐ 38 cm
☐ 39 cm
☐ 40 cm

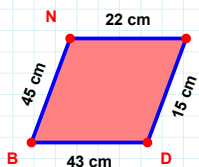
 $|CI|$ kaç cmdir?

- ☐ 70 cm
☐ 71 cm
☐ 72 cm

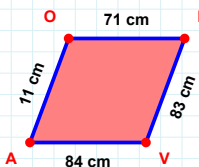


88 cm hangi kenara aittir?

Kenar:

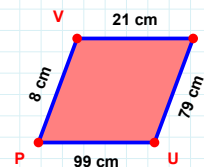
 $|DB| + |BN| = \dots$

Cevap: cm

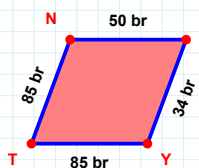


84 cm hangi kenara aittir?

Kenar:

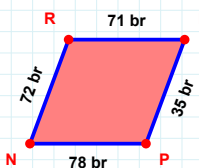
 $|VS|$ kaç cmdir?

- ☐ 20 cm
☐ 21 cm
☐ 22 cm

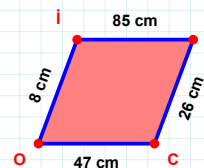


85 br hangi kenara aittir?

Kenar:

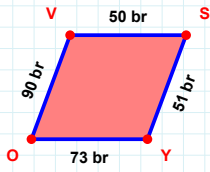
 $|RF|$ kaç brdir?

- ☐ 70 br
☐ 71 br
☐ 72 br



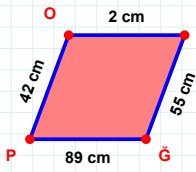
8 cm hangi kenara aittir?

- ☐ İZ kenarı
☐ Cİ kenarı
☐ ZC kenarı

SORU: Aşağıdaki geometrik şekillerle ilgili soruları cevaplayınız.

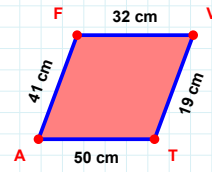
90 br hangi kenara aittir?

- ☐ SY kenarı
☐ SO kenarı
☐ OV kenarı



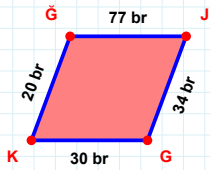
42 cm hangi kenara aittir?

Kenar:



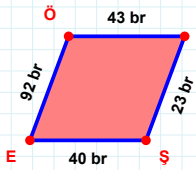
|AF| kaç cm'dir?

- ☐ 40 cm
☐ 41 cm
☐ 42 cm



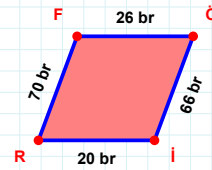
30 br hangi kenara aittir?

Kenar:



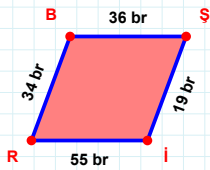
92 br hangi kenara aittir?

- ☐ ÖM kenarı
☐ SE kenarı
☐ ÖS kenarı



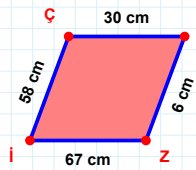
|İR| + |RF| =

Cevap: br



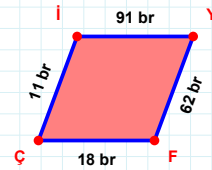
34 br hangi kenara aittir?

- ☐ SR kenarı
☐ SI kenarı
☐ RB kenarı



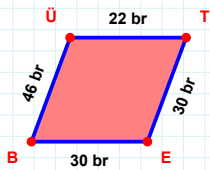
58 cm hangi kenara aittir?

- ☐ İÇ kenarı
☐ Zİ kenarı
☐ İO kenarı



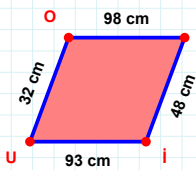
11 br hangi kenara aittir?

- ☐ İF kenarı
☐ İY kenarı
☐ FÇ kenarı



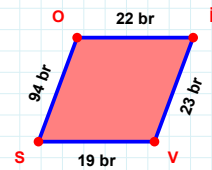
46 br hangi kenara aittir?

- ☐ ÜE kenarı
☐ TE kenarı
☐ EB kenarı



93 cm hangi kenara aittir?

Kenar:



22 br hangi kenara aittir?

Kenar:

SÜREÇ ODAKLI DEĞERLENDİRME ÖLÇEĞİ

Doğru Sayısı: / 24

Öğretmen ilgili kutucuğu işaretler.

Geliştirilmeli (0-8)

İyi (9-14)

Çok İyi (15-20)

Mükemmel (21-24)

☐☐☐☐

Hazırlayan:

Bu bölüme sınıfınızın ilgili kazanıma yönelik genel durumuna ilişkin gözlem ve izlenimlerinizi, öğrencilerinizin bu kazanımla ilgili öğrenme eksikliklerini ve bu eksikliklerin giderilmesi amacıyla yaptığınız/yapmayı planladığınız faaliyetleri not edebilirsiniz.

No	Adı - Soyadı	Toplam Puan	Değerlendirme
1			
2			
3			
4			
5			
6			
7			
8			
9			
10			
11			
12			
13			
14			
15			
16			
17			
18			
19			
20			
21			
22			
23			
24			
25			
26			
27			
28			
29			
30			
31			
32			
33			
34			
35			

Hazırlayan: